



From the school book

Exercise 5*On factorizing the sum and difference of two cubes***1** Factorize each of the following :

1 $x^3 + 8$

4 $8x^3 - 125$

7 $m^3 + 64n^3$

10 $27x^3y^3 - 64$

13 $8a^3 + 0.001$

16 $8x^3 - 343y^6$

2 $x^3 - 1$

5 $125 + a^3$

8 $512x^3 - y^3$

11 $\frac{1}{8}a^3 - 8b^3$

14 $0.027m^3 - n^3$

17 $x^6 + y^6$

3 $64x^3 + 27$

6 $343 - 27m^3$

9 $x^3y^3 + 27$

12 $l^3 - \frac{1}{125}$

15 $1 + 125b^6$

18 $x^6 - 64$

2 Factorize each of the following perfectly :

1 $2x^3 + 16$

4 $l^3m - 27m^4$

7 $16x^3 + 250y^3$

10 $500x^8y^2 - 256x^5y^5$

2 $3x^3 - 81$

5 $3x^4 + 3x$

8 $16a^3b + 686b^4$

11 $\frac{1}{2}x^3 + 4$

3 $l^4 + 64l$

6 $2x^5 - 54x^2$

9 $54x^4y^2 - 16xy^5$

12 $\frac{1}{3}x^3 - 9$

3 Choose the correct answer from those given :

1 If $x + y = 3$, $x^2 - xy + y^2 = 5$, then $x^3 + y^3 = \dots\dots\dots$

- (a) 15 (b) 25 (c) 8 (d) 7

2 If $x^3 - y^3 = 14$, $x^2 + xy + y^2 = 7$, then $x - y = \dots\dots\dots$

- (a) 2 (b) 7 (c) 14 (d) -2

3 If $x^3 + y^3 = 28$, $x + y = 2$, then $x^2 - xy + y^2 = \dots\dots\dots$

- (a) 28 (b) 14 (c) 2 (d) 7

4 If $y^3 - a = (y - 2)(y^2 + 2y + 4)$, then $a = \dots\dots\dots$

- (a) 2 (b) 4 (c) 8 (d) -8

5 If $x^3 - 8 = (x + a)(x^2 + 2x + 4)$, then $a = \dots\dots\dots$

- (a) 4 (b) -4 (c) 2 (d) -2

6 If $x^3 + 27 = (x + 3)(x^2 + kx + 9)$, then "k" equals $\dots\dots\dots$

- (a) -6x (b) -3x (c) 3x (d) 6x

7 $x^3 - k^3 = (x - k)(x^2 + 4x + k^2)$, then $k = \dots\dots\dots$

- (a) 2 (b) 4 (c) 16 (d) 64

8 $(x - y)(x + y)(x^4 + x^2y^2 + y^4) = \dots\dots\dots$

- (a)
- $x^3 - y^3$
- (b)
- $x^3 + y^3$
- (c)
- $x^6 - y^6$
- (d)
- $x^6 + y^6$

4 Complete the following to get true statement :

1 $x^3 - 1 = (x - 1)(\dots\dots\dots)$

2 $8a^3 + 125 = (\dots\dots\dots + \dots\dots\dots)(4a^2 - 10a + \dots\dots\dots)$

3 $x^{12} + y^{15} = (\dots\dots\dots + \dots\dots\dots)(\dots\dots\dots - \dots\dots\dots + \dots\dots\dots)$

4 $8a^3 - \dots\dots\dots = (\dots\dots\dots - \dots\dots\dots)(\dots\dots\dots + \dots\dots\dots + 9)$

5 If $x - 3$ is a factor of the expression $x^3 - 27$, then the second factor is

6 If $4a^2 - 2a + 1$ is a factor of the expression $8a^3 + 1$, then the other factor is

5 If $x^2 - y^2 = 20$, $x - y = 2$, $x^2 - xy + y^2 = 28$

Find the value of $x^3 + y^3$

6 Factorize each of the following :

1 $(a + b)^3 - b^3$

3 $(m - 2n)^3 - 8n^3$

5 $2 - 2(x - 1)^3$

7 $(x + y)^3 - (x - y)^3$

9 $(x^3 - 2)(x^3 + 2) - 4$

2 $(x + 5)^3 - 125$

4 $8(m + n)^3 - n^3$

6 $(x + 5)^3 + (x - 5)^3$

8 $(m - n) + (m - n)^4$

10 $(x - 3)(x^2 + 3x + 9) + 28$

7 Factorize each of the following :

1 $m^6 - 3m^3 + 2$

3 $x^6 - 28x^3 + 27$

2 $y^6 + 26y^3 - 27$

4 $x^6 - 7x^3 - 8$



For excellent pupils

8 Factorize perfectly : $(x + 5)^4 - x - 5$

9 If $xy = 2$, $x - y = 1$, then find the value of $x^3 - y^3$

10 Two integers whose sum is 2 and the sum of their squares = 34 Find the sum of their cubes.

EL-MASSER

NOTEBOOK

Answer

in the same notebook papers





From the school book

Exercise 6

On factorizing by grouping

1 Factorize each of the following perfectly :

1 $aX + bX + aY + bY$

3 $aX + YX + Y + a$

5 $aX - cY - cX + aY$

7 $XY + 5Y + 7X + 35$

9 $5l - 10m - al + 2am$

2 $ab - bd + ah - dh$

4 $am - an + m - n$

6 $mX - mY - nX + nY$

8 $7X - 28 + aX - 4a$

10 $3aX - a - 6bX + 2b$

2 Factorize each of the following perfectly :

1 $c^2 + cd + dh + ch$

3 $8mn - 2m^2 + 12nl - 3ml$

5 $a^2 + 2ab + b^2 - c^2$

7 $1 - X^2 - 4XY - 4Y^2$

9 $X^2 - 5X - 4Y^2 + 10Y$

11 $2X^2Y - XY^2 + 2aX - aY$

2 $6m^2 - n + 2m - 3mn$

4 $X^2 - 2XZ - 2XY + 4YZ$

6 $25X^2 - 10X + 1 - Y^2$

8 $X^2 - Y^2 + 4X + 4Y$

10 $9X^2 - 4a^2 + Y^2 + 6XY$

12 $abX^2 + bX - aX - 1$

3 Factorize each of the following perfectly :

1 $a^3 + a^2 + a + 1$

3 $a^3 + b^3 - a - b$

5 $a^3 - 9a + a^2 - 9$

7 $y^3 + 6y^2 + 12y + 8$

9 $a^5 - 2a^2 + a^3 - 2$

2 $X^3 - 3X^2 + 6X - 18$

4 $X^3 + 2X^2 - X - 2$

6 $3X^3 + 2X^2 + 12X + 8$

8 $a^4 - 3a^3 - 15a + 5a^2$

10 $X^2Y^3 + 8X^2 - Y^3 - 8$

4 Factorize each of the following perfectly :

1 $X^5 - X^3 - X^2 + 1$

2 $4m^4 - 9m^2 + 6m - 1$

3 $121X^4 - 100X^2 - 20X - 1$

Geometric Applications

5 A rectangle whose area is $(X^3 + 5X^2 + 3X + 15) \text{ cm}^2$

and width $(X + 5) \text{ cm}$, find its length in terms of X

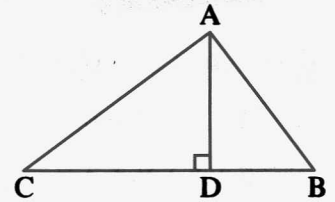
, then find its perimeter when $X = 2 \text{ cm}$.

6 In the opposite figure :

ABC is a triangle of area $\frac{1}{2} (x^3 + 2x + 2x^2 + 4) \text{ cm}^2$

If its altitude AD is $(x + 2) \text{ cm}$.

, what is the length of its base \overline{BC} ?



For excellent pupils

7 Factorize each of the following perfectly :

1 $2x^3(x+3) - 18x^2 - 54x$

3 $a^3 - 4b^3 + ab(a - 4b)$

2 $a(a + 4b) + 4b^2 - 9$

4 $a^2(b - 5) - 7a(b - 5) - 18b + 90$

8 Factorize each of the following perfectly :

1 $x^2 - 4xy + x - 2y + 4y^2$

3 $a^3 + a - 2$

2 $3x^2 - 15x - 72 - xy + 8y$

4 $a^3 + a^2 + 4$



From the school book

Exercise 7**On factorizing by completing the square****1** Factorize each of the following perfectly :

1 $x^4 + 4$

3 $x^4 + 4y^4$

5 $a^4 + 2500b^4$

7 $4x^4 + 625z^4$

9 $12x^4 + 3y^4$

2 $x^4 + 64$

4 $x^4 + 64y^4$

6 $81x^4 + 4z^4$

8 $64x^4 + 81y^4$

10 $8x^4y^2 + 162z^4y^2$

2 Factorize each of the following completely :

1 $9x^4 + 2x^2 + 1$

3 $x^4 + 9x^2 + 81$

5 $x^4 + 3x^2y^2 + 4y^4$

7 $x^4 + x^2y^2 + 25y^4$

9 $x^4 + y^4 - 7x^2y^2$

11 $4x^4 + 25y^4 - 29x^2y^2$

13 $50x^4 + 18y^4 - 68x^2y^2$

2 $x^4 - 28x^2 + 16$

4 $9x^4 - 25x^2 + 16$

6 $m^4 - 11m^2n^2 + n^4$

8 $a^4 + 4a^2b^2 + 16b^4$

10 $16x^4 - 28x^2y^2 + 9y^4$

12 $3m^4 + 3n^4 - 54m^2n^2$

14 $18ab^4 - 114b^2c^2a + 128ac^4$

3 Factorize each of the following completely :

1 $x^2(9x^2 - 10y^2) + y^4$

3 $4x^2(4x^2 - 7y^2) + y^4$

2 $x^2(x^2 - 19y^2) + 25y^4$

4 $4a^2(a^2 - 6b^2) + 9b^4$

**For excellent pupils****4** Factorize each of the following completely :

1 $x^8 - 16y^8$

3 $x^8 - 5x^4y^4 - 36y^8$

2 $x^8 - 21x^4 - 100$

4 $81x^8 - 17x^4y^4 - 64y^8$

GENERAL EXERCISE ON FACTORIZING THE ALGEBRAIC EXPRESSIONS

Solve each of the following perfectly :

1 $25x^2 - 9y^2$

3 $2y^2 + 5y + 3$

5 $2x^2 - 20x + 48$

7 $8x^3 + 27$

9 $25x^2 - 30x + 9$

11 $y^5 - y$

13 $x^2 - 8x + 12$

15 $x^3 - 125$

17 $a^3 + 3a^2 - 9a - 27$

19 $-2x^2 - 15x - 7$

21 $4x^4 + y^4$

23 $x^4 - 9x^2 + 20$

25 $a^6 - 625b^6$

27 $49x^2 + 70xy + 25y^4$

29 $x^4 - 11x^2y^2 + y^4$

31 $3x^2 - 19x + 6$

33 $x^6 - 64y^6$

35 $15a^4 - 21b^2 - 6a^2b$

37 $64x^4 + y^4$

39 $20x^4 + 40x^2y^2 + 45y^4$

2 $2x^5 + 54x^2$

4 $2x^4 - 18$

6 $x^2 + 8x + 16$

8 $y^2 - 50y - 51$

10 $x^2 - 81$

12 $3x^2 + 7x - 6$

14 $3x^3 + 2x^2 + 12x + 8$

16 $4x^2 - 12x + 9$

18 $(x+2)^3 - 4x - 8$

20 $x^2 - 7x + 10$

22 $9x^4 - 16y^4$

24 $1 - 4x^2$

26 $(x+y)^3 - x^3$

28 $5x^2 - 3x - 2$

30 $3x^4 - 15x^3 + 12x^2$

32 $4x^2 + 28xy + 49y^2$

34 $2y^4 - 4y^3 + 7y - 14$

36 $6x^2 + y(2y - 7x)$

38 $x^4 - 5x^2 - 24$

40 $9x^4 - 13x^2y^2 + 4y^4$



From the school book

Exercise 8

On solving quadratic equations in one variable algebraically

1 Find in \mathbb{R} the S.S. of each of the following equations :

1 $x^2 - 6x = 0$

3 $4x^2 - 25 = 0$

5 $x^2 - 8x + 15 = 0$

7 $x^2 - x - 20 = 0$

9 $2x^2 + 7x - 4 = 0$

11 $x^2 + 4x + 4 = 0$

2 $x^2 - 16 = 0$

4 $x^2 + 5x + 6 = 0$

6 $x^2 + 7x - 18 = 0$

8 $6x^2 - 7x - 3 = 0$

10 $2x^2 - 5x - 3 = 0$

12 $9x^2 - 6x + 1 = 0$

2 Find in \mathbb{R} the S.S. of the following equations :

1 $x^2 = x$

4 $x^2 + x = 6$

7 $2x^2 - 10x = -12$

10 $12x^2 = 47x - 45$

2 $3x^2 = 7x$

5 $x^2 - 8x = -15$

8 $6x^2 - x = 22$

11 $5(x^2 + 3) = 60$

3 $4x^2 = 49$

6 $x^2 - 15 = 2x$

9 $5x^2 + 12x = 44$

12 $x(x - 3) = 5x$

3 Find in \mathbb{R} the S.S. of each of the following equations :

1 $x(x - 5) + 6 = 0$

3 $(x + 4)(x - 2) + 5 = 0$

5 $(x + 8)(x - 3) = 3x$

7 $(x + 3)^2 - 49 = 0$

9 $4(x + 5)^2 = 25$

11 $2(x + 3)^2 + 7(x + 3) = 0$

13 $(2x - 1)^2 + (x - 1)^2 = 10$

2 $x(x + 3) = 10$

4 $(x - 3)(x + 1) = 5$

6 $2x(x - 5) - 4(5 - x) = 0$

8 $(x - 2)^2 = 81$

10 $(x - 1)^2 + x = 3$

12 $(2x + 1)^2 = (3x - 1)^2$

14 $(x + 3)^2 + 3(x + 3) - 10 = 0$

4 Find in \mathbb{R} the S.S. of each of the following equations :

1 $2x^3 - 8x = 0$

3 $x^4 - 5x^2 + 4 = 0$

5 $x^4 - 16 = 0$

2 $4x^3 = 9x$

4 $x^4 - 26x^2 = -25$

5 Find in \mathbb{R} the S.S. of each of the following equations :

1 $y^2 - \frac{7y}{3} = -\frac{4}{3}$

3 $x + \frac{2}{x} = 3$

5 $\frac{x-1}{5} = \frac{6}{x}$

2 $x^2 - \frac{2x+3}{2} = \frac{9}{2}$

4 $x - \frac{5}{x} = \frac{1}{2}$

6 Choose the correct answer from those given :

1 The S.S. of the equation $x(x - 2) = 0$ in \mathbb{R} is

(a) $\{0\}$

(b) $\{0, -2\}$

(c) $\{0, 2\}$

(d) $\{2\}$

- 2 The S.S. of the equation : $3(x-2)(x+5) = 0$ in \mathbb{R} is
- (a) $\{0, 2, -5\}$ (b) $\{3, 2, -5\}$ (c) $\{2, -5\}$ (d) $\{-2, 5\}$
- 3 The S.S. of the equation : $x^2 - 4 = 0$ in \mathbb{R} is
- (a) $\{4\}$ (b) $\{4, -4\}$ (c) $\{2\}$ (d) $\{2, -2\}$
- 4 The S.S. of the equation : $x^2 + 25 = 0$ in \mathbb{R} is
- (a) $\{5\}$ (b) $\{5, -5\}$ (c) $\{-5\}$ (d) \emptyset
- 5 The S.S. of the equation : $(x-4)^2 = 0$ in \mathbb{R} is
- (a) $\{4\}$ (b) $\{0, 4\}$ (c) $\{0, -4\}$ (d) $\{-4\}$
- 6 The S.S. of the equation : $x(x-3) = 5x$ in \mathbb{R} is
- (a) $\{3\}$ (b) $\{0, 3, 5\}$ (c) $\{3, 5\}$ (d) $\{0, 8\}$
- 7 The S.S. of the equation : $\frac{4}{x} = \frac{x}{9}$ in \mathbb{R} is
- (a) $\{4, 9\}$ (b) $\{6, -6\}$ (c) $\{6\}$ (d) $\{36\}$
- 8 The equation whose roots are 3 and 5 is
- (a) $5x^2 + 8x + 3 = 0$ (b) $2x^2 + 8x - 15 = 0$
 (c) $x^2 - 8x + 15 = 0$ (d) $3x^2 + 8x + 5 = 0$

7 Complete the following :

- 1 If -5 is a root of the equation : $x^2 + 2x - 15 = 0$, then the other root is
- 2 If $x = 2$ is a root of the equation : $x^2 - 6x + k = 0$, then $k = \dots\dots\dots$ and the other root is
- 3 If one of the roots of the equation : $2x^2 + 8x = 0$ is a root of the equation : $x^2 + 5x + a = 0$, then $a = \dots\dots\dots$ or
- 4 The S.S. of the equation : $x - \frac{2}{x} = \frac{7}{2}$ is

8 If : $x + \frac{1}{x} = 2$, then find : $x^2 + \frac{1}{x^2}$



For excellent pupils

9 If : $x^2 + \frac{1}{x^2} = 34$, then find : $x + \frac{1}{x}$

10 Find in \mathbb{R} the S.S. of the equation : $\frac{x(x-2)}{6} - \frac{x(x+1)}{4} + \frac{7(x-3)}{3} - 2 = 0$

11 If 2 and 3 are two solutions of the equation : $x^2 - bx + c = 0$, find the value of b and c



From the school book

Exercise 9*Applications on solving quadratic equations in one variable algebraically***1** Choose the correct answer from those given :**1** If the age of Bassim now is X years , then his age 3 years ago was years.

- (a)
- $3X$
- (b)
- $X + 3$
- (c)
- $X - 3$
- (d)
- X^3

2 If the age of Amgad now is X years , then his age after 7 years will be years.

- (a)
- $7X$
- (b)
- $X - 7$
- (c)
- $X + 7$
- (d)
- X^7

3 If the age of Ayman 5 years ago was X years , then his age now is years.

- (a)
- $X - 5$
- (b)
- $X + 5$
- (c)
- $5X$
- (d)
- $\frac{X}{5}$

4 If the age of Sally 2 years ago was X years , then her age after 3 years from now will be years.

- (a)
- $X + 2$
- (b)
- $X + 3$
- (c)
- $X + 5$
- (d)
- $6X$

5 If the age of Magdy now is X years , then the square of his age after 2 years is

- (a)
- $X^2 + 2$
- (b)
- $X^2 + 4$
- (c)
- $(X - 2)^2$
- (d)
- $(X + 2)^2$

6 If the age of Samy now is X years , then twice his age 5 years ago is years.

- (a)
- $X - 5$
- (b)
- $2X - 5$
- (c)
- $X - 10$
- (d)
- $2X - 10$

7 Three times the square of the number X is

- (a)
- $(3X)^2$
- (b)
- $X^2 + 3$
- (c)
- $3X^2$
- (d)
- $\frac{X^2}{3}$

2 A positive integer whose square is more than five times the number by 36

Find the number.

« 9 »

3 An integer , if we add twice its square to the number 7 the result will be 135

Find the number.

« 8 or - 8 »

4 Find the rational number whose four times its square equals 81« $-\frac{9}{2}$ or $\frac{9}{2}$ »**5** A positive integer whose square equals six times the number. Find the number.

« 6 »

6 What is the real number if it is added to its square , the result will be 12 ?

« 3 or - 4 »

7 Find the positive rational number whose square is more than its twice by 48

« 8 »

8 Divide the number 20 into two numbers whose product is 75

« 15 , 5 »

- 9 Two real numbers, the difference between them is 5 and the sum of their squares is 73

Find the two numbers.

« 3, 8 or -3, -8 »

- 10 Find two real numbers whose product is 45 and one of them is 4 more than the other.

« -9, -5 or 5, 9 »

- 11 The sum of the squares of two successive odd numbers is 130

Find the two numbers.

« -9, -7 or 7, 9 »

- 12 The sum of three successive integers is equal to the square of their middle integer.

Find these numbers.

« 2, 3 and 4 or -1, 0 and 1 »

- 13 Two integers, the ratio between them is 7 : 8 and their product is more than nine times the greater number by 80

Find the two numbers.

« 14, 16 »

- 14 A positive integer, if we add twice its square to its additive inverse the result will be 91

Find this number.

« 7 »

- 15 What is the real number which exceeds its multiplicative inverse by $\frac{5}{6}$? « $\frac{3}{2}$ or $\frac{-2}{3}$ »

- 16 A number is formed from two digits, its units digit is twice the tens digit and the product of the two digits exceeds their sum by 9

Find the number.

« 36 »

Life Applications

- 17 The square of age of Said now is more than three times his age four years ago by 192

Find his age now.

« 15 years »

- 18 Hatem is 4 years older than Hanan now, and the sum of squares of their ages now is 26

Find their ages now.

« 5 years, one year »

- 19 If the age of Kamal now is more than the age of his brother Anees by 3 years and 4 years ago the product of their ages was 18

Find the age of each of them now.

« 7 years, 10 year »



Geometric Applications

20 Find the dimensions of a rectangle whose length is 4 cm. more than its width and whose area is 21 cm^2 . « 3 cm. , 7 cm. »

21 A rectangle whose area is 46 cm^2 and its length is 7.5 cm. more than its width. Find its perimeter. « 31 cm. »

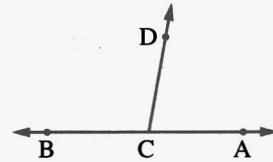
22 A rectangle whose length is more than its width by 5 cm. If its area is less than the area of a square whose side length is three times the width of the rectangle by 57 cm^2 . Find the two dimensions of the rectangle and the side length of the square. « 3 cm. , 8 cm. , 9 cm. »

23 In the opposite figure :

$\overrightarrow{CD} \cap \overrightarrow{AB} = \{C\}$ If $m(\angle BCD) = (x^2)^\circ$,

$m(\angle ACD) = 8x^\circ$

Calculate the value of x



« 10° »

24 In the triangle ABC : $m(\angle A) = (x^2 + 61)^\circ$,
 $m(\angle B) = (110 - 11x)^\circ$ and $m(\angle C) = (90 - 7x)^\circ$
 Find the value of x and the measures of all angles. « 9° , 142° , 11° , 27° »

25 A right-angled triangle , the length of one side of the right angle is more than the length of the other side of the right angle by 2 cm. and its area = 24 cm^2 . Find the lengths of the sides of the right angle. « 8 cm. , 6 cm. »

26 A right-angled triangle whose two right angle sides lengths are $(5x + 3)$ cm. and $(x + 5)$ cm. and its area is 24 cm^2 . Calculate its perimeter. « 24 cm. »

27 A right-angled triangle whose sides lengths are $(2x)$ cm. , $(2x + 1)$ cm. and $(x - 11)$ cm. Find the value of x and calculate the perimeter and the area of the triangle. « 20 , 90 cm. , 180 cm^2 »

28 A rectangle whose length is twice its width , if its length increases by 1 cm. and its width decreases by 1 cm. , then its area decreases by 7 cm^2 . Find the length and the width of the rectangle. « 6 cm. , 12 cm. »



For excellent pupils

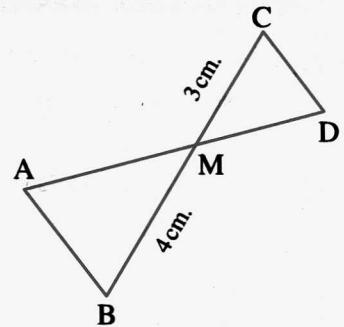
29 In the opposite figure :

$$\Delta MCD \sim \Delta MAB ,$$

$$MB = 4 \text{ cm. } , MC = 3 \text{ cm. } ,$$

$$AD = 7 \text{ cm. } , MA > MC$$

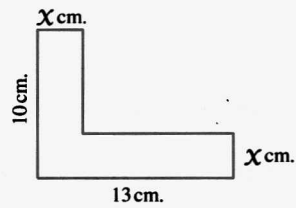
Find the length of \overline{MA}



« 4 cm. »

30 If the area of the opposite figure = 60 cm^2 ,

find the value of X



« 3 cm. »

31 A room whose width is 9 metres and its length is 12 metres.

A decoraster wanted to buy a carpet for the room in condition that he left around the carpet a rectangular tape of a fixed width uncovered. Calculate the width of the tape if the carpet covers half the area of the room.

« 1.5 m. »

Answer the models of the mid-term examination

in Algebra

in El-Moasser notebook





For excellent pupils

29 In the opposite figure :

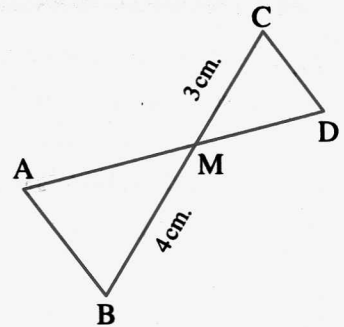
$$\Delta MCD \sim \Delta MAB ,$$

$$MB = 4 \text{ cm. } , MC = 3 \text{ cm. } ,$$

$$AD = 7 \text{ cm. } , MA > MC$$

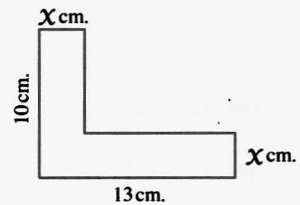
Find the length of \overline{MA}

« 4 cm. »



30 If the area of the opposite figure = 60 cm^2 ,

find the value of X



« 3 cm. »

31 A room whose width is 9 metres and its length is 12 metres.

A decorator wanted to buy a carpet for the room in condition that he left around the carpet a rectangular tape of a fixed width uncovered. Calculate the width of the tape if the carpet covers half the area of the room.

« 1.5 m. »

Answer the models of the mid-term examination

in Algebra

in El-Moasser notebook





From the school book

Exercise**10***On non-negative and negative integer powers in \mathbb{R}* **1** Find the value of each of the following in the simplest form :

1 3^{-2}

2 $\left(\frac{1}{4}\right)^{-1}$

3 $\left(\frac{2}{3}\right)^{-2}$

4 $(\sqrt{5})^4$

5 $(\sqrt{3})^{-2}$

6 $(-\sqrt{3})^{-2}$

7 $(\sqrt[3]{5})^{-3}$

8 $\frac{1}{(\sqrt{5})^{-2}}$

9 $(0.01)^{-2}$

10 $(0.2)^{-2}$

11 $(\sqrt{2})^{-3}$

12 $\left(\frac{\sqrt{3}}{3}\right)^{-5}$

2 Simplify each of the following to the simplest form where $x \neq 0$:

1 $x^3 \times x^{-2} \times x^{-1}$

2 $x^{-4} \div x^{-3}$

3 $(x^2)^{-3} \times (x^{-3})^{-2}$

4 $\frac{x^2 \times x^{-3}}{x^{-4} \times x}$

5 $\frac{(x^2)^{-3} \times (x^{-1})^2}{x^{-3} \times x^{-4}}$

3 Simplify each of the following to the simplest form :

1 $(\sqrt{2})^2 \times (\sqrt{2})^4$ « 8 »

2 $(\sqrt{7})^5 \times (\sqrt{7})^{-2} \times (\sqrt{3})^{-1}$ « 7 »

3 $(\sqrt{2})^4 \times (-\sqrt{2})^2 \times (\sqrt{2})^{-2}$ « 4 »

4 $\sqrt{3} \times (-\sqrt{3})^3 \times (-\sqrt{3})^4$ « -81 »

5 $(\sqrt{5})^{-4} \div (\sqrt{5})^{-6}$ « 5 »

6 $(-\sqrt{5})^9 \div (-\sqrt{5})^5$ « 25 »

7 $\left(\frac{-1}{\sqrt{2}}\right)^6$ « $\frac{1}{8}$ »

8 $((\sqrt{2})^3 \times (-\sqrt{2})^2)^2$ « 32 »

9 $(\sqrt{3})^{-4} \times (-\sqrt{2})^4$ « $\frac{4}{9}$ »

10 $((-5)^3)^2 \times (-\sqrt{5})^{-4}$ « 625 »

4 Simplify each of the following to the simplest form :

1 $\frac{(\sqrt{7})^{-4} \times (\sqrt{7})^{-3}}{(\sqrt{7})^{-9}}$ « 7 »

2 $\frac{(\sqrt{3})^7 \times (\sqrt{3})^8}{(\sqrt{3})^6}$ « $81\sqrt{3}$ »

3 $\frac{(\sqrt{3})^8 \times (-\sqrt{3})^6}{(\sqrt{3})^{12}}$ « 3 »

4 $\frac{(\sqrt{5})^{10} \times (-\sqrt{5})^5}{(\sqrt{5})^{11}}$ « -25 »

5	$\frac{(2\sqrt{7})^{-2} \times (\sqrt{2})^{-4}}{(\sqrt{7})^{-2}}$	$\ll \frac{1}{16} \gg$	6	$\frac{(3\sqrt{2})^4 \times (\sqrt{2})^2}{(2\sqrt{3})^2}$	$\ll 54 \gg$
7	$\frac{(\sqrt{3})^{-4} \times (\sqrt{2})^3 \times (3\sqrt{3})^5}{(3\sqrt{2})^5 \times \sqrt{3}}$	$\ll \frac{1}{2} \gg$	8	$\frac{(\sqrt{3})^5 \times (\sqrt{3})^4}{(\sqrt{3})^3 \times 27}$	$\ll 1 \gg$
9	$\frac{(\sqrt{2})^5 \times (10)^6}{(\sqrt{2})^3 \times 2^3 \times 5^5}$	$\ll 80 \gg$	10	$\frac{(15)^{-2} \times (\sqrt{5})^3 \times 3^3}{9 \times (\sqrt{5})^{-3}}$	$\ll \frac{5}{3} \gg$
11	$\frac{(\sqrt{5})^6 \times (\sqrt{2})^8}{(\sqrt{10})^4}$	$\ll 20 \gg$	12	$\frac{(10)^2 \times (10)^{-7}}{(0.1)^2 \times 0.001}$	$\ll 1 \gg$

5 Simplify each of the following to the simplest form :

1	$\left(\frac{2\sqrt{3}}{\sqrt{2}}\right)^4$	$\ll 36 \gg$	2	$\left(\frac{3\sqrt{2}}{2\sqrt{3}}\right)^4$	$\ll \frac{9}{4} \gg$
3	$\left(\frac{-5\sqrt{2}}{2\sqrt{5}}\right)^4$	$\ll \frac{25}{4} \gg$	4	$\left(\frac{\sqrt{3}}{\sqrt{2}}\right)^2 \times \left(\frac{\sqrt{2}}{\sqrt{3}}\right)^4$	$\ll \frac{2}{3} \gg$

6 Simplify to the simplest form :

1	$\frac{9^x \times 3^{x+2}}{(27)^x}$	$\ll 9 \gg$	2	$\frac{2^{2x} \times 3^{x-1}}{(12)^x}$	$\ll \frac{1}{3} \gg$
3	$\frac{2^x \times 4^{x+1}}{8^x}$	$\ll 4 \gg$	4	$\frac{(36)^n \times 5^{2n}}{(30)^{2n}}$	$\ll 1 \gg$
5	$\frac{2^x \times (49)^{x-1}}{(98)^x}$	$\ll \frac{1}{49} \gg$	6	$\frac{4^{x+2} \times 9^{3+x}}{6^{2x+3}}$	$\ll 54 \gg$
7	$\frac{4^n \times 6^{2n}}{2^{4n} \times 3^{2n}}$	$\ll 1 \gg$	8	$\frac{(81)^x \times 6^{2x}}{(27)^{2x-1} \times 4^x}$	$\ll 27 \gg$
9	$\frac{2^n \times 9^{n+1} \times (\sqrt{2})^2}{6 \times (18)^n}$	$\ll 3 \gg$	10	$\frac{3 \times (18)^{x+1} \times 2^x}{2 \times (36)^x}$	$\ll 27 \gg$
11	$\frac{6^n \times 4^{n+\frac{1}{2}}}{(24)^n}$	$\ll 2 \gg$	12	$\frac{8^{n-1} \times 32^{-n}}{32 \times 4^{-n}}$	$\ll \frac{1}{256} \gg$
13	$\frac{(\sqrt{3})^{n+2} \times (15)^{n+1}}{(\sqrt{3})^n \times 3^n \times 5^{n+2}}$	$\ll \frac{9}{5} \gg$			



14 $\frac{4^{x+1} \times 9^{2-x}}{6^{2x}}$, then find the value of the result, when $x = 1$ « $2^2 \times 3^{4-4x}, 4$ »

15 $\frac{9^{x-1} \times (\sqrt{2})^{6x}}{8^x \times (\sqrt{3})^{2x}}$, then find the value of the result, when $x = 2$ « 1 »

16 $4^{x-1} \times 2^{3x+2} \times \left(\frac{1}{2}\right)^{3x}$, what is the value of the result if $2^x = 5$? « 25 »

7 Prove that :

1 $\frac{(\sqrt{2})^2 \times 2^{1-x} \times 12^{2x-1}}{8^x \times 9^x} = \frac{1}{3}$

2 $\frac{(27)^{x-1} \times 8^x}{(2\sqrt{2})^{2x} \times (3\sqrt{3})^{2x}} = \frac{1}{27}$

8 If $\frac{8^x \times 9^x}{18^x} = 64$, find the value of 4^{-x} « $\frac{1}{64}$ »

9 If $a = \sqrt{3}$ and $b = \sqrt{2}$, find the value of :

1 $a^4 - b^4$ | 2 $\frac{a^4}{b^4}$ « 5, $\frac{9}{4}$ »

10 If $x = 2\sqrt{2}$ and $y = 3$, find the value of : $(x^2 - y^2)^3$ « -1 »

11 If $a = \frac{3}{\sqrt{2}}$ and $b = \frac{\sqrt{2}}{\sqrt{3}}$, find the value of : $2(ab)^2 \times \left(\frac{b}{a}\right)^{-2}$ « $\frac{81}{2}$ »

12 If $x = \frac{\sqrt{3}}{2}$, $y = \frac{1}{\sqrt{3}}$ and $z = \frac{\sqrt{2}}{2}$, find the value of : $x^2 + (xz)^2 \times y^2$ « $\frac{7}{8}$ »

13 If $a = \frac{3\sqrt{2}}{2}$ and $b = \frac{\sqrt{3}}{\sqrt{2}}$, prove that : $\left(\frac{a}{b}\right)^2 - 3\left(\frac{b}{a}\right)^2 = 2$

14 If $x = 2$ and $y = \sqrt{3}$, find the value of the following in the simplest form :

1 $3(x+y)^4(x-y)^4$ | 2 $\left(\frac{x+y}{x-y}\right)^{-2}$ « 3, $97 - 56\sqrt{3}$ »

15 If $a = \frac{1}{\sqrt{2}}$, $b = -1$, then calculate the value of : $7a^6 + (1-b)^{-3}$ « 1 »

16 If $x = 3$, $y = \sqrt{2}$, find in the simplest form the value of each of the following :

1 $x^{-2}y^{-4}$ « $\frac{1}{36}$ » | 2 $(x^{-2} \times y^4)^{-2}$ « $\frac{81}{16}$ »

3 $\left(\frac{x}{y}\right)^{-3}$ « $\frac{2\sqrt{2}}{27}$ »

17 Choose the correct answer from those given :

- 1 $5^2 + 5^2 = \dots\dots\dots$
 (a) 10^2 (b) 10^4 (c) 5^4 (d) 50
- 2 $3^5 \times 2^5 = \dots\dots\dots$
 (a) 5^{10} (b) 6^{10} (c) 6^5 (d) 6^{25}
- 3 $(5a)^{\text{zero}} = \dots\dots\dots, a \neq 0$
 (a) 5 (b) a (c) 5a (d) 1
- 4 $3x^{\text{zero}} = \dots\dots\dots, x \neq 0$
 (a) zero (b) 1 (c) 3 (d) $3x$
- 5 $3^{(2^3)} = \dots\dots\dots$
 (a) 3^6 (b) 3^5 (c) 3^8 (d) 3^{32}
- 6 $(5^2)^3 = \dots\dots\dots$
 (a) 5^6 (b) 5^5 (c) 5^{32} (d) 5
- 7 $4^3 + 4^3 + 4^3 + 4^3 = \dots\dots\dots$
 (a) 4^3 (b) 4^4 (c) 4^{12} (d) 4^{81}
- 8 $2^5 + 2^5 + 2^5 + 2^5 = \dots\dots\dots$
 (a) 2^4 (b) 2^6 (c) 2^7 (d) 2^{20}
- 9 The quarter of the number $4^{20} = \dots\dots\dots$
 (a) 1^{20} (b) 4^{19} (c) 4^{16} (d) 4^5
- 10 4 times the number $2^8 = \dots\dots\dots$
 (a) 2^{32} (b) 8^8 (c) 2^{10} (d) 4^8
- 11 Sixth the number $2^{12} \times 3^{12}$ is $\dots\dots\dots$
 (a) 6^2 (b) 6^4 (c) 6^{11} (d) 6^{23}
- 12 Fifth the number $(\sqrt[3]{5})^6$ is $\dots\dots\dots$
 (a) 5 (b) 5^5 (c) 5^6 (d) 5^{12}
- 13 $(\sqrt{3})^6 \times 3^4 = \dots\dots\dots$
 (a) $(\sqrt{3})^{24}$ (b) 3^{10} (c) 3^7 (d) $(\sqrt{3})^{10}$
- 14 The value of : $2^5 + (\sqrt{2})^{10} = \dots\dots\dots$
 (a) 2^6 (b) 2^{10} (c) $(\sqrt{2})^{15}$ (d) $(\sqrt{2})^{20}$
- 15 The value of : $2^{20} + 2^{21} = \dots\dots\dots$
 (a) 2×2^{40} (b) 2×2^{41} (c) 3×2^{20} (d) 3×2^{21}
- 16 What of the following is closest to $11^2 + 9^2$?
 (a) $22 + 18$ (b) $211 + 29$ (c) $120 + 20$ (d) $120 + 80$
- 17 If $6^x = 11$, then $6^{x+1} = \dots\dots\dots$
 (a) 12 (b) 22 (c) 66 (d) 72



- 18 If $5^X = 4$, then $5^{X-1} = \dots\dots\dots$
 (a) 1.25 (b) 0.8 (c) 0.125 (d) 0.08
- 19 $0.002 \times 0.05 = \dots\dots\dots$
 (a) 10^{-5} (b) 10^{-4} (c) 10^4 (d) 10^5
- 20 If $X = \frac{\sqrt{9}}{\sqrt{3}}$, then $X^{-1} = \dots\dots\dots$
 (a) $\frac{\sqrt{3}}{3}$ (b) $\frac{\sqrt{3}}{\sqrt{2}}$ (c) $\sqrt{3}$ (d) 2
- 21 $X^{m-1} \times \dots\dots\dots = 1, X \neq 0$
 (a) X^{m-1} (b) X^{-m-1} (c) X^{m+1} (d) X^{-m+1}
- 22 $(\sqrt{3} + \sqrt{2})^9 (\sqrt{3} - \sqrt{2})^9 = \dots\dots\dots$
 (a) 1 (b) $\sqrt{5}$ (c) $\sqrt{6}$ (d) 5
- 23 The numerical value of the expression : $\frac{2^{2n+1} \times 5^{2n+1}}{10^{2n}}$ is $\dots\dots\dots$
 (a) $\frac{1}{10}$ (b) 7 (c) 10 (d) 100

18 Complete the following :

1 $(\sqrt{3})^4 \times (\sqrt{3})^2 = 3^{\dots\dots\dots}$

3 $((\sqrt{5})^9)^{11} - ((\sqrt{5})^{11})^9 = \dots\dots\dots$

5 $(a^2 b^{\dots\dots\dots})^4 = a^8 b^{12}$

2 $\frac{((\sqrt{7})^3)^2}{((\sqrt{7})^2)^3} = \dots\dots\dots$

4 $a^{\dots\dots\dots} \times a^6 = a^6$

6 The simplest form of the expression : $2^{\text{zero}} \times 2^{-1} \times \left(\frac{-1}{\sqrt{2}}\right)^2 = \dots\dots\dots$

7 The greater number from the two numbers $(-\sqrt{2})^{25}$ and $(-\sqrt{2})^{24}$ is $\dots\dots\dots$

8 If 4 times a number is 4^2 , then $\frac{3}{4}$ this number is $\dots\dots\dots$

9 If $(X-5)^{\text{zero}} = 1$, then : $X \in \dots\dots\dots$

10 If $a = 7^X$ and $b = 7^{-X}$, then : $a \times b = \dots\dots\dots$

11 If $X = (\sqrt{2} + 3)^5$ and $y = (\sqrt{2} + 3)^{-5}$, then : $XY = \dots\dots\dots$

12 $\left(\frac{5}{6}\right)^{-4} = \left(-\frac{\dots\dots\dots}{\dots\dots\dots}\right)^2$

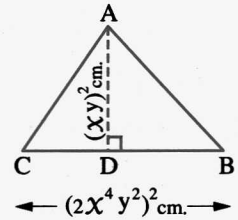
13 If $\left(\frac{1}{2}\right)^X = 5$, then : $(8)^{-X} = \dots\dots\dots$

14 If $2^X = 7$, $2^Y = 5$, then : $2^{X+Y} = \dots\dots\dots$

15 If $5^X = 3$, $5^{-Y} = 7$, then : $5^{X+Y} = \dots\dots\dots$

Geometric Application


- 19** Write an algebraic expression in the simplest form that represents the area of the triangle ABC



Life Application

- 20** A computer with a processor of 5.4 GH can do 5.4×10^9 operations per second, if the number of required operations to convert an MP3 file into an audio file is 2.5×10^{11} operations.

How many seconds does the computer take to convert that file ?



1 For excellent pupils

- 21** Complete the following :

- 1 If $x^3 y^{-3} = 8$, then : $y^2 x^{-2} = \dots\dots\dots$
- 2 If $x = \sqrt{2}$, $y = (\sqrt{2})^{-1}$, then : $x^{101} y^{100} = \dots\dots\dots$
- 3 If $3^{x+2} = 18$, then : $(81)^x = \dots\dots\dots$
- 4 If $2^x = 3$, $2^y = 5$, then : $4^{2x+y} = \dots\dots\dots$

- 22** Choose the correct answer from those given :

- 1 $5 \times 5 \times 5 \times 2 \times 2 \times 2 \times 2 \times 2 = 4 \times \dots\dots\dots$

(a) 5^3 (b) 2^3 (c) 10^3 (d) $5^3 + 2^3$
- 2 $2^{2011} = 2^{2010} + \dots\dots\dots$

(a) 2 (b) 2010 (c) 2^{2010} (d) 2^{2011}
- 3 The expression : $2^{1000} + 256^{125} = \dots\dots\dots$

(a) 258^{125} (b) 258^{1125} (c) 2^{1001} (d) 4^{1000}
- 4 If $x \neq 0$ and $x + \frac{1}{x} = \sqrt{5}$, then $x^2 + \frac{1}{x^2} = \dots\dots\dots$

(a) 1 (b) 3 (c) 5 (d) 7
- 5 The digit in the units place of $3^{12} \times 2^{14}$ is $\dots\dots\dots$

(a) 2 (b) 3 (c) 4 (d) 6



From the school book

Exercise 11

On solving the equations and the exponential equations in \mathbb{R}

1 Find the value of n in each of the following when $n \in \mathbb{Z}$:

- | | | | |
|---|--------|--|------------|
| 1 $5^n = 25$ | « 2 » | 2 $2^{-n} = 32$ | « -5 » |
| 3 $2^{n-1} = 32$ | « 6 » | 4 $3^{n-2} = 81$ | « 6 » |
| 5 $3^{n-2} = 1$ | « 2 » | 6 $2^{n-3} = \frac{1}{4}$ | « 1 » |
| 7 $3^{n-2} = \frac{1}{9}$ | « 0 » | 8 $(\sqrt{3})^{n-1} = 9$ | « 5 » |
| 9 $\left(\frac{2}{5}\right)^{2n-1} = \frac{8}{125}$ | « 2 » | 10 $\left(\frac{3}{5}\right)^{n+2} = \frac{125}{27}$ | « -5 » |
| 11 $\left(\frac{2}{3}\right)^{n-4} = 2\frac{1}{4}$ | « 2 » | 12 $\left(\frac{2}{3}\right)^{n+5} = \left(3\frac{3}{8}\right)^{-2}$ | « 1 » |
| 13 $5^{2n-4} = 7^{2n-4}$ | « 2 » | 14 $3^{n-4} = n^{n-4}$ | « 3 or 4 » |
| 15 $9 \times 3^{n-4} = 1$ | « 2 » | 16 $2 \times 4^{n+3} = \frac{1}{32}$ | « -6 » |
| 17 $8 \times (\sqrt{2})^{n-3} = 1$ | « -3 » | 18 $\frac{1}{27}(\sqrt{3})^{n+2} = 1$ | « 4 » |

2 Find the S.S. of each of the following equations in \mathbb{R} :

- | | | | |
|---|-----------------|--|-----------------|
| 1 $6^{x^2-4} = 7^{x^2-4}$ | « $\{-2, 2\}$ » | 2 $2^{x^2-9} = 1$ | « $\{-3, 3\}$ » |
| 3 $2^{x^2-x} = 4$ | « $\{-1, 2\}$ » | 4 $5^{ x } = 125$ | « $\{-3, 3\}$ » |
| 5 $(32)^{x-3} = 8^{2x+1}$ | « $\{-18\}$ » | 6 $3^{x-3} = (\sqrt{3})^{x+5}$ | « $\{11\}$ » |
| 7 $3^{n-1} \times 2^{1-n} = \frac{27}{8}$ | « $\{4\}$ » | 8 $25 \times 3^{x-1} = 9 \times 5^{x-1}$ | « $\{3\}$ » |

3 Find the value of n in each of the following where $n \in \mathbb{Z}$:

- | | | | |
|---|--------|---|-------------|
| 1 $\frac{2^n \times 9^{n+1}}{(18)^n} = 3^n$ | « 2 » | 2 $\frac{6^{2n-3}}{2^{n-1} \times 3^{n-1}} = 6$ | « 3 » |
| 3 $\frac{(12)^{n-1}}{2^{n-1} \times 3^{n-1}} = 1$ | « 1 » | 4 $\frac{3^n \times 8^n}{(12)^{n+1}} = \frac{1}{3}$ | « 2 » |
| 5 $\frac{4^{2n} \times (\sqrt{3})^{4n}}{9^n \times 4^n} = \frac{1}{16}$ | « -2 » | 6 $\frac{4^{n-1} \times 2^{n+3}}{8^n} = 2n^2$ | « ± 1 » |
| 7 $\frac{(14)^{2n} \times 4^{n+1}}{4 \times 7^n \times 16^n} = 49$ | « 2 » | | |

4 Find the S.S. of each of the following equations in \mathbb{R} :

- | | | | | | |
|----------|-------------------------------|-------------------------|----------|------------------------------|--------------|
| 1 | $(x-4)^5 = 32$ | « {6} » | 2 | $\frac{1}{(x+9)^4} = 0.0001$ | « {1, -19} » |
| 3 | $(x^2 - x)^5 = 32$ | « {-1, 2} » | 4 | $(\sqrt{3})^{x^2 - x} = 1$ | « {0, 1} » |
| 5 | $5x^2 - 5x = 0.0016$ | « {1, 4} » | 6 | $5^{x^2} = 25^{x+4}$ | « {4, -2} » |
| 7 | $9x^{2-1} = \frac{1}{(27)^x}$ | « {-2, $\frac{1}{2}}$ » | | | |

5 If $\frac{6^{2n} \times 2^{2n}}{4^{2n} \times 3^{2n+4}} = 9^{-x}$, then find the value of : x « 2 »

6 If $\frac{(81)^x \times 4^x}{6^{2x} \times 3^{2x}} = 3^{y-1}$, find the value of : y « 1 »

7 If $\frac{(27)^{x-1} \times 8^x}{(2\sqrt{2})^{2x} \times (3\sqrt{3})^{2x}} = 3^x$, find the value of : x « -3 »

8 If $\frac{7^x \times 6^x}{(14)^x} = 3^{2-y}$, find the value of : $x + y$ « 2 »

9 If $\left(\sqrt{\frac{3}{2}}\right)^x = \frac{4}{9}$, calculate the value of : $\left(\frac{3}{2}\right)^{x+1}$ « $\frac{8}{27}$ »


10 If $\frac{49^n \times 25^{2n} \times 3^{4n}}{7^{-n} \times 15^{4n}} = 343$, then calculate the value of : 6^{2n} « 36 »

11 If $3^x = 27$, $4^{x+y} = 1$, calculate the value of each of : x and y « 3, -3 »





12 Choose the correct answer from those given :

- 1** If $3^{x+1} = 5^{x+1}$, then $x = \dots\dots\dots$
- (a) 4 (b) 3 (c) -1 (d) 1
- 2** If $3^{2+x} = 5^{x+2}$, then $7^{x+2} = \dots\dots\dots$
- (a) 7 (b) -7 (c) -14 (d) 1
- 3** If $\left(\frac{2}{3}\right)^9 = \left(\frac{3}{2}\right)^x$, then $x = \dots\dots\dots$
- (a) -9 (b) 9 (c) 32 (d) 23



- 4 If $2^x = \frac{1}{8}$, then $x^2 = \dots\dots\dots$
- (a) $\frac{1}{4}$ (b) 9 (c) -9 (d) $-\frac{1}{9}$
- 5 If $5^{|x-3|} = 25$, then $x = \dots\dots\dots$
- (a) 5 (b) 2 (c) 1 (d) 5 or 1
- 6 If $3^{x-1} = \sqrt[3]{\frac{1}{27}}$, then $x = \dots\dots\dots$
- (a) 1 (b) zero (c) -1 (d) -2
- 7 If $(\sqrt{3})^{x+1} = 3\sqrt{3}$, then $x = \dots\dots\dots$
- (a) 1 (b) 2 (c) zero (d) 3
- 8 If $2^{x-2} = 2^{1-2x}$, then $x = \dots\dots\dots$
- (a) 2 (b) $\frac{1}{2}$ (c) 1 (d) zero
- 9 If $3^x = 9$, then $2^x - 1 = \dots\dots\dots$
- (a) 7 (b) 3 (c) 8 (d) 5
- 10 If $(x+1)^3 = \left(\frac{1}{8}\right)^{-3}$, then $x = \dots\dots\dots$
- (a) -7 (b) 7 (c) zero (d) 9
- 11 If $2^{2x} = 4$, then $2^{5x} = \dots\dots\dots$
- (a) 32 (b) 16 (c) 10 (d) 8
- 12 If $0.05 \times 0.002 = 10^x$, then $x = \dots\dots\dots$
- (a) -4 (b) zero (c) 2 (d) 4
- 13  If $2^{x-1} \times 3^{1-x} = \frac{9}{4}$, then $x = \dots\dots\dots$
- (a) -3 (b) -1 (c) 1 (d) 3
- 14 If $2^x = (2\sqrt{5} + 3\sqrt{2})(2\sqrt{5} - 3\sqrt{2})$, then $x = \dots\dots\dots$
- (a) 1 (b) -1 (c) 2 (d) -2
- 15 If $3^x = 7$, $7^y = 9$, then $xy = \dots\dots\dots$
- (a) 5 (b) 2 (c) 7 (d) 9


13 Complete the following :

- 1 If $5^{x(x-1)} = 1$, then the value of $x = \dots\dots\dots$
- 2 If $3^n \times 3^5 = 1$, then $n = \dots\dots\dots$
- 3 If $2^y \times 5^y = 100$, then $y = \dots\dots\dots$
- 4 If $\left(\frac{3}{5}\right)^{x-7} = 1$, then $x = \dots\dots\dots$
- 5 If $3^x \times 2^{-x} = 1.5$, then $x = \dots\dots\dots$
- 6  If $2^x \times 5^{-x} = 2.5$, then $x = \dots\dots\dots$
- 7 If $4^{x-6} = 64$, then $\sqrt{x} = \dots\dots\dots$
- 8  If $4^{x-10} = \frac{1}{16}$, then $\sqrt[3]{x} = \dots\dots\dots$
- 9 If $(\sqrt{5})^{2x} = \frac{1}{5}$, then $x = \dots\dots\dots$
- 10  If $\frac{2^x \times 3^x}{12^x} = \frac{1}{2}$, then $x = \dots\dots\dots$
- 11  If $3^x + 3^x + 3^x = 1$, then $x = \dots\dots\dots$
- 12 If $\{3, a^{x-2}\} = \{1, 3\}$, then the value of $x = \dots\dots\dots$
- 13 If $(2^x, 125) = (16, y^3)$, then $x = \dots\dots\dots$ and $y = \dots\dots\dots$

Life Application

- 14** If the area of Sameh's chess board is 2^n cm^2 ,
given that the side length of each small square
which the board consists of is 4 cm.,
find the value of n

« 10 »



For excellent pupils

15 Find the value of x in each of the following where $x \in \mathbb{R}$:

- 1 $x^{x+2} = 4^{x+2}$ « ± 4 or -2 »
- 2 $a^{x+3} - 1 = (a-1)(a+1)(a^2+1)(a^4+1)$ « 5 »



From the school book

Exercise 12

On operations on integer powers

1 Complete the following :

- 1 The simplest form of the expression : $2^{-3} \times 2^{-2} \div 4^{-3} = \dots\dots\dots$
- 2 The simplest form of the expression : $2^{-3} \times 3^{-2} \div 6^{-4} = \dots\dots\dots$
- 3 The simplest form of the expression : $(3^{-2})^3 \div 9^{-3} \times (-2)^{-1} = \dots\dots\dots$
- 4 The simplest form of the expression : $4^3 \times 3^{-2} \times (\sqrt[3]{-8})^{-5} = \dots\dots\dots$

2 Find the result of each of the following in its simplest form :

- 1 $(\sqrt{5})^5 \div 5\sqrt{5} + 2\sqrt{3} \times \sqrt{3}$ « 11 »
- 2 $(2\sqrt{3})^3 \times \sqrt{3} - (\sqrt{2})^7 \div 4\sqrt{2}$ « 70 »
- 3 $(\sqrt{3})^{-3} \times 3\sqrt{3} + (\sqrt{3})^{-4} \div (\sqrt{3})^{-10}$ « 28 »
- 4 $(2\sqrt{5})^4 - (\sqrt{5})^{-3} \times (5\sqrt{5})^2 \div 5\sqrt{5}$ « 399 »

3 Find the result of each of the following in its simplest form :

- 1 $\frac{(\sqrt{3})^7 \times (\sqrt{3})^{-5} - (\sqrt{3})^2}{(\sqrt{3})^7 \times (\sqrt{3})^{-5} + (\sqrt{3})^2}$ « zero »
- 2 $\frac{2(\sqrt{3})^5 \div 3\sqrt{3}}{2\sqrt{3} + (\sqrt{3} - 1)^2}$ « $\frac{3}{2}$ » | 3 $\frac{(2\sqrt{2})^3 \times 3\sqrt{2}}{(\sqrt{6} + \sqrt{2})^2 - 2\sqrt{12}}$ « 12 »

4 If $a = \sqrt{2}$, $b = \sqrt{3}$, find the numerical value of :

- 1 $\frac{b^4 - a^4}{b^2 + a^2}$ « 1 » | 2 $\frac{a^3 + b^3}{a + b}$ « $5 - \sqrt{6}$ »

5 Choose the correct answer from those given :

- 1 The expression : $\frac{3^x \times 3^x \times 3^x}{3^x + 3^x + 3^x}$ equals
 (a) 3^{2x-1} (b) 3^{1-2x} (c) 3^{x^3-3x} (d) $3^3x - x^3$
- 2 $(5^{x+2} - 5^{x+1}) \div 5^x = \dots\dots\dots$
 (a) 5 (b) 10 (c) 15 (d) 20

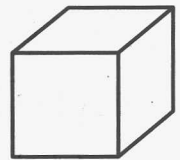
- 3 The value of the expression : $3^5 + (\sqrt{3})^{10} - 2(3)^5 = \dots\dots\dots$
 (a) zero (b) 3^5 (c) $(\sqrt{3})^5$ (d) $2(3)^5$
- 4 The simplest form of the expression : $\sqrt{4 \times \sqrt{16} \div \sqrt[3]{8} - 2^2} = \dots\dots\dots$
 (a) 2 (b) 4 (c) 8 (d) 16
- 5 If $x = \sqrt{3}$, $y = \sqrt{5}$, then : $\frac{x^8 - y^8}{x^4 + y^4} = \dots\dots\dots$
 (a) 4 (b) -4 (c) 16 (d) -16

Geometric Applications

- 6 If the total area of a cube = $3.375 \times 10^2 \text{ cm}^2$

Find :

- The edge length of the cube.
- The volume of the cube.



« 7.5 cm. , 421.875 cm³ »

- 7 If the volume of the sphere = $\frac{4}{3} \pi r^3$

Find the radius length of the sphere whose volume is :

$$3.8808 \times 10^4 \text{ cm}^3$$

$$\left(\pi = \frac{22}{7}\right)$$



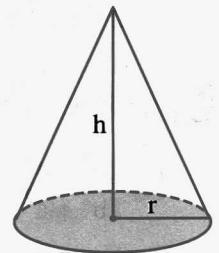
« 21 cm. »

- 8 If the volume of the right circular cone is given

$$\text{by the relation : } v = \frac{1}{3} \pi r^2 h$$

Find the height of the cone h if the volume is : $7.7 \times 10^2 \text{ cm}^3$

and its diameter length is 14 cm. $\left(\pi = \frac{22}{7}\right)$



« 15 cm. »


Life Applications

- 9 Connecting with commercial business :

If $c = m(1+r)^n$ where (c) is the total sum (m) in pounds , (r) is the yearly profit per pound and (n) is the number of years , then calculate (c) to the nearest pound if :

$$m = 2.5 \times 10^4, r = 9.8 \times 10^{-2}, n = 12$$

« 76766 pounds »


10 **Population :**

If the number of population (y) in millions in a country is identified by the relation :

$$y = 11.7 (1.02)^X \text{ where } X \text{ is the number of years starting from year 2005}$$

Calculate the number of population expected for this country to the nearest million :

1 year 2011

2 year 2000

« 13 millions , 11 millions »



For excellent pupils

11 If $x = 2 + \sqrt{3}$, $y = 2 - \sqrt{3}$

, then find the value of the expression $\frac{x^7 y^8 - y}{(x+y)^9}$ in the simplest form.

« zero »

12 If $l = \frac{1}{2} (3^x + 3^{-x})$, $m = \frac{1}{2} (3^x - 3^{-x})$ **Prove that : $l^2 - m^2 = 1$**

GENERAL EXERCISE ON UNIT TWO

from the
school book**First : Completion questions**

Complete the following :

- 1 The number $(\sqrt{2})^{-3}$ in the simplest form is
- 2 The number $\frac{1}{(\sqrt{5})^{-2}}$ in the simplest form is
- 3 $(\frac{2}{3})^{-4} = (-\frac{\dots}{\dots})^2$
- 4 If $3^{x-2} = 1$, then $x = \dots\dots\dots$
- 5 If $3^{x-1} = 27$, then $x = \dots\dots\dots$
- 6 The simplest form of the expression $(\sqrt{2})^0 \times (\sqrt{2}) \times (\sqrt{2})^2 \times (\sqrt{2})^3$ is
- 7 The greater number $(-\sqrt{11})^{24}$ or $(-\sqrt{11})^{25}$ is
- 8 The simplest form of the expression $((\sqrt{7})^2)^3 - ((\sqrt{7})^3)^2 = \dots\dots\dots$
- 9 The value of the expression $\sqrt[3]{\frac{216}{2^3 \times 3^3}} = \dots\dots\dots$
- 10 If five times a number is 5^3 , then $\frac{4}{5}$ of this number is
- 11 The simplest form of the expression : $2^0 + (2)^{-1} - (\frac{-1}{\sqrt{2}})^2 = \dots\dots\dots$
- 12 If $x = (\sqrt{3} + 2)^9$, $y = (\sqrt{3} - 2)^9$, then xy equals
- 13 $x^{-2} + 1 = x^{-2} (\dots\dots\dots + \dots\dots\dots)$ where $x \neq 0$
- 14 If $3^x \times 2^{-x} = 1.5$, then $x = \dots\dots\dots$
- 15 If $4^{x-10} = \frac{1}{16}$, then $\sqrt[3]{x} = \dots\dots\dots$
- 16 The simplest form of the expression : $2^{-3} \times (2)^{-2} \div 4^{-3} = \dots\dots\dots$
- 17 The simplest form of the expression : $(3^{-2})^3 \div 9^{-3} \times (-2)^{-1} = \dots\dots\dots$
- 18 The simplest form of the expression : $(2^3 \times 2^{-2})^7 \div (\sqrt[3]{-8})^0 = \dots\dots\dots$
- 19 If $3^x + 3^x + 3^x = 1$, then $x = \dots\dots\dots$
- 20 If $\frac{2^x \times 3^x}{(12)^x} = \frac{1}{2}$, then $x = \dots\dots\dots$



Second : Choosing from multiple choices questions

Choose the correct answer from those given :

- 1 3^{-2} equals
 (a) -9 (b) $-\frac{1}{9}$ (c) $\frac{1}{9}$ (d) 9
- 2 0.002×0.05 equals
 (a) 10^{-5} (b) 10^{-4} (c) 10^4 (d) 10^5
- 3 What is the nearest value of $11^2 + 9^2$?
 (a) $22 + 18$ (b) $211 + 29$ (c) $120 + 80$ (d) $120 + 20$
- 4 The value of the expression : $2^{20} + 2^{21}$ equals
 (a) 2×2^{40} (b) 2×2^{41} (c) 3×2^{20} (d) 3×2^{21}
- 5 One sixth of the number : $2^{12} \times 3^{12}$ is
 (a) 6^2 (b) 6^4 (c) 6^{11} (d) 6^{23}
- 6 The value of the expression : $2^5 + (\sqrt{2})^{10}$ equals
 (a) 2^6 (b) 2^{10} (c) $(\sqrt{2})^{15}$ (d) $(\sqrt{2})^{20}$
- 7 $4^3 + 4^3 + 4^3 + 4^3$ equals
 (a) 4^3 (b) 4^4 (c) 4^{12} (d) 4^{81}
- 8 $(\frac{\sqrt{5}}{3})^{-2}$ equals
 (a) $-\frac{9}{5}$ (b) $-\frac{5}{9}$ (c) $\frac{5}{9}$ (d) $\frac{9}{5}$
- 9 If $X = \frac{\sqrt{9}}{\sqrt{3}}$, then X^{-1} equals :
 (a) $\frac{\sqrt{3}}{3}$ (b) $\frac{\sqrt{3}}{\sqrt{2}}$ (c) $\sqrt{3}$ (d) 2
- 10 If $6^x = 7$, then 6^{x+1} equals
 (a) 8 (b) 13 (c) 36 (d) 42
- 11 If $3^x = 5$, then $(27)^x$ equals
 (a) 9 (b) 25 (c) 125 (d) 729
- 12 If $5^x = 4$, then 5^{x-1} equals
 (a) 1.25 (b) 0.8 (c) 0.125 (d) 0.08
- 13 If $9^{8-2x} = 1$, then x equals
 (a) zero (b) $\frac{1}{4}$ (c) 4 (d) 6

- 14 If $(x - 5)^0 = 1$, then $x \in$
- (a) $\mathbb{R} - \{5\}$ (b) $\mathbb{R} - \{-5\}$ (c) $\{5\}$ (d) \mathbb{R}
- 15 If $5^{x-3} = 1$, then $(2x)^2$ equals
- (a) 36 (b) 9 (c) 4 (d) 3
- 16 If $3^x = 5$, $\frac{1}{3^y} = 7$, then $3^{x+y} =$
- (a) $\frac{5}{7}$ (b) $\frac{7}{5}$ (c) 2 (d) 12
- 17 If $2^{x-1} \times 3^{1-x} = \frac{9}{4}$, then $x =$
- (a) -3 (b) -1 (c) 1 (d) $3^x - x^3$
- 18 The numerical value of the expression : $\frac{2^{2n+1} \times 5^{2n+1}}{10^{2n}}$ equals
- (a) $\frac{1}{10}$ (b) 7 (c) 10 (d) 100
- 19 The expression : $(5^{x+2} - 5^{x+1}) \div 5^x =$
- (a) 5 (b) 10 (c) 15 (d) 20
- 20 The expression : $\frac{3^x \times 3^x \times 3^x}{3^x + 3^x + 3^x}$ equals
- (a) 3^{2x-1} (b) 3^{1-2x} (c) 3^{x^3-3x} (d) 3^3

Third : Essay questions

1 Find the value of the following in the simplest form :

1 3^{-1}

2 $(\frac{1}{4})^{-1}$

3 $(\frac{3}{2})^{-3}$

4 $(\sqrt{5})^4$

5 $(-\sqrt{3})^{-2}$

6 $(\sqrt[3]{7})^{-3}$

7 $(\frac{-1}{\sqrt{2}})^6$

8 $(0.01)^{-2}$

9 $(-\frac{\sqrt{2}}{2})^{-4}$

2 Find the value of each of the following in the simplest form :

1 $(\sqrt{3})^{-2}$

2 $(-\sqrt[3]{4})^{-3}$

3 $(\frac{1}{\sqrt{2}})^{-3}$

4 $(\frac{\sqrt{3}}{3})^{-5}$

5 $(\sqrt{3})^{-4} \times (-\sqrt{2})^4$

6 $(\frac{1}{\sqrt{3}})^5 \div (\frac{1}{\sqrt{3}})^7$

3 Simplify :

1 $(\sqrt{2})^2 \times (\sqrt{2})^4$

2 $(-\sqrt{5})^9 \div (-\sqrt{5})^5$

3 $(\sqrt{2})^4 \times (\sqrt{3})^4$

4 $((\sqrt{3})^2 \times (-\sqrt{2})^3)^2$

5 $(\frac{2\sqrt{2}}{3\sqrt{3}})^4$

6 $\frac{(\sqrt{3})^7 \times (\sqrt{3})^8}{(\sqrt{3})^6}$

General exercise



4 Simplify each of the following in the simplest form :

1 $\frac{(\sqrt{3})^{-5} \times (\sqrt{3})^{-4}}{(\sqrt{3})^{-10}}$

2 $\frac{(10)^2 \times (10)^{-7}}{(0.1)^2 \times 0.001}$

3 $\frac{(\sqrt{2})^5 \times (3)^{-2}}{3 \times (\sqrt{2})^9}$

4 $\frac{(\sqrt{3})^{-3} \times (\sqrt{2})^{-4}}{(\sqrt{2} \times \sqrt{3})^{-5}}$

5 If: $x = 3$, $y = \sqrt{2}$, find in the simplest form the value of each of the following :

1 $x^{-2} y^{-4}$

2 $(x^{-2} \times y^4)^{-2}$

3 $\left(\frac{x}{y}\right)^{-3}$

6 If: $x = \frac{\sqrt{3}}{2}$, $y = \frac{1}{\sqrt{3}}$, $z = \frac{\sqrt{2}}{2}$, find the value of: $x^2 + (xz)^2 \times y^2$

7 If: $x = 2$, $y = \sqrt{3}$ find in the simplest form the value of :

1 $(x + y)^4 (x - y)^4$

2 $\left(\frac{x + y}{x - y}\right)^{-2}$

8 If: $a = \frac{1}{\sqrt{2}}$, $b = -1$, find the value of: $7a^6 + (1 - b)^{-3}$

9 If: $a = \sqrt{3}$, $b = \sqrt{2}$, find the value of each of the following :

1 $a^4 - b^4$

2 $\frac{a^4}{b^4}$

10 If: $x = 2\sqrt{2}$, $y = 3$, find the value of: $(x^2 - y^2)^3$

11 If: $\left(\sqrt{\frac{3}{2}}\right)^x = \frac{4}{9}$, find the value of: $\left(\frac{2}{3}\right)^{x+1}$

12 If: $x = \frac{\sqrt{3}}{2\sqrt{5}}$, $y = \frac{1}{\sqrt{2}}$, Prove that: $5x^2 + y^4 = 1$

13 If: $x = 2\sqrt{3}$, $y = \frac{4}{\sqrt{2}}$, prove that: $\sqrt{x^2 + y^4 + 5} = 9$

14 Find the value of x in each of the following :

1 $2^x = 32$

2 $2^{x-3} = 1$

3 $3^{x-2} = 81$

4 $(\sqrt{3})^{x-1} = 9$

5 $3^{x-2} = \frac{1}{9}$

6 $\left(\frac{2}{5}\right)^{2x-1} = \frac{8}{125}$

15 Prove that : $\frac{(27)^{x-1} \times 8^x}{(2\sqrt{2})^{2x} \times (3\sqrt{3})^{2x}} = \frac{1}{27}$

16 If : $\frac{8^x \times 9^x}{(18)^x} = 64$, find the value of : $(4)^{-x}$

17 Simplify : $\frac{4^{x+1} \times 9^{2-x}}{6^{2x}}$, then calculate its value at : $x = 1$

18 If the total area of a cube equals : 3.375×10^2 unit area find :

1 The length of the cube edge.

2 The volume of the cube.



19 If : $V = \frac{4}{3} \pi r^3$ is a rule between volume of a sphere V of radius r , find radius of a sphere of volume = $3.8808 \times 10^4 \text{ cm}^3$ (consider $\pi = \frac{22}{7}$)



Worksheet 5 till lesson (5) unit (1)

Answer the following questions :

1 Choose the correct answer from the given ones :

(1) $(X^3 + 64) \div (X + 4) = \dots\dots\dots$

(a) $X^2 + 16$

(b) $X^2 - 4X + 16$

(c) $X^2 + 4X + 16$

(d) $X^2 - 4X - 16$

(2) If $X^3 + 8 = (X + 2)(X^2 + a + 4)$, then $a = \dots\dots\dots$

(a) X

(b) $-X$

(c) $-4X$

(d) $-2X$

(3) If $X^2 + e - 16 = (X + 4)(X - 4)$, then $e = \dots\dots\dots$

(a) $8X$

(b) zero

(c) $-8X$

(d) $-4X$

(4) If $a - b = 5$, then $a^2 - 2ab + b^2 = \dots\dots\dots$

(a) 25

(b) 20

(c) 15

(d) 10

(5) $3X^2y + 6Xy = \dots\dots\dots(X + 2)$

(a) $3X$

(b) $3Xy^2$

(c) X^2y

(d) $3Xy$

(6) $(64)^2 - (36)^2 = \dots\dots\dots$

(a) 100

(b) 28

(c) 2800

(d) 280

2 Complete the following :

(1) $2X^2 - 7X - 15 = (2X + 3)(\dots\dots\dots)$

(2) If $kX^2 + 4X + 1$ is a perfect square, then $k = \dots\dots\dots$

(3) If $X + y = 2$, $X^2 - Xy + y^2 = 8$, then $X^3 + y^3 = \dots\dots\dots$

(4) If $(a + b)^2 = 16$, $a^2 + b^2 = 8$, then $2ab = \dots\dots\dots$

(5) If $(X + 2)$ is a factor of the expression : $X^2 - X - 6$, then the other factor is $\dots\dots\dots$

(6) If $X^2 + aX + 5$ can be factorized, then $a = \dots\dots\dots$

3 Factorize each of the following perfectly :

(1) $(X + 3)^2 - 25$

(2) $X^3 - 27$

(3) $2a^2 - 7ab + 6b^2$

4 [a] Use factorization to get the value of : $(99)^2 + 2 \times (99) + 1$

[b] Factorize the following expression perfectly : $(X^3 - 9)(X^3 + 9) + 17$



Worksheet 6 till lesson (6) unit (1)

Answer the following questions :

1 Choose the correct answer from the given ones :

(1) $(X - 2y)(X^2 + 2Xy + 4y^2) = \dots\dots\dots$

(a) $X^3 + 8y^3$ (b) $X^3 + 2y^3$ (c) $X^3 - 8y^3$ (d) $X^3 - 2y^3$

(2) If $a^2 + b^2 = 11$, $ab = 5$, then $a - b = \dots\dots\dots$

(a) 6 (b) ± 1 (c) 1 (d) -1

(3) If $a + 2b = 4$, $X + y = 8$, then the numerical value of the expression

$aX + ay + 2bX + 2by = \dots\dots\dots$

(a) 2 (b) 12 (c) 4 (d) 32

(4) The expression : $X^2 - 6X + k$ is a perfect square when $k = \dots\dots\dots$

(a) 36 (b) 9 (c) 3 (d) 12

(5) If $X + 3$ is a factor of the expression : $2X^2 + 11X + 15$, then the other factor is $\dots\dots\dots$

(a) $X + 5$ (b) $2X + 5$ (c) $2X - 5$ (d) $X + 15$

(6) If $X^2 - kX + 5 = (X - 1)(X - 5)$, then $k = \dots\dots\dots$

(a) 6 (b) 5 (c) 4 (d) -6

2 Complete the following :

(1) $X^2 - y^2 - X - y = (X + y)(\dots\dots\dots)$

(2) If $X^2 + a = (X - 4)(X + 4)$, then $a = \dots\dots\dots$

(3) $27X^3 + 8y^3 = (\dots\dots\dots)(\dots\dots\dots)$

(4) If $X - y = 2$, $X + y = 8$, then $X^2 - y^2 = \dots\dots\dots$

(5) $3X^2 - 10X + 7 = (\dots\dots\dots)(\dots\dots\dots)$

(6) $X^2 + aX - bX - ab = \dots\dots\dots$

3 Factorize each of the following perfectly :

(1) $\frac{1}{2}X^3 - 4$

(2) $4X^2 + 4Xy + y^2 - 9$

(3) $X^3 - X - y + y^3$

4 [a] Use factorization to get the value of : $(8.175)^2 - (1.825)^2$

[b] Factorize the expression : $X^6 - y^6$ perfectly.



Worksheet 7 till lesson (7) unit (1)

Answer the following questions :

1 Choose the correct answer from the given ones :

- (1) If $(x + y)^2 = 25$, $xy = 5$, then $x^2 + y^2 = \dots\dots\dots$
 (a) 10 (b) 15 (c) 20 (d) 25
- (2) The expression : $a x^2 - 40 x + 25$ is a perfect square when $a = \dots\dots\dots$
 (a) 2 (b) 9 (c) 4 (d) 16
- (3) If $x + y = 3$, $x^2 - xy + y^2 = 5$, then $x^3 + y^3 = \dots\dots\dots$
 (a) 15 (b) 25 (c) 8 (d) 27
- (4) If $2 x^2 - c x - 2 = (2 x + 1)(x - 2)$, then $c = \dots\dots\dots$
 (a) 1 (b) 2 (c) 3 (d) 4
- (5) The side length of the square whose area is $(x^2 + 6 x + 9)$ square units = $\dots\dots\dots$ length units. (where $x > -3$)
 (a) $x + 3$ (b) $x + 9$ (c) $x^2 + 3$ (d) $x + 6$
- (6) If $a - b = m$, $a + b = k$, then $a^2 - b^2 = \dots\dots\dots$
 (a) $m + k$ (b) $m k$ (c) $m - k$ (d) $\frac{m}{k}$

2 Complete the following :

- (1) If $x^3 - k^3 = (x - 5)(x^2 + 5 x + 25)$, then $k = \dots\dots\dots$
- (2) $a x + a y + 2 x + 2 y = (x + y)(\dots\dots\dots)$
- (3) The expression : $x^2 + 2 x + c$ can be factorized if $c = \dots\dots\dots$, $c \in \mathbb{Z}_+$
- (4) If $(x + 1)$ is a factor of the expression $(5 x^2 - 2 x - 7)$, then the other factor is $\dots\dots\dots$
- (5) If $(25)^2 - (15)^2 = 10 x$, then $x = \dots\dots\dots$
- (6) $x^4 + 4 = (x^2 + 2)^2 - \dots\dots\dots$

3 Factorize each of the following perfectly :

- | | |
|--|--|
| <p>(1) $3 x^3 - 75 x$</p> <p>(3) $6 x^2 - 23 x - 18$</p> | <p>(2) $x^4 - x$</p> <p>(4) $x y - 5 x - 6 y + 30$</p> |
|--|--|

4 Factorize each of the following by completing the square :

- (1) $4 x^4 + 25 y^4 - 29 x^2 y^2$ (2) $x^2(x^2 - 5 y^2) + 4 y^4$



Worksheet 9 till lesson (9) unit (1)

Answer the following questions :

1 Choose the correct answer from the given ones :

- (1) The solution set of the equation : $X^2 - 5X = 0$ in \mathbb{R} is
- (a) $\{5\}$ (b) $\{0\}$ (c) $\{0, 5\}$ (d) \emptyset
- (2) $X^3 - 8 = (X - 2)(\dots\dots\dots)$
- (a) $X^2 - 2X + 4$ (b) $X^2 - 4X + 4$ (c) $X^2 + 2X + 4$ (d) $X^2 + 4X + 4$
- (3) If the expression : $X^2 + 7X + k$ can be factorized , then $k = \dots\dots\dots$
- (a) 6 (b) 30 (c) - 12 (d) - 6
- (4) If $X^2 + kXy - 25y^2 = (X + 5y)(X - 5y)$, then $k = \dots\dots\dots$
- (a) zero (b) 10 (c) - 10 (d) - 25
- (5) If $y - X = 5$, $X^2 - y^2 = 10$, then $X + y = \dots\dots\dots$
- (a) 2 (b) - 2 (c) 5 (d) - 5
- (6) If the age of Ayman 5 years ago was X years , then the square of his age now = years.
- (a) $X^2 + 5$ (b) $X^2 + 25$ (c) $(X + 5)^2$ (d) $(X - 5)^2$

2 Complete the following :

- (1) If $(X + 2)$ is a factor of the expression : $2X^2 + 3X - 2$, then the other factor is
- (2) If $(X + y) = 3$, $(a + b) = 2$, then the value of the expression :
 $aX + ay + bX + by = \dots\dots\dots$
- (3) Twice the square of the number X is
- (4) If the expression : $a^2X^2 + 10X + 25$ is a perfect square , then $a = \dots\dots\dots$
- (5) If $X^3 + y^3 = 28$, $X + y = 2$, then $2X^2 - 2Xy + 2y^2 = \dots\dots\dots$
- (6) $X^2 - 5X - 6 = (X - \dots\dots\dots)(X + \dots\dots\dots)$

3 [a] Factorize each of the following expressions :

(1) $4X^2 - 4X - 15$

(2) $X^4 - 19X^2y^2 + 25y^4$

[b] Find in \mathbb{R} the solution set of the equation : $X(3X - 7) = 6$

4 [a] Find the real number whose double exceeds its multiplicative inverse by one.

[b] A right-angled triangle, the lengths of the two sides of the right angle are $4X$ cm. and $X + 1$ cm. If the area of the triangle = 84 cm^2 , calculate the length of its hypotenuse.



Worksheet 10 till lesson (1) unit (2)

Answer the following questions :

1 Choose the correct answer from the given ones :

- (1) $(\sqrt{3} + \sqrt{2})^9 (\sqrt{3} - \sqrt{2})^9 = \dots\dots\dots$
 (a) 1 (b) $\sqrt{5}$ (c) $\sqrt{6}$ (d) 5
- (2) If $x - y = 3$, $x^2 + xy + y^2 = 6$, then $x^3 - y^3 = \dots\dots\dots$
 (a) 18 (b) 2 (c) 3 (d) 9
- (3) $6x^2 - 11x + 3 = \dots\dots\dots$
 (a) $(3x + 1)(2x + 3)$ (b) $(6x - 1)(x - 3)$
 (c) $(3x - 1)(2x - 3)$ (d) $(x - 6)(3x - 1)$
- (4) If $x - y = 2$, $x + y = 12$, then $x^2 - y^2 = \dots\dots\dots$
 (a) 10 (b) 6 (c) 24 (d) 14
- (5) $(999)^2 - 1 = \dots\dots\dots$
 (a) 998 (b) $(1000)^2$ (c) $(998)^2$ (d) 998000
- (6) If $2^x = 5$, then $2^{x+2} = \dots\dots\dots$
 (a) 10 (b) 15 (c) 20 (d) 2

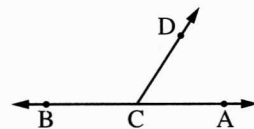
2 Complete the following :

- (1) The S.S. of the equation : $3x^2 - 6x = 0$ in \mathbb{R} is $\dots\dots\dots$
- (2) If $a^2 + ab + a + b = 10$, $a + b = 5$, then $a = \dots\dots\dots$
- (3) If $kx^2 + 4x + 1$ is a perfect square, then $k = \dots\dots\dots$
- (4) If $(x - 5)$ is a factor of the expression : $x^2 - 4x - 5$, then the other factor is $\dots\dots\dots$
- (5) If : $(x - 5)^0 = 1$, then $x \in \dots\dots\dots$

(6) In the opposite figure :

$$\overrightarrow{AB} \cap \overrightarrow{CD} = \{C\}, \text{ if } m(\angle ACD) = 8x$$

$$\text{, } m(\angle BCD) = x^2, \text{ then } x = \dots\dots\dots^\circ$$



3 [a] Prove that : $\frac{(27)^{x-1} \times 8^x}{(2\sqrt{2})^{2x} \times (3\sqrt{3})^{2x}} = \frac{1}{27}$

[b] Factorize each of the following perfectly :

(1) $3ax + 2ay + 2by + 3bx$ (2) $8x^3 - 125$

4 [a] The length of a rectangle exceeds its width by 5 m. , if its area = 84 m^2 , find the two dimensions of the rectangle and its perimeter.

[b] If $x = 3$, $y = \sqrt{2}$, then find in the simplest form : $x^{-2}y^{-4}$



Worksheet 12 till lesson (3) unit (2)

Answer the following questions :

1 Choose the correct answer from those given :

- (1) If $16x^2 + kx + 9$ is a perfect square, then $k = \dots\dots\dots$
 (a) ± 12 (b) ± 24 (c) ± 6 (d) ± 18
- (2) If $x + y = 3$, $x^2 - xy + y^2 = 5$, then $x^3 + y^3 = \dots\dots\dots$
 (a) 15 (b) 25 (c) 8 (d) 7
- (3) If $6^x = 7$, then $6^{x+1} = \dots\dots\dots$
 (a) 8 (b) 13 (c) 36 (d) 42
- (4) If $3^x = 5$, $\frac{1}{3^y} = 7$, then $3^{x+y} = \dots\dots\dots$
 (a) $\frac{5}{7}$ (b) $\frac{7}{5}$ (c) 2 (d) 12
- (5) $\frac{3^x \times 3^x \times 3^x}{3^x + 3^x + 3^x} = \dots\dots\dots$
 (a) 3^{2x-1} (b) 3^{1-2x} (c) 3^{x^3-3x} (d) 3^3
- (6) The S.S. of the equation : $(x+2)^2 - 25 = 0$ in \mathbb{R} is $\dots\dots\dots$
 (a) $\{3, -3\}$ (b) $\{-3, 7\}$ (c) $\{3, 7\}$ (d) $\{-7, 3\}$

2 Complete the following :

- (1) The simplest form of the expression : $2^{-3} \times 2^{-2} \div 4^{-3} = \dots\dots\dots$
- (2) $x^2 - y^2 = (x - y)(\dots\dots\dots)$
- (3) The S.S. of the equation : $x = \frac{1}{x}$ in \mathbb{R} is $\dots\dots\dots$
- (4) If $(2x - 1)$ is a factor of the expression : $2x^2 + 5x - 3$, then the other factor is $\dots\dots\dots$
- (5) $a^2 - b^2 + a + b = (a + b)(\dots\dots\dots)$
- (6) The side length of the square whose area is :
 $(x^2 + 10x + 25) \text{ cm.}^2 = \dots\dots\dots \text{ cm.}$ (where $x > -5$)

3 Factorize each of the following perfectly :

- | | | |
|--|--|---|
| <p>(1) $2x^2 - 50y^2$</p> <p>(3) $8x^3 - 343x^6$</p> | | <p>(2) $5x^2 - 8xy - 21y^2$</p> <p>(4) $x^4 + 4l^4$</p> |
|--|--|---|

- 4** [a] If : $x = \frac{\sqrt{3}}{2}$, $y = \frac{1}{\sqrt{3}}$ and $z = \frac{\sqrt{2}}{2}$, find the value of : $x^2 + (xz)^2 \times y^2$

- [b] If $\frac{8^x \times 9^x}{(18)^x} = 64$, find the value of : 4^{-x}

4 $(3a + (2a + b))(3a - (2a + b))$
 $= (5a + b)(a - b)$

5 $(ab + (ab - 1))(ab - (ab - 1)) = (2ab - 1)$

6 $((X + 1) + (X - 1))((X + 1) - (X - 1))$
 $= 2X \times 2 = 4X$

7 $(3(m - 1) + 5(m + 1))(3(m - 1) - 5(m + 1))$
 $= (3m - 3 + 5n + 5)(3m - 3 - 5m - 5)$
 $= (8m + 2)(-2m - 8) = -4(4m + 1)(m + 4)$

8 $((X + y + 5) + (X - y - 5))((X + y + 5) - (X - y - 5))$
 $= 2X(2y + 10) = 4X(y + 5)$

9 $a^2 - 4b^2 - 5b^2 = a^2 - 9b^2$
 $= (a - 3b)(a + 3b)$

5

1 $(77 + 23)(77 - 23) = 100 \times 54 = 5400$

2 $(75 + 25)(75 - 25) = 100 \times 50 = 5000$

3 $(78 + 77)(78 - 77) = 155 \times 1 = 155$

4 $(125 + 25)(125 - 25) = 150 \times 100 = 15000$

5 $(11.6 + 1.6)(11.6 - 1.6) = 13.2 \times 10 = 132$

6 $(8.27 + 1.73)(8.27 - 1.73) = 10 \times 6.54 = 65.4$

7 $(95 + 5)(95 - 5) = 100 \times 90 = 9000$

8 $(999 + 1)(999 - 1) = 1000 \times 998 = 998000$

9 $2[(25.87)^2 - (24.13)^2]$
 $= 2(25.87 + 24.13)(25.87 - 24.13)$
 $= 2 \times 50 \times 1.74 = 174$

6

1 $(30 + 1)(30 - 1) = 900 - 1 = 899$

2 $(100 + 3)(100 - 3) = (100)^2 - (3)^2 = 10000 - 9 = 9991$

7

The expression $= ((X + y) + (X - y))((X + y) - (X - y))$
 $= 2X \times 2y = 4Xy = 4 \times 8 = 32$

8

1 $3y \cdot 2X \cdot 9y^2$ 2 $5X \cdot 5X \cdot 9m^2$

3 $16.8X \cdot 8X$ 4 6 5 2

6 3 7 1 8 9

9 28

9

1 c 2 a 3 c 4 c 5 d

6 c 7 a 8 a 9 b

10

Let the length of the other side = X

$\therefore X^2 = (41)^2 - (40)^2 = (41 - 40)(41 + 40) = 1 \times 81 = 81$

$\therefore X = \sqrt{81} = 9 \text{ cm.}$

\therefore the length of the other side = 9 cm.

11

1 $b(a + 2b)((a + 2b)^2 - b^2)$
 $= b(a + 2b)((a + 2b) + b)((a + 2b) - b)$
 $= b(a + 2b)(a + 3b)(a + b)$

2 $(a - b)^2 - c^2 = ((a - b) + c)((a - b) - c)$
 $= (a - b + c)(a - b - c)$

3 $(2a + 3b)^3 - 4a^2(2a + 3b)$
 $= (2a + 3b)((2a + 3b)^2 - 4a^2)$
 $= (2a + 3b)((2a + 3b) - 2a)((2a + 3b) + 2a)$
 $= 3b(2a + 3b)(4a + 3b)$

12

$X = \frac{(225)^2 - (25)^2}{25 \times 20} = \frac{(225 + 25)(225 - 25)}{25 \times 20}$
 $= \frac{250 \times 200}{25 \times 20} = 100$

13

$(X - y)^2 = 4$ taking the square root of the two sides

$X - y = 2$ where $X > y$

$\therefore (X^2 - y^2) = (X + y)(X - y) = 8 \times 2 = 16$

Answers of Exercise 5

1

1 $(X + 2)(X^2 - 2X + 4)$

2 $(X - 1)(X^2 + X + 1)$

3 $(4X + 3)(16X^2 - 12X + 9)$

4 $(2X - 5)(4X^2 + 10X + 25)$

5 $(5 + a)(25 - 5a + a^2)$

6 $(7 - 3m)(49 + 21m + 9m^2)$

7 $(m + 4n)(m^2 - 4mn + 16n^2)$

8 $(8X - y)(64X^2 + 8Xy + y^2)$

9 $(Xy + 3)(X^2y^2 - 3Xy + 9)$

10 $(3Xy - 4)(9X^2y^2 + 12Xy + 16)$



- 11 $(\frac{1}{2}a - 2b)(\frac{1}{4}a^2 + ab + 4b^2)$
 12 $(l - \frac{1}{5})(l^2 + \frac{1}{5}l + \frac{1}{25})$
 13 $(2a + 0.1)(4a^2 - 0.2a + 0.01)$
 14 $(0.3m - n)(0.09m^2 + 0.3mn + n^2)$
 15 $(1 + 5b^2)(1 - 5b^2 + 25b^4)$
 16 $(2x - 7y^2)(4x^2 + 14xy^2 + 49y^4)$
 17 $(x^2 + y^2)(x^4 - x^2y^2 + y^4)$
 18 $(x^3 - 8)(x^3 + 8)$
 $= (x - 2)(x^2 + 2x + 4)(x + 2)(x^2 - 2x + 4)$

2

- 1 $2(x^3 + 8) = 2(x + 2)(x^2 - 2x + 4)$
 2 $3(x^3 - 27) = 3(x - 3)(x^2 + 3x + 9)$
 3 $l(l^3 + 64) = l(l + 4)(l^2 - 4l + 16)$
 4 $m(l^3 - 27m^3) = m(l - 3m)(l^2 + 3lm + 9m^2)$
 5 $3x(x^3 + 1) = 3x(x + 1)(x^2 - x + 1)$
 6 $2x^2(x^3 - 27) = 2x^2(x - 3)(x^2 + 3x + 9)$
 7 $2(8x^3 + 125y^3)$
 $= 2(2x + 5y)(4x^2 - 10xy + 25y^2)$
 8 $2b(8a^3 + 343b^3)$
 $= 2b(2a + 7b)(4a^2 - 14ab + 49b^2)$
 9 $2xy^2(27x^3 - 8y^3)$
 $= 2xy^2(3x - 2y)(9x^2 + 6xy + 4y^2)$
 10 $4x^5y^2(125x^3 - 64y^3)$
 $= 4x^5y^2(5x - 4y)(25x^2 + 20xy + 16y^2)$
 11 $\frac{1}{2}(x^3 + 8) = \frac{1}{2}(x + 2)(x^2 - 2x + 4)$
 12 $\frac{1}{3}(x^3 - 27) = \frac{1}{3}(x - 3)(x^2 + 3x + 9)$

3

- | | | | |
|-----|-----|-----|-----|
| 1 a | 2 a | 3 b | 4 c |
| 5 d | 6 b | 7 b | 8 c |

4

- 1 $x^2 + x + 1$
 2 $(2a + 5)(4a^2 - 10a + 25)$
 3 $(x^4 + y^5)(x^8 - x^4y^5 + y^{10})$
 4 $8a^3 - 27 = (2a - 3)(4a^2 + 6a + 9)$
 5 $x^2 + 3x + 9$
 6 $2a + 1$

5

$$x^2 - y^2 = (x - y)(x + y)$$

$$20 = 2(x + y) \quad \therefore x + y = 10$$

$$\therefore x^3 + y^3 = (x + y)(x^2 - xy + y^2) = 10 \times 28 = 280$$

6

- 1 $((a + b) - b)((a + b)^2 + b(a + b) + b^2)$
 $= a(a^2 + 2ab + b^2 + ba + b^2 + b^2)$
 $= a(a^2 + 3ab + 3b^2)$
 2 $((x + 5) - 5)((x + 5)^2 + 5(x + 5) + 25)$
 $= x(x^2 + 10x + 25 + 5x + 25 + 25)$
 $= x(x^2 + 15x + 75)$
 3 $((m - 2n) - 2n) \times ((m - 2n)^2 + 2n(m - 2n) + 4n^2)$
 $= (m - 4n)(m^2 - 4mn + 4n^2 + 2mn - 4n^2 + 4n^2)$
 $= (m - 4n)(m^2 - 2mn + 4n^2)$
 4 $(2(m + n) - n)(4(m + n)^2 + 2n(m + n) + n^2)$
 $= (2m + 2n - n)(4m^2 + 8mn + 4n^2 + 2mn + 2n^2 + n^2)$
 $= (2m + n)(4m^2 + 10mn + 7n^2)$
 5 $2(1 - (x - 1)^3) = 2(1 - (x - 1))(1 + (x - 1) + (x - 1)^2)$
 $= 2(2 - x)(1 + x - 1 + x^2 - 2x + 1)$
 $= 2(2 - x)(x^2 - x + 1)$
 6 $((x + 5) + (x - 5))$
 $((x + 5)^2 - (x + 5)(x - 5) + (x - 5)^2)$
 $= 2x(x^2 + 10x + 25 - x^2 + 25 - x^2 - 10x + 25)$
 $= 2x(x^2 + 75)$
 7 $((x + y) - (x - y))$
 $((x + y)^2 + (x + y)(x - y) + (x - y)^2)$
 $= 2y(x^2 + 2xy + y^2 + x^2 - y^2 + x^2 - 2xy + y^2)$
 $= 2y(3x^2 + y^2)$
 8 $(m - n)(1 + (m - n)^3)$
 $= (m - n)(1 + (m - n))(1 - (m - n) + (m - n)^2)$
 $= (m - n)(m - n + 1)(1 - m + n + m^2 - 2mn + n^2)$
 9 $(x^6 - 4) - 4 = x^6 - 8 = (x^2 - 2)(x^4 + 2x^2 + 4)$
 10 $x^3 - 27 + 28 = x^3 + 1 = (x + 1)(x^2 - x + 1)$

7

1 $(m^3 - 1)(m^3 - 2) = (m - 1)(m^2 + m + 1)(m^3 - 2)$

$$2 \quad (y^3 - 1)(y^3 + 27)$$

$$= (y - 1)(y^2 + y + 1)(y + 3)(y^2 - 3y + 9)$$

$$3 \quad (x^3 - 1)(x^3 - 27)$$

$$= (x - 1)(x^2 + x + 1)(x - 3)(x^2 + 3x + 9)$$

$$4 \quad (x^3 + 1)(x^3 - 8)$$

$$= (x + 1)(x^2 - x + 1)(x - 2)(x^2 + 2x + 4)$$

8

$$(x + 5)^4 - (x + 5) = (x + 5)((x + 5)^3 - 1)$$

$$= (x + 5)((x + 5) - 1)((x + 5)^2 + (x + 5) + 1)$$

$$= (x + 5)(x + 4)(x^2 + 10x + 25 + x + 5 + 1)$$

$$= (x + 5)(x + 4)(x^2 + 11x + 31)$$

9

$$x - y = 1$$

$$\therefore \text{squaring the two sides } (x - y)^2 = 1$$

$$\therefore x^2 - 2xy + y^2 = 1 \quad \therefore x^2 + y^2 = 1 + 2xy$$

$$\therefore xy = 2 \quad \therefore x^2 + y^2 = 1 + 4 = 5$$

$$\therefore (x^3 - y^3) = (x - y)(x^2 + xy + y^2)$$

$$= 1 \times (5 + 2) = 1 \times 7 = 7$$

10

Let the two numbers be X and y

$$\therefore x + y = 2 \quad \therefore (x + y)^2 = 4$$

$$\therefore x^2 + 2xy + y^2 = 4 \quad \therefore x^2 + y^2 = 34$$

$$\therefore 34 + 2xy = 4 \quad \therefore xy = -15$$

$$\therefore x^3 + y^3 = (x + y)(x^2 - xy + y^2)$$

$$= 2(34 + 15) = 98$$

Answers of Exercise 6

1

$$1 \quad X(a + b) + y(a + b) = (a + b)(X + y)$$

$$2 \quad b(a - d) + h(a - d) = (a - d)(b + h)$$

$$3 \quad X(a + y) + (a + y) = (a + y)(X + 1)$$

$$4 \quad a(m - n) + (m - n) = (m - n)(a + 1)$$

$$5 \quad X(a - c) + y(a - c) = (a - c)(X + y)$$

$$6 \quad m(X - y) - n(X - y) = (X - y)(m - n)$$

$$7 \quad y(X + 5) + 7(X + 5) = (X + 5)(y + 7)$$

$$8 \quad 7(X - 4) + a(X - 4) = (X - 4)(7 + a)$$

$$9 \quad 5(l - 2m) - a(l - 2m) = (l - 2m)(5 - a)$$

$$10 \quad a(3X - 1) - 2b(3X - 1) = (3X - 1)(a - 2b)$$

2

$$1 \quad c(c + d) + h(c + d) = (c + d)(c + h)$$

$$2 \quad 2m(3m + 1) - n(3m + 1) = (3m + 1)(2m - n)$$

$$3 \quad 2m(4n - m) + 3l(4n - m) = (4n - m)(2m + 3l)$$

$$4 \quad X(X - 2z) - 2y(X - 2z) = (X - 2z)(X - 2y)$$

$$5 \quad (a + b)^2 - c^2 = (a + b - c)(a + b + c)$$

$$6 \quad (5X - 1)^2 - y^2 = (5X - 1 - y)(5X - 1 + y)$$

$$7 \quad 1 - (X + 2y)^2 = (1 - X - 2y)(1 + X + 2y)$$

$$8 \quad (X - y)(X + y) + 4(X + y) = (X + y)(X - y + 4)$$

$$9 \quad (X - 2y)(X + 2y) - 5(X - 2y)$$

$$= (X - 2y)(X + 2y - 5)$$

$$10 \quad (3X + y)^2 - 4a^2 = (3X + y - 2a)(3X + y + 2a)$$

$$11 \quad 2X(Xy + a) - y(Xy + a) = (Xy + a)(2X - y)$$

$$12 \quad bX(aX + 1) - (aX + 1) = (aX + 1)(bX - 1)$$

3

$$1 \quad a^2(a + 1) + (a + 1) = (a + 1)(a^2 + 1)$$

$$2 \quad X^2(X - 3) + 6(X - 3) = (X - 3)(X^2 + 6)$$

$$3 \quad (a + b)(a^2 - ab + b^2) - (a + b)$$

$$= (a + b)(a^2 - ab + b^2 - 1)$$

$$4 \quad X^2(X + 2) - (X + 2) = (X + 2)(X^2 - 1)$$

$$= (X + 2)(X - 1)(X + 1)$$

$$5 \quad a^2(a + 1) - 9(a + 1) = (a + 1)(a^2 - 9)$$

$$= (a + 1)(a - 3)(a + 3)$$

$$6 \quad X^2(3X + 2) + 4(3X + 2) = (3X + 2)(X^2 + 4)$$

$$7 \quad (y^3 + 8) + 6y(y + 2)$$

$$= (y + 2)(y^2 - 2y + 4) + 6y(y + 2)$$

$$= (y + 2)(y^2 - 2y + 4 + 6y)$$

$$= (y + 2)(y^2 + 4y + 4)$$

$$= (y + 2)(y + 2)^2 = (y + 2)^3$$

$$8 \quad a(a^3 - 3a^2 - 15 + 5a)$$

$$= a(a^2(a - 3) + 5(a - 3))$$

$$= a(a - 3)(a^2 + 5)$$

$$9 \quad a^2(a^3 - 2) + (a^3 - 2) = (a^3 - 2)(a^2 + 1)$$

$$10 \quad X^2(y^3 + 8) - (y^3 + 8) = (y^3 + 8)(X^2 - 1)$$

$$= (y + 2)(y^2 - 2y + 4)(X - 1)(X + 1)$$

4

$$1 \quad X^3(X^2 - 1) - (X^2 - 1) = (X^2 - 1)(X^3 - 1)$$

$$= (X - 1)(X + 1)(X - 1)(X^2 + X + 1)$$

$$= (X - 1)^2(X + 1)(X^2 + X + 1)$$



$$\begin{aligned} 2 \quad & 4m^4 - (9m^2 - 6m + 1) = 4m^4 - (3m - 1)^2 \\ & = (2m^2 - (3m - 1))(2m^2 + (3m - 1)) \\ & = (2m^2 - 3m + 1)(2m^2 + 3m - 1) \\ & = (2m - 1)(m - 1)(2m^2 + 3m - 1) \end{aligned}$$

$$\begin{aligned} 3 \quad & 121x^4 - (100x^2 + 20x + 1) \\ & = 121x^4 - (10x + 1)^2 \\ & = (11x^2 - 10x - 1)(11x^2 + 10x + 1) \\ & = (11x + 1)(x - 1)(11x^2 + 10x + 1) \end{aligned}$$

$$\begin{aligned} 5 \quad & \therefore x^3 + 5x^2 + 3x + 15 = (x^3 + 5x^2) + (3x + 15) \\ & = x^2(x + 5) + 3(x + 5) \\ & = (x + 5)(x^2 + 3) \end{aligned}$$

$\therefore (x + 5)$ cm. is the width of the rectangle

\therefore length of the rectangle $= (x^2 + 3)$ cm.

$$\begin{aligned} \therefore \text{perimeter of the rectangle} &= 2(x + 5 + x^2 + 3) \\ &= 2(x^2 + x + 8) \text{ cm.} \end{aligned}$$

, when $x = 2$

$$\therefore \text{perimeter of the rectangle} = 2(4 + 2 + 8) = 28 \text{ cm.}$$

$$\begin{aligned} 6 \quad & BC = \frac{x(x^2 + 2) + 2(x^2 + 2)}{x + 2} \\ & = \frac{(x^2 + 2)(x + 2)}{x + 2} = (x^2 + 2) \text{ cm.} \end{aligned}$$

$$\begin{aligned} 7 \quad 1 \quad & 2x(x^2(x + 3) - 9x - 27) \\ & = 2x(x^2(x + 3) - 9(x + 3)) \\ & = 2x(x + 3)(x^2 - 9) = 2x(x + 3)(x - 3)(x + 3) \\ & = 2x(x - 3)(x + 3)^2 \end{aligned}$$

$$\begin{aligned} 2 \quad & a^2 + 4ab + 4b^2 - 9 = (a + 2b)^2 - 9 \\ & = (a + 2b - 3)(a + 2b + 3) \end{aligned}$$

$$\begin{aligned} 3 \quad & a^3 - 4b^3 + a^2b - 4ab^2 = a^2(a + b) - 4b^2(a + b) \\ & = (a + b)(a^2 - 4b^2) = (a + b)(a - 2b)(a + 2b) \end{aligned}$$

$$\begin{aligned} 4 \quad & a^2(b - 5) - 7a(b - 5) - 18(b - 5) \\ & = (b - 5)(a^2 - 7a - 18) = (b - 5)(a - 9)(a + 2) \end{aligned}$$

$$8 \quad 1 \quad (x - 2y)^2 + (x - 2y) = (x - 2y)(x - 2y + 1)$$

$$\begin{aligned} 2 \quad & 3(x^2 - 5x - 24) - y(x - 8) \\ & = 3(x - 8)(x + 3) - y(x - 8) \\ & = (x - 8)(3(x + 3) - y) = (x - 8)(3x + 9 - y) \end{aligned}$$

$$\begin{aligned} 3 \quad & a^3 - 1 + a - 1 = (a - 1)(a^2 + a + 1) + (a - 1) \\ & = (a - 1)(a^2 + a + 1 + 1) = (a - 1)(a^2 + a + 2) \end{aligned}$$

$$\begin{aligned} 4 \quad & a^3 + 8 + a^2 - 4 \\ & = (a + 2)(a^2 - 2a + 4) + (a - 2)(a + 2) \\ & = (a + 2)(a^2 - 2a + 4 + a - 2) = (a + 2)(a^2 - a + 2) \end{aligned}$$

Answers of Exercise 7

$$\begin{aligned} 1 \quad & 1 \quad x^4 + 4 + 4x^2 - 4x^2 = (x^4 + 4x^2 + 4) - 4x^2 \\ & = (x^2 + 2)^2 - 4x^2 = (x^2 + 2 - 2x)(x^2 + 2 + 2x) \\ & = (x^2 - 2x + 2)(x^2 + 2x + 2) \end{aligned}$$

$$\begin{aligned} 2 \quad & x^4 + 16x^2 + 64 - 16x^2 \\ & = (x^2 + 8)^2 - 16x^2 = (x^2 + 8 - 4x)(x^2 + 8 + 4x) \\ & = (x^2 - 4x + 8)(x^2 + 4x + 8) \end{aligned}$$

$$\begin{aligned} 3 \quad & x^4 + 4x^2y^2 + 4y^4 - 4x^2y^2 = (x^2 + 2y^2)^2 - 4x^2y^2 \\ & = (x^2 + 2y^2 - 2xy)(x^2 + 2y^2 + 2xy) \\ & = (x^2 - 2xy + 2y^2)(x^2 + 2xy + 2y^2) \end{aligned}$$

$$\begin{aligned} 4 \quad & x^4 + 16x^2y^2 + 64y^4 - 16x^2y^2 \\ & = (x^2 + 8y^2)^2 - 16x^2y^2 \\ & = (x^2 + 8y^2 - 4xy)(x^2 + 8y^2 + 4xy) \\ & = (x^2 - 4xy + 8y^2)(x^2 + 4xy + 8y^2) \end{aligned}$$

$$\begin{aligned} 5 \quad & a^4 + 100a^2b^2 + 2500b^4 - 100a^2b^2 \\ & = (a^2 + 50b^2)^2 - 100a^2b^2 \\ & = (a^2 + 50b^2 - 10ab)(a^2 + 50b^2 + 10ab) \\ & = (a^2 - 10ab + 50b^2)(a^2 + 10ab + 50b^2) \end{aligned}$$

$$\begin{aligned} 6 \quad & 81x^4 + 36x^2z^2 + 4z^4 - 36x^2z^2 \\ & = (9x^2 + 2z^2)^2 - 36x^2z^2 \\ & = (9x^2 + 2z^2 - 6xz)(9x^2 + 2z^2 + 6xz) \\ & = (9x^2 - 6xz + 2z^2)(9x^2 + 6xz + 2z^2) \end{aligned}$$

$$\begin{aligned} 7 \quad & 4x^4 + 100x^2z^2 + 625z^4 - 100x^2z^2 \\ & = (2x^2 + 25z^2)^2 - 100x^2z^2 \\ & = (2x^2 + 25z^2 - 10xz)(2x^2 + 25z^2 + 10xz) \\ & = (2x^2 - 10xz + 25z^2)(2x^2 + 10xz + 25z^2) \end{aligned}$$

$$\begin{aligned} 8 \quad & 64x^4 + 144x^2y^2 + 81y^4 - 144x^2y^2 \\ & = (8x^2 + 9y^2)^2 - 144x^2y^2 \\ & = (8x^2 + 9y^2 - 12xy)(8x^2 + 9y^2 + 12xy) \\ & = (8x^2 - 12xy + 9y^2)(8x^2 + 12xy + 9y^2) \end{aligned}$$

$$9 \quad 3(4x^4 + y^4) = 3(4x^4 + 4x^2y^2 + y^4 - 4x^2y^2)$$

$$= 3((2x^2 + y^2)^2 - 4x^2y^2)$$

$$= 3(2x^2 + y^2 - 2xy)(2x^2 + y^2 + 2xy)$$

$$= 3(2x^2 - 2xy + y^2)(2x^2 + 2xy + y^2)$$

$$10 \quad 2y^2(4x^4 + 81z^4)$$

$$= 2y^2(4x^4 + 36x^2z^2 + 81z^4 - 36x^2z^2)$$

$$= 2y^2((2x^2 + 9z^2)^2 - 36x^2z^2)$$

$$= 2y^2(2x^2 + 9z^2 - 6xz)(2x^2 + 9z^2 + 6xz)$$

$$= 2y^2(2x^2 - 6xz + 9z^2)(2x^2 + 6xz + 9z^2)$$

2

$$1 \quad 9x^4 + 6x^2 + 1 + 2x^2 - 6x^2$$

$$= (3x^2 + 1)^2 - 4x^2 = (3x^2 + 1 - 2x)(3x^2 + 1 + 2x)$$

$$= (3x^2 - 2x + 1)(3x^2 + 2x + 1)$$

$$2 \quad x^4 + 8x^2 + 16 - 28x^2 - 8x^2$$

$$= (x^2 + 4)^2 - 36x^2 = (x^2 + 4 - 6x)(x^2 + 4 + 6x)$$

$$= (x^2 - 6x + 4)(x^2 + 6x + 4)$$

$$3 \quad x^4 + 18x^2 + 81 + 9x^2 - 18x^2$$

$$= (x^2 + 9)^2 - 9x^2 = (x^2 + 9 - 3x)(x^2 + 9 + 3x)$$

$$= (x^2 - 3x + 9)(x^2 + 3x + 9)$$

$$4 \quad 9x^4 - 24x^2 + 16 - 25x^2 + 24x^2$$

$$= (3x^2 - 4)^2 - x^2 = (3x^2 - 4 - x)(3x^2 - 4 + x)$$

$$= (3x^2 - x - 4)(3x^2 + x - 4)$$

$$= (3x - 4)(x + 1)(3x + 4)(x - 1)$$

$$5 \quad x^4 + 4x^2y^2 + 4y^4 + 3x^2y^2 - 4x^2y^2$$

$$= (x^2 + 2y^2)^2 - x^2y^2$$

$$= (x^2 + 2y^2 - xy)(x^2 + 2y^2 + xy)$$

$$= (x^2 - xy + 2y^2)(x^2 + xy + 2y^2)$$

$$6 \quad m^4 - 2m^2n^2 + n^4 - 11m^2n^2 + 2m^2n^2$$

$$= (m^2 - n^2)^2 - 9m^2n^2$$

$$= (m^2 - n^2 - 3mn)(m^2 - n^2 + 3mn)$$

$$= (m^2 - 3mn - n^2)(m^2 + 3mn - n^2)$$

$$7 \quad x^4 + 10x^2y^2 + 25y^4 + x^2y^2 - 10x^2y^2$$

$$= (x^2 + 5y^2)^2 - 9x^2y^2$$

$$= (x^2 + 5y^2 - 3xy)(x^2 + 5y^2 + 3xy)$$

$$= (x^2 - 3xy + 5y^2)(x^2 + 3xy + 5y^2)$$

$$8 \quad a^4 + 8a^2b^2 + 16b^4 + 4a^2b^2 - 8a^2b^2$$

$$= (a^2 + 4b^2)^2 - 4a^2b^2$$

$$= (a^2 + 4b^2 - 2ab)(a^2 + 4b^2 + 2ab)$$

$$= (a^2 - 2ab + 4b^2)(a^2 + 2ab + 4b^2)$$

$$9 \quad x^4 + 2x^2y^2 + y^4 - 7x^2y^2 - 2x^2y^2$$

$$= (x^2 + y^2)^2 - 9x^2y^2$$

$$= (x^2 + y^2 - 3xy)(x^2 + y^2 + 3xy)$$

$$= (x^2 - 3xy + y^2)(x^2 + 3xy + y^2)$$

$$10 \quad 16x^4 - 24x^2y^2 + 9y^4 - 28x^2y^2 + 24x^2y^2$$

$$= (4x^2 - 3y^2)^2 - 4x^2y^2$$

$$= (4x^2 - 3y^2 - 2xy)(4x^2 - 3y^2 + 2xy)$$

$$= (4x^2 - 2xy - 3y^2)(4x^2 + 2xy - 3y^2)$$

$$11 \quad 4x^4 - 20x^2y^2 + 25y^4 - 29x^2y^2 + 20x^2y^2$$

$$= (2x^2 - 5y^2)^2 - 9x^2y^2$$

$$= (2x^2 - 5y^2 - 3xy)(2x^2 - 5y^2 + 3xy)$$

$$= (2x^2 - 3xy - 5y^2)(2x^2 + 3xy - 5y^2)$$

$$= (2x - 5y)(x + y)(2x + 5y)(x - y)$$

$$12 \quad 3(m^4 - 2m^2n^2 + n^4 - 16m^2n^2)$$

$$= 3((m^2 - n^2)^2 - 16m^2n^2)$$

$$= 3(m^2 - n^2 - 4mn)(m^2 - n^2 + 4mn)$$

$$= 3(m^2 - 4mn - n^2)(m^2 + 4mn - n^2)$$

$$13 \quad 2(25x^4 + 9y^4 - 34x^2y^2)$$

$$\leq 2(25x^4 - 30x^2y^2 + 9y^4 - 34x^2y^2 + 30x^2y^2)$$

$$= 2((5x^2 - 3y^2)^2 - 4x^2y^2)$$

$$= 2(5x^2 - 3y^2 - 2xy)(5x^2 - 3y^2 + 2xy)$$

$$= 2(5x^2 - 2xy - 3y^2)(5x^2 + 2xy - 3y^2)$$

$$= 2(5x + 3y)(x - y)(5x - 3y)(x + y)$$

$$14 \quad 2a(9b^4 - 57b^2c^2 + 64c^4)$$

$$= 2a(9b^4 - 48b^2c^2 + 64c^4 - 57b^2c^2 + 48b^2c^2)$$

$$= 2a((3b^2 - 8c^2)^2 - 9b^2c^2)$$

$$= 2a(3b^2 - 8c^2 - 3bc)(3b^2 - 8c^2 + 3bc)$$

$$= 2a(3b^2 - 3bc - 8c^2)(3b^2 + 3bc - 8c^2)$$

3

$$1 \quad 9x^4 - 10x^2y^2 + y^4$$

$$= 9x^4 - 6x^2y^2 + y^4 - 10x^2y^2 + 6x^2y^2$$

$$= (3x^2 - y^2)^2 - 4x^2y^2$$

$$= (3x^2 - y^2 - 2xy)(3x^2 - y^2 + 2xy)$$

$$= (3x^2 - 2xy - y^2)(3x^2 + 2xy - y^2)$$

$$= (3x + y)(x - y)(3x - y)(x + y)$$


$$2 \quad x^4 - 19x^2y^2 + 25y^4$$

$$= x^4 - 10x^2y^2 + 25y^4 - 19x^2y^2 + 10x^2y^2$$

$$= (x^2 - 5y^2)^2 - 9x^2y^2$$

$$= (x^2 - 5y^2 - 3xy)(x^2 - 5y^2 + 3xy)$$

$$= (x^2 - 3xy - 5y^2)(x^2 + 3xy - 5y^2)$$



Algebra

- 3** $16x^4 - 28x^2y^2 + y^4$
 $= 16x^4 + 8x^2y^2 + y^4 - 28x^2y^2 - 8x^2y^2$
 $= (4x^2 + y^2)^2 - 36x^2y^2$
 $= (4x^2 + y^2 - 6xy)(4x^2 + y^2 + 6xy)$
 $= (4x^2 - 6xy + y^2)(4x^2 + 6xy + y^2)$
- 4** $4a^4 - 24a^2b^2 + 9b^4$
 $= 4a^4 + 12a^2b^2 + 9b^4 - 24a^2b^2 - 12a^2b^2$
 $= (2a^2 + 3b^2)^2 - 36a^2b^2$
 $= (2a^2 + 3b^2 + 6ab)(2a^2 + 3b^2 - 6ab)$
 $= (2a^2 - 6ab + 3b^2)(2a^2 + 6ab + 3b^2)$
- 4**
- 1** $(x^4 - 4y^4)(x^4 + 4y^4)$
 $= (x^2 - 2y^2)(x^2 + 2y^2)(x^4 + 4y^4)$
 $= (x^2 - 2y^2)(x^2 + 2y^2)(x^4 + 4x^2y^2 + 4y^4 - 4x^2y^2)$
 $= (x^2 - 2y^2)(x^2 + 2y^2)((x^2 + 2y^2)^2 - 4x^2y^2)$
 $= (x^2 - 2y^2)(x^2 + 2y^2)(x^2 + 2y^2 - 2xy)$
 $(x^2 + 2y^2 + 2xy)$
 $= (x^2 - 2y^2)(x^2 + 2y^2)(x^2 - 2xy + 2y^2)$
 $(x^2 + 2xy + 2y^2)$
- 2** $(x^4 - 25)(x^4 + 4)$
 $= (x^2 - 5)(x^2 + 5)(x^4 + 4x^2 + 4 - 4x^2)$
 $= (x^2 - 5)(x^2 + 5)((x^2 + 2)^2 - 4x^2)$
 $= (x^2 - 5)(x^2 + 5)(x^2 - 2 - 2x)(x^2 + 2 + 2x)$
 $= (x^2 - 5)(x^2 + 5)(x^2 - 2x + 2)(x^2 + 2x + 2)$
- 3** $(x^4 - 9y^4)(x^4 + 4y^4)$
 $= (x^2 - 3y^2)(x^2 + 3y^2)$
 $\times (x^4 + 4x^2y^2 + 4y^4 - 4x^2y^2)$
 $= (x^2 - 3y^2)(x^2 + 3y^2)((x^2 + 2y^2)^2 - 4x^2y^2)$
 $= (x^2 - 3y^2)(x^2 + 3y^2)$
 $(x^2 + 2y^2 - 2xy)(x^2 + 2y^2 + 2xy)$
 $= (x^2 - 3y^2)(x^2 + 3y^2)(x^2 - 2xy + 2y^2)$
 $(x^2 + 2xy + 2y^2)$
- 4** $(81x^4 + 64y^4)(x^4 - y^4)$
 $= (81x^4 + 144x^2y^2 + 64y^4 - 144x^2y^2)$
 $(x^2 - y^2)(x^2 + y^2)$
 $= (9x^2 + 8y^2)^2 - 144x^2y^2)(x - y)(x + y)(x^2 + y^2)$
 $= (9x^2 + 8y^2 - 12xy)(9x^2 + 8y^2 + 12xy)$
 $(x - y)(x + y)(x^2 + y^2)$
 $= (9x^2 - 12xy + 8y^2)(9x^2 + 12xy + 8y^2)$
 $(x - y)(x + y)(x^2 + y^2)$

Answers of General Exercises on factorization

- 1** $(5x - 3y)(5x + 3y)$
- 2** $2x^2(x^3 + 27) = 2x^2(x + 3)(x^2 - 3x + 9)$
- 3** $(2y + 3)(y + 1)$
- 4** $2(x^4 - 9) = 2(x^2 - 3)(x^2 + 3)$
- 5** $2(x^2 - 10x + 24) = 2(x - 6)(x - 4)$
- 6** $(x + 4)^2$
- 7** $(2x + 3)(4x^2 - 6x + 9)$
- 8** $(y - 51)(y + 1)$ **9** $(5x - 3)^2$
- 10** $(x - 9)(x + 9)$
- 11** $y(y^4 - 1) = y(y^2 - 1)(y^2 + 1)$
 $= y(y - 1)(y + 1)(y^2 + 1)$
- 12** $(3x - 2)(x + 3)$ **13** $(x - 6)(x - 2)$
- 14** $3x(x^2 + 4) + 2(x^2 + 4) = (x^2 + 4)(3x + 2)$
- 15** $(x - 5)(x^2 + 5x + 25)$
- 16** $(2x - 3)^2$
- 17** $a^2(a + 3) - 9(a + 3)$
 $= (a^2 - 9)(a + 3) = (a - 3)(a + 3)(a + 3)$
- 18** $(x + 2)^3 - 4(x + 2) = (x + 2)((x + 2)^2 - 4)$
 $= (x + 2)(x + 2 - 2)(x + 2 + 2) = x(x + 2)(x + 4)$
- 19** $-(2x^2 + 15x + 7) = -(2x + 1)(x + 7)$
- 20** $(x - 5)(x - 2)$
- 21** $4x^4 + 4x^2y^2 + y^4 - 4x^2y^2 = (2x^2 + y^2)^2 - 4x^2y^2$
 $= (2x^2 + y^2 - 2xy)(2x^2 + y^2 + 2xy)$
 $= (2x^2 - 2xy + y^2)(2x^2 + 2xy + y^2)$
- 22** $(3x^2 - 4y^2)(3x^2 + 4y^2)$
- 23** $(x^2 - 4)(x^2 - 5) = (x - 2)(x + 2)(x^2 - 5)$
- 24** $(1 - 2x)(1 + 2x)$
- 25** $(a^3 - 25b^3)(a^3 + 25b^3)$
- 26** $((x + y) - x)((x + y)^2 + x(x + y) + x^2)$
 $= y(x^2 + 2xy + y^2 + x^2 + xy + x^2)$
 $= y(3x^2 + 3xy + y^2)$
- 27** $(7x + 5y)^2$ **28** $(5x + 2)(x - 1)$
- 29** $x^4 - 2x^2y^2 + y^4 - 11x^2y^2 + 2x^2y^2$
 $= (x^2 - y^2)^2 - 9x^2y^2$
 $= (x^2 - y^2 - 3xy)(x^2 - y^2 + 3xy)$
 $= (x^2 - 3xy - y^2)(x^2 + 3xy - y^2)$

Answers

30 $3x^2(x^2 - 5x + 4) = 3x^2(x-4)(x-1)$

31 $(3x-1)(x-6)$ 32 $(2x+7y)^2$

33 $(x^3 - 8y^3)(x^3 + 8y^3)$
 $= (x-2y)(x^2 + 2xy + 4y^2)(x+2y)$
 $\times (x^2 - 2xy + 4y^2)$

34 $2y^3(y-2) + 7(y-2) = (y-2)(2y^3 + 7)$

35 $3(5a^4 - 2a^2b - 7b^2) = 3(5a^2 - 7b)(a^2 + b)$

36 $6x^2 - 7xy + 2y^2 = (2x-y)(3x-2y)$

37 $64x^4 + 16x^2y^2 + y^4 - 16x^2y^2$
 $= (8x^2 + y^2)^2 - 16x^2y^2$
 $= (8x^2 + y^2 - 4xy)(8x^2 + y^2 + 4xy)$
 $= (8x^2 - 4xy + y^2)(8x^2 + 4xy + y^2)$

38 $(x^2 + 3)(x^2 - 8)$

39 $5(4x^4 + 8x^2y^2 + 9y^4)$
 $= 5(4x^4 + 12x^2y^2 + 9y^4 + 8x^2y^2 - 12x^2y^2)$
 $= 5((2x^2 + 3y^2)^2 - 4x^2y^2)$
 $= 5(2x^2 + 3y^2 - 2xy)(2x^2 + 3y^2 + 2xy)$
 $= 5(2x^2 - 2xy + 3y^2)(2x^2 + 2xy + 3y^2)$

40 $(9x^2 - 4y^2)(x^2 - y^2)$
 $= (3x-2y)(3x+2y)(x-y)(x+y)$

Answers of Exercise 8

1

1 $x(x-6) = 0$ $\therefore x = 0$ or $x - 6 = 0$
 $\therefore x = 6$ S.S. = $\{0, 6\}$

2 $(x-4)(x+4) = 0$
 $\therefore x - 4 = 0$ then $x = 4$ or $x + 4 = 0$ then $x = -4$
 \therefore S.S. = $\{4, -4\}$

3 $(2x-5)(2x+5) = 0$ $\therefore 2x - 5 = 0$
 $\therefore x = \frac{5}{2}$ or $2x + 5 = 0$ then $x = -\frac{5}{2}$
 S.S. = $\{\frac{5}{2}, -\frac{5}{2}\}$

4 $(x+3)(x+2) = 0$
 $\therefore x + 3 = 0$ then $x = -3$ or $x + 2 = 0$ then $x = -2$
 S.S. = $\{-3, -2\}$

5 $(x-5)(x-3) = 0$
 $\therefore x - 5 = 0$ then $x = 5$ or $x - 3 = 0$ then $x = 3$
 S.S. = $\{5, 3\}$

6 $(x+9)(x-2) = 0$
 $\therefore x + 9 = 0$ then $x = -9$ or $x - 2 = 0$ $\therefore x = 2$
 S.S. = $\{-9, 2\}$

7 $(x-5)(x+4) = 0$
 $\therefore x - 5 = 0$ then $x = 5$ or $x + 4 = 0$ then $x = -4$
 S.S. = $\{5, -4\}$

8 $(3x+1)(2x-3) = 0$ $\therefore 3x + 1 = 0$
 $\therefore x = -\frac{1}{3}$ or $2x - 3 = 0$ then $x = \frac{3}{2}$
 \therefore S.S. = $\{-\frac{1}{3}, \frac{3}{2}\}$

9 $(2x-1)(x+4) = 0$
 $\therefore 2x - 1 = 0$ then $x = \frac{1}{2}$ or $x + 4 = 0$ then $x = -4$
 S.S. = $\{\frac{1}{2}, -4\}$

10 $(2x+1)(x-3) = 0$ $\therefore 2x + 1 = 0$
 $\therefore x = -\frac{1}{2}$ or $x - 3 = 0$ then $x = 3$
 S.S. = $\{-\frac{1}{2}, 3\}$

11 $(x+2)^2 = 0$ then $x + 2 = 0$ $\therefore x = -2$
 S.S. = $\{-2\}$

12 $(3x-1)^2 = 0$ $\therefore 3x - 1 = 0$
 $\therefore x = \frac{1}{3}$ \therefore S.S. = $\{\frac{1}{3}\}$

2

1 $x^2 - x = 0$ $\therefore x(x-1) = 0$
 $\therefore x = 0$ or $x - 1 = 0$ then $x = 1$
 \therefore S.S. = $\{0, 1\}$

2 $3x^2 - 7x = 0$ $\therefore x(3x-7) = 0$
 $\therefore x = 0$ or $3x - 7 = 0$ then $x = \frac{7}{3}$
 \therefore S.S. = $\{0, \frac{7}{3}\}$

3 $4x^2 - 49 = 0$ $\therefore (2x-7)(2x+7) = 0$
 $\therefore (2x-7) = 0$ then $x = \frac{7}{2}$ or $(2x+7) = 0$
 then $x = -\frac{7}{2}$ S.S. = $\{\frac{7}{2}, -\frac{7}{2}\}$

4 $x^2 + x - 6 = 0$ $\therefore (x+3)(x-2) = 0$
 $\therefore x + 3 = 0$ then $x = -3$ or $x - 2 = 0$ then $x = 2$
 \therefore S.S. = $\{-3, 2\}$

5 $x^2 - 8x + 15 = 0$ $\therefore (x-3)(x-5) = 0$
 $\therefore x - 3 = 0$ then $x = 3$ or $x - 5 = 0$ then $x = 5$
 \therefore S.S. = $\{3, 5\}$

6 $x^2 - 2x - 15 = 0$ $\therefore (x-5)(x+3) = 0$
 $\therefore x - 5 = 0$ then $x = 5$ or $x + 3 = 0$ then $x = -3$
 \therefore S.S. = $\{5, -3\}$

7 $2x^2 - 10x + 12 = 0$ $\therefore x^2 - 5x + 6 = 0$
 $\therefore (x-3)(x-2) = 0$
 $\therefore x - 3 = 0$ then $x = 3$ or $x - 2 = 0$ then $x = 2$
 S.S. = $\{3, 2\}$

Algebra



- 8 $6x^2 - x - 22 = 0 \quad \therefore (x-2)(6x+11) = 0$
 $\therefore x-2=0$ then $x=2$ or $6x+11=0$ then $x = \frac{-11}{6}$
 S.S. = $\{2, \frac{-11}{6}\}$
- 9 $5x^2 + 12x - 44 = 0 \quad \therefore (5x+22)(x-2) = 0$
 $\therefore 5x+22=0$ then $x = \frac{-22}{5}$ or $x-2=0$ then $x=2$
 S.S. = $\{\frac{-22}{5}, 2\}$
- 10 $12x^2 - 47x + 45 = 0 \quad \therefore (4x-9)(3x-5) = 0$
 $\therefore 4x-9=0$ then $x = \frac{9}{4}$ or $3x-5=0$ then $x = \frac{5}{3}$
 S.S. = $\{\frac{9}{4}, \frac{5}{3}\}$
- 11 $x^2 + 3 = 12 \quad \therefore x^2 - 9 = 0$
 $\therefore (x-3)(x+3) = 0$
 $\therefore x-3=0$ then $x=3$ or $x+3=0$ then $x=-3$
 \therefore S.S. = $\{3, -3\}$
- 12 $x^2 - 3x - 5x = 0 \quad \therefore x^2 - 8x = 0$
 $\therefore x(x-8) = 0$
 $\therefore x=0$ or $x-8=0$ then $x=8$
 S.S. = $\{0, 8\}$
-
- 3
- 1 $x^2 - 5x + 6 = 0 \quad \therefore (x-3)(x-2) = 0$
 $\therefore x-3=0$ then $x=3$ or $x-2=0$ then $x=2$
 S.S. = $\{3, 2\}$
- 2 $x^2 + 3x - 10 = 0 \quad \therefore (x+5)(x-2) = 0$
 $\therefore x+5=0$ then $x=-5$ or $x-2=0$ then $x=2$
 S.S. = $\{-5, 2\}$
- 3 $x^2 + 2x - 8 + 5 = 0 \quad \therefore x^2 + 2x - 3 = 0$
 $\therefore (x+3)(x-1) = 0$
 $\therefore x+3=0$ then $x=-3$ or $x-1=0$ then $x=1$
 S.S. = $\{-3, 1\}$
- 4 $x^2 - 2x - 3 - 5 = 0 \quad \therefore x^2 - 2x - 8 = 0$
 $\therefore (x-4)(x+2) = 0$
 $\therefore x-4=0$ then $x=4$ or $x+2=0$ then $x=-2$
 S.S. = $\{4, -2\}$
- 5 $x^2 + 5x - 24 - 3x = 0 \quad \therefore x^2 + 2x - 24 = 0$
 $\therefore (x+6)(x-4) = 0$
 $\therefore x+6=0$ then $x=-6$ or $x-4=0$ then $x=4$
 S.S. = $\{-6, 4\}$
- 6 $2x^2 - 10x - 20 + 4x = 0$
 $\therefore 2x^2 - 6x - 20 = 0 \quad \therefore x^2 - 3x - 10 = 0$
 $\therefore (x-5)(x+2) = 0$
 $\therefore x-5=0$ then $x=5$ or $x+2=0$ then $x=-2$
 S.S. = $\{5, -2\}$
- 7 $(x+3-7)(x+3+7) = 0$
 $\therefore (x-4)(x+10) = 0$
 $\therefore x-4=0$ then $x=4$ or $x+10=0$ then $x=-10$
 S.S. = $\{4, -10\}$
- 8 $(x-2)^2 - 81 = 0$
 $\therefore (x-2-9)(x-2+9) = 0$
 $\therefore (x-11)(x+7) = 0$
 $\therefore x-11=0$ then $x=11$ or $x+7=0$ then $x=-7$
 S.S. = $\{11, -7\}$
- 9 $4(x+5)^2 - 25 = 0$
 $\therefore (2(x+5)-5)(2(x+5)+5) = 0$
 $\therefore (2x+5)(2x+15) = 0$
 $\therefore 2x+5=0$ then $x = \frac{-5}{2}$
 or $2x+15=0$ then $x = \frac{-15}{2}$
 \therefore S.S. = $\{\frac{-5}{2}, \frac{-15}{2}\}$
- 10 $x^2 - 2x + 1 + x - 3 = 0 \quad \therefore (x^2 - x - 2) = 0$
 $\therefore (x-2)(x+1) = 0$
 $\therefore x-2=0$ then $x=2$ or $x+1=0$ then $x=-1$
 S.S. = $\{2, -1\}$
- 11 $(x+3)(2(x+3)+7) = 0$
 $\therefore (x+3)(2x+13) = 0$
 $\therefore x+3=0$ then $x=-3$
 or $2x+13=0$ then $x = \frac{-13}{2}$
 S.S. = $\{-3, \frac{-13}{2}\}$
- 12 $4x^2 + 4x + 1 = 9x^2 - 6x + 1$
 $\therefore 4x^2 - 9x^2 + 4x + 6x + 1 - 1 = 0$
 $\therefore -5x^2 + 10x = 0 \quad \therefore x^2 - 2x = 0$
 $\therefore x(x-2) = 0$
 $\therefore x=0$ or $x-2=0$ then $x=2$
 S.S. = $\{0, 2\}$
- 13 $4x^2 - 4x + 1 + x^2 - 2x + 1 - 10 = 0$
 $\therefore 5x^2 - 6x - 8 = 0 \quad \therefore (5x+4)(x-2) = 0$
 $\therefore 5x+4=0$ then $x = \frac{-4}{5}$ or $x-2=0$ then $x=2$
 S.S. = $\{\frac{-4}{5}, 2\}$
- 14 $x^2 + 6x + 9 + 3x + 9 - 10 = 0$
 $\therefore x^2 + 9x + 8 = 0 \quad \therefore (x+1)(x+8) = 0$
 $\therefore x+1=0$ then $x=-1$ or $x+8=0$ then $x=-8$
 S.S. = $\{-1, -8\}$

4

1 $2x(x^2 - 4) = 0 \quad \therefore 2x(x-2)(x+2) = 0$
 $\therefore 2x = 0$ then $x = 0$ or $x - 2 = 0$ then $x = 2$
 or $x + 2 = 0$ then $x = -2$
 S.S. = $\{0, 2, -2\}$

2 $4x^3 - 9x = 0 \quad \therefore x(4x^2 - 9) = 0$
 $\therefore x(2x-3)(2x+3) = 0$
 $\therefore x = 0$ or $2x - 3 = 0$ then $x = \frac{3}{2}$
 or $2x + 3 = 0$ then $x = -\frac{3}{2}$
 S.S. = $\{0, \frac{3}{2}, -\frac{3}{2}\}$

3 $(x^2 - 4)(x^2 - 1) = 0$
 $\therefore (x-2)(x+2)(x-1)(x+1) = 0$
 $\therefore x - 2 = 0$ then $x = 2$ or $x + 2 = 0$ then $x = -2$
 or $x - 1 = 0$ then $x = 1$ or $x + 1 = 0$ then $x = -1$
 S.S. = $\{2, -2, 1, -1\}$

4 $x^4 - 26x^2 + 25 = 0$
 $\therefore (x^2 - 25)(x^2 - 1) = 0$
 $\therefore (x-5)(x+5)(x-1)(x+1) = 0$
 $\therefore x - 5 = 0$ then $x = 5$ or $x + 5 = 0$ then $x = -5$
 or $x - 1 = 0$ then $x = 1$ or $x + 1 = 0$ then $x = -1$
 S.S. = $\{5, -5, 1, -1\}$

5 $(x^2 - 4)(x^2 + 4) = 0$
 $\therefore (x-2)(x+2)(x^2 + 4) = 0$
 $\therefore x - 2 = 0$ then $x = 2$
 or $x + 2 = 0$ then $x = -2$
 or $x^2 + 4 = 0$ (has no solution in \mathbb{R})
 \therefore The S.S. = $\{2, -2\}$

5

1 Multiplying the equation by 3
 $\therefore 3y^2 - 7y + 4 = 0 \quad \therefore (3y-4)(y-1) = 0$
 $\therefore 3y - 4 = 0$ then $y = \frac{4}{3}$ or $y - 1 = 0$ then $y = 1$
 S.S. = $\{\frac{4}{3}, 1\}$

2 Multiplying the equation by 2
 $\therefore 2x^2 - 2x - 3 - 9 = 0 \quad \therefore 2x^2 - 2x - 12 = 0$
 $\therefore x^2 - x - 6 = 0 \quad \therefore (x-3)(x+2) = 0$
 $\therefore x - 3 = 0$ then $x = 3$ or $x + 2 = 0$ then $x = -2$
 S.S. = $\{3, -2\}$

3 Multiplying the equation by x

$\therefore x^2 + 2 = 3x \quad \therefore x^2 - 3x + 2 = 0$
 $\therefore (x-2)(x-1) = 0$
 $\therefore x - 2 = 0$ then $x = 2$ or $x - 1 = 0$ then $x = 1$
 S.S. = $\{2, 1\}$

4 Multiplying the equation by $2x$

$\therefore 2x^2 - 10 = x \quad \therefore 2x^2 - x - 10 = 0$
 $\therefore (2x-5)(x+2) = 0$
 $\therefore 2x - 5 = 0$ then $x = \frac{5}{2}$ or $x + 2 = 0$ then $x = -2$
 S.S. = $\{\frac{5}{2}, -2\}$

5 Multiplying the equation by $5x$

$\therefore x(x-1) = 30 \quad \therefore x^2 - x - 30 = 0$
 $\therefore (x+5)(x-6) = 0 \quad \therefore x + 5 = 0$, then $x = -5$
 or $x - 6 = 0$, then $x = 6$
 \therefore The S.S. = $\{-5, 6\}$

6

- | | | | |
|-----|-----|-----|-----|
| 1 c | 2 c | 3 d | 4 d |
| 5 a | 6 d | 7 b | 8 c |

7

- | | | | |
|-----|--------|--------|-------------------------|
| 1 3 | 2 8, 4 | 3 0, 4 | 4 $\{4, -\frac{1}{2}\}$ |
|-----|--------|--------|-------------------------|

8

Multiplying both sides of the equation by x

$\therefore x^2 + 1 = 2x \quad \therefore x^2 - 2x + 1 = 0$
 $\therefore (x-1)^2 = 0 \quad \therefore x = 1$
 $\therefore x^2 + \frac{1}{x^2} = 1^2 + \frac{1}{1^2} = 2$

Another solution :

Squaring the two sides of the equation

$\therefore (x + \frac{1}{x})^2 = 4 \quad \therefore x^2 + 2 + \frac{1}{x^2} = 4$
 $\therefore x^2 + \frac{1}{x^2} = 4 - 2 = 2$

9

$\therefore x^2 + \frac{1}{x^2} = 34$,

Adding 2 to the both sides

$\therefore x^2 + 2 + \frac{1}{x^2} = 34 + 2$

$\therefore (x + \frac{1}{x})^2 = 36$,

Taking the square root to both sides

$\therefore x + \frac{1}{x} = \pm\sqrt{36} = \pm 6$

Algebra



Another solution :

$$\left(x + \frac{1}{x}\right)^2 = x^2 + 2 + \frac{1}{x^2} = x^2 + \frac{1}{x^2} + 2$$

$$= 34 + 2 = 36$$

Taking the square root to both sides

$$\therefore x + \frac{1}{x} = \pm\sqrt{36} = \pm 6$$

10

Multiply the equation by 12

$$\therefore 2x(x-2) - 3x(x+1) + 28(x-3) - 24 = 0$$

$$\therefore 2x^2 - 4x - 3x^2 - 3x + 28x - 84 - 24 = 0$$

$$\therefore -x^2 + 21x - 108 = 0 \quad \therefore x^2 - 21x + 108 = 0$$

$$\therefore (x-9)(x-12) = 0 \quad \therefore x-9 = 0 \text{ then } x = 9$$

$$\text{or } x-12 = 0 \text{ then } x = 12 \quad \text{S.S.} = \{9, 12\}$$

11

$\therefore 2, 3$ are the two roots of the equation

\therefore the equation is $(x-2)(x-3) = 0$

$$\text{i.e. } x^2 - 5x + 6 = 0 \quad \therefore b = 5, c = 6$$

Answers of Exercise 9

1

1 c

2 c

3 b

4 c

5 d

6 d

7 c

2

$$\text{Let the number be } x \quad \therefore x^2 - 5x = 36$$

$$\therefore x^2 - 5x - 36 = 0 \quad (x+4)(x-9) = 0$$

$$\therefore x+4 = 0, \text{ then } x = -4 \text{ (refused)}$$

$$\text{or } x-9 = 0, \text{ then } x = 9 \quad \therefore \text{The number is } 9$$

3

Let the number be X

$$\therefore 2x^2 + 7 = 135 \quad \therefore 2x^2 - 128 = 0$$

$$\therefore x^2 - 64 = 0 \quad \therefore (x-8)(x+8) = 0$$

$$\therefore x-8 = 0, \text{ then } x = 8 \text{ or } x+8 = 0, \text{ then } x = -8$$

$$\therefore \text{The number is } 8 \text{ or } -8$$

4

$$\text{Let the number be } x \quad \therefore 4x^2 = 81$$

$$\therefore 4x^2 - 81 = 0 \quad \therefore (2x-9)(2x+9) = 0$$

$$\therefore 2x-9 = 0, \text{ then } x = \frac{9}{2},$$

$$\text{or } 2x+9 = 0, \text{ then } x = -\frac{9}{2}$$

$$\therefore \text{The number is } \frac{9}{2} \text{ or } -\frac{9}{2}$$

5

$$\text{Let the number be } X \quad \therefore x^2 = 6x$$

$$\therefore x^2 - 6x = 0 \quad \therefore x(x-6) = 0$$

$$\therefore x = 0 \text{ (refused) or } x-6 = 0, \text{ then } x = 6$$

$$\therefore \text{The number is } 6$$

6

Let the number be X

$$\therefore x + x^2 = 12 \quad \therefore x^2 + x - 12 = 0$$

$$\therefore (x+4)(x-3) = 0$$

$$\therefore x+4 = 0, \text{ then } x = -4 \text{ or } x-3 = 0, \text{ then } x = 3$$

$$\therefore \text{The number is } -4 \text{ or } 3$$

7

$$\text{Let the number be } X \quad \therefore x^2 - 2x = 48$$

$$\therefore x^2 - 2x - 48 = 0 \quad \therefore (x+6)(x-8) = 0$$

$$\therefore x+6 = 0, \text{ then } x = -6 \text{ (refused)}$$

$$\text{or } x-8 = 0, \text{ then } x = 8$$

$$\therefore \text{The number is } 8$$

8

Let the first number be X

$$\therefore \text{The second number} = 20 - x$$

$$x(20-x) = 75 \quad \therefore 20x - x^2 - 75 = 0$$

$$\therefore x^2 - 20x + 75 = 0 \quad \therefore (x-15)(x-5) = 0$$

$$\therefore x-15 = 0, \text{ then } x = 15$$

$$\text{or } x-5 = 0, \text{ then } x = 5$$

$$\therefore \text{The numbers are } 5 \text{ and } 15$$

9

Let the first number be X

$$\therefore \text{The second number} = x + 5$$

$$\therefore x^2 + (x+5)^2 = 73$$

$$\therefore x^2 + x^2 + 10x + 25 = 73 = 0$$

$$\therefore 2x^2 + 10x - 48 = 0 \quad \therefore x^2 + 5x - 24 = 0$$

$$(x+8)(x-3) = 0$$

$$\therefore x+8 = 0, \text{ then } x = -8$$

$$\text{i.e. The two numbers are } -8 \text{ and } -3$$

$$\text{or } x-3 = 0 \text{ then } x = 3$$

$$\text{i.e. The two numbers are } 3 \text{ and } 8$$

10

Let the first number be X

$$\therefore \text{The second number} = X + 4$$

$$\therefore X(X + 4) = 45 \quad \therefore X^2 + 4X - 45 = 0$$

$$\therefore (X + 9)(X - 5) = 0$$

$$\therefore X + 9 = 0, \text{ then } X = -9$$

i.e. The two numbers are -9 and -5

$$\text{or } X - 5 = 0, \text{ then } X = 5$$

i.e. The two numbers are 5 and 9

11

Let the first number be X

$$\therefore \text{The second number} = X + 2$$

$$\therefore X^2 + (X + 2)^2 = 130$$

$$\therefore X^2 + X^2 + 4X + 4 - 130 = 0$$

$$\therefore 2X^2 + 4X - 126 = 0$$

$$\therefore X^2 + 2X - 63 = 0 \quad \therefore (X + 9)(X - 7) = 0$$

$$\therefore X + 9 = 0, \text{ then } X = -9$$

i.e. The two numbers are -9 and -7

$$\text{or } X - 7 = 0 \text{ then, } X = 7$$

i.e. The two numbers are 7 and 9

12

Let the numbers be $X, X + 1, X + 2$

$$\therefore X + X + 1 + X + 2 = (X + 1)^2$$

$$\therefore 3X + 3 = X^2 + 2X + 1 \quad \therefore X^2 - X - 2 = 0$$

$$\therefore (X - 2)(X + 1) = 0 \quad \therefore X - 2 = 0, \text{ then } X = 2$$

i.e. The three numbers are $2, 3$ and 4

$$\text{or } X + 1 = 0, \text{ then } X = -1$$

i.e. The three numbers are $-1, 0$ and 1

13

Let the first number be $7X$

$$\therefore \text{The second number is } 8X$$

$$\therefore (7X) \times (8X) - 9(8X) = 80$$

$$\therefore 56X^2 - 72X - 80 = 0$$

$$\therefore 7X^2 - 9X - 10 = 0 \quad (7X + 5)(X - 2) = 0$$

$$\therefore 7X + 5 = 0, \text{ then } X = -\frac{5}{7} \text{ (refused)}$$

$$\text{or } X - 2 = 0, \text{ then } X = 2$$

i.e. The two numbers are 14 and 16

14

Let the first number be X

$$\therefore 2X^2 + (-X) = 91 \quad \therefore 2X^2 - X - 91 = 0$$

$$\therefore (2X + 13)(X - 7) = 0 \quad \therefore 2X + 13 = 0$$

$$\text{, then } X = -\frac{13}{2} \text{ (refused) or } X - 7 = 0, \text{ then } X = 7$$

\therefore The number is 7

15

Let the number be X

$$\therefore X - \frac{1}{X} = \frac{5}{6} \text{ multiplying by } 6X$$

$$\therefore 6X^2 - 6 = 5X$$

$$\therefore 6X^2 - 5X - 6 = 0 \quad \therefore (2X - 3)(3X + 2) = 0$$

$$\therefore 2X - 3 = 0, \text{ then } X = \frac{3}{2} \text{ or } (3X + 2) = 0$$

$$\text{, then } X = -\frac{2}{3}$$

$$\therefore \text{The number is } \frac{3}{2} \text{ or } -\frac{2}{3}$$

16

Let the tens digit be X

$$\therefore \text{the units digit is } 2X \quad \therefore X(2X) - (X + 2X) = 9$$

$$\therefore 2X^2 - 3X - 9 = 0 \quad \therefore (2X + 3)(X - 3) = 0$$

$$\therefore 2X + 3 = 0, \text{ then } X = -\frac{3}{2} \text{ (refused)}$$

$$\text{or } X - 3 = 0, \text{ then } X = 3 \quad \therefore \text{The number is } 36$$

17

Let the age of Said now be X years

$$\therefore X^2 - 3(X - 4) = 192 \quad \therefore X^2 - 3X + 12 - 192 = 0$$

$$\therefore X^2 - 3X - 180 = 0 \quad \therefore (X - 15)(X + 12) = 0$$

$$\therefore X - 15 = 0, \text{ then } X = 15$$

$$\text{or } X + 12 = 0, \text{ then } X = -12 \text{ (refused)}$$

\therefore The age of Said now is 15 years.

18

Let the age of Hatem now be X years

$$\therefore \text{The age of Hanan now} = (X - 4) \text{ years}$$

$$\therefore X^2 + (X - 4)^2 = 26$$

$$\therefore X^2 + X^2 - 8X + 16 - 26 = 0$$

$$\therefore 2X^2 - 8X - 10 = 0 \quad \therefore X^2 - 4X - 5 = 0$$

$$\therefore (X - 5)(X + 1) = 0 \quad \therefore X - 5 = 0, \text{ then } X = 5$$

$$\text{or } X + 1 = 0, \text{ then } X = -1 \text{ (refused)}$$

\therefore The age of Hatem = 5 years and

The age of Hanan = one year.



19

Let the age of Anees now be X years
 \therefore the age of Kamal now = $(X + 3)$ years
 since 4 years
 The age of Anees = $(X - 4)$ years
 The age of Kamal = $(X + 3 - 4) = (X - 1)$ years.
 $\therefore (X - 4)(X - 1) = 18 \quad \therefore X^2 - 5X + 4 - 18 = 0$
 $\therefore X^2 - 5X - 14 = 0 \quad \therefore (X + 2)(X - 7) = 0$
 $\therefore X + 2 = 0$, then $X = -2$ (refused)
 or $X - 7 = 0$, then $X = 7$
 \therefore The age of Anees now is 7 years.
 The age of Kamal now is 10 years.

20

Let the width of the rectangle be X cm.
 \therefore The length of the rectangle is $(X + 4)$ cm.
 $\therefore X(X + 4) = 21 \quad \therefore X^2 + 4X - 21 = 0$
 $\therefore (X + 7)(X - 3) = 0$
 $\therefore X + 7 = 0$, then $X = -7$ (refused)
 or $X - 3 = 0$, then $X = 3$
 \therefore The width = 3 cm. and the length = 7 cm.

21

Let the width of the rectangle be X cm.
 The length of the rectangle = $(X + 7.5)$ cm.
 $\therefore X(X + 7.5) = 46 \quad \therefore X^2 + 7.5X - 46 = 0$
 $\therefore 2X^2 + 15X - 92 = 0 \quad \therefore (2X + 23)(X - 4) = 0$
 $\therefore 2X + 23 = 0$, then $X = -\frac{23}{2}$ (refused)
 or $X - 4 = 0$, then $X = 4$
 \therefore The width = 4 cm. The length = 11.5 cm.
 The perimeter = $2(4 + 11.5) = 31$ cm.

22

Let the width of the rectangle be X cm.
 \therefore The length of the rectangle is $(X + 5)$ cm.
 The area of the rectangle = $X(X + 5)$ cm²
 The side length of the square = $(3X)$ cm.
 The area of the square = $9X^2$ cm²
 $9X^2 - X(X + 5) = 57$
 $\therefore 9X^2 - X^2 - 5X - 57 = 0$
 $\therefore 8X^2 - 5X - 57 = 0$
 $(X - 3)(8X + 19) = 0 \quad \therefore X - 3 = 0$

, then $X = 3$ or $8X + 19 = 0$
 \therefore then $X = -\frac{19}{8}$ (refused)
 \therefore The width of the rectangle = 3 cm.
 and the length = 8 cm.
 and the side length of the square = 9 cm.

23

$m(\angle BCD) + m(\angle ACD) = 180^\circ$
 $\therefore X^2 + 8X = 180^\circ \quad \therefore X^2 + 8X - 180^\circ = 0$
 $\therefore (X - 10^\circ)(X + 18^\circ) = 0 \quad \therefore X - 10^\circ = 0$, then $X = 10^\circ$
 or $X + 18^\circ = 0$, then $X = -18^\circ$ (refused)

24

$\therefore m(\angle A) + m(\angle B) + m(\angle C) = 180^\circ$
 $\therefore X^2 + 61^\circ + 110^\circ - 11X + 90^\circ - 7X = 180^\circ$
 $\therefore X^2 - 18X + 261^\circ - 180^\circ = 0$
 $\therefore X^2 - 18X + 81^\circ = 0 \quad \therefore (X - 9^\circ)^2 = 0 \quad \therefore X = 9^\circ$
 $\therefore m(\angle A) = 142^\circ$, $m(\angle B) = 11^\circ$ and $m(\angle C) = 27^\circ$

25

Let the length of one side of the right angle be X cm.
 \therefore The length of the other side = $(X - 2)$ cm.
 $\frac{1}{2}X(X - 2) = 24$ multiplying by 2
 $\therefore X(X - 2) = 48 \quad \therefore X^2 - 2X - 48 = 0$
 $(X - 8)(X + 6) = 0 \quad \therefore X - 8 = 0$, then $X = 8$
 or $X + 6 = 0$, then $X = -6$ (refused)
 \therefore The two lengths of the sides of the right angle are
 8 cm. and 6 cm.

26

\therefore The area of the triangle = 24 cm²
 $\therefore \frac{1}{2}(5X + 3)(X + 5) = 24$
 $\therefore (5X + 3)(X + 5) = 48$
 $\therefore 5X^2 + 28X + 15 - 48 = 0$
 $5X^2 + 28X - 33 = 0 \quad \therefore (5X + 33)(X - 1) = 0$
 $\therefore 5X + 33 = 0$, then $X = -\frac{33}{5}$ (refused)
 or $X - 1 = 0$, then $X = 1$
 \therefore The lengths of the two sides of the right angle are
 8 and 6 cm.
 \therefore The length of the hypotenuse = 10 cm.
 The perimeter of the triangle = $8 + 6 + 10 = 24$ cm.

27

- ∴ The triangle is right angled
- ∴ The hypotenuse = $(2X + 1)$
- ∴ $(2X)^2 + (X - 11)^2 = (2X + 1)^2$
- ∴ $4X^2 + X^2 - 22X + 121 = 4X^2 + 4X + 1$
- ∴ $X^2 - 26X + 120 = 0$ ∴ $(X - 20)(X - 6) = 0$
- ∴ $X - 20 = 0$, then $X = 20$
or $X - 6 = 0$ ∴ $X = 6$ (refused)
- ∴ The lengths of the sides of the triangle are 40 cm, 41 cm, and 9 cm.
- ∴ The perimeter of the triangle = $40 + 41 + 9 = 90$ cm.
The area of the triangle = $\frac{1}{2} \times 40 \times 9 = 180$ cm².

28

- Let the width of the rectangle be X
- ∴ The length of the rectangle = $2X$
 - ∴ The area = $2X^2$
 - ∴ $(2X + 1)(X - 1) = 2X^2 - 7$
 - ∴ $2X^2 - X - 1 = 2X^2 - 7$
 - ∴ $-X + 6 = 0$ ∴ $X = 6$
 - ∴ The width of the rectangle = 6 cm.
The length of the rectangle = 12 cm.

29

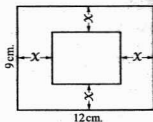
- ∴ $\triangle MCD \sim \triangle MAB$
- ∴ $\frac{MC}{MA} = \frac{CD}{AB} = \frac{MD}{MB}$ ∴ $\frac{3}{MA} = \frac{MD}{4}$
- ∴ $MD = AD - MA = 7 - MA$
- ∴ $\frac{3}{MA} = \frac{7 - MA}{4}$ ∴ $12 = 7MA - (MA)^2$
- ∴ $(MA)^2 - 7MA + 12 = 0$ ∴ $(MA - 4)(MA - 3) = 0$
- ∴ $MA - 4 = 0$, then $MA = 4$
or $MA - 3 = 0$, then $MA = 3$
(refused because $MA > MC$)

30

- ∴ $X \times 10 + X(13 - X) = 60$
- ∴ $10X + 13X - X^2 - 60 = 0$
- ∴ $X^2 - 23X + 60 = 0$ $(X - 3)(X - 20) = 0$
- ∴ $X - 3 = 0$, then $X = 3$
or $X - 20 = 0$, then $X = 20$ (refused)
(where $X < 13$)

31

Let the width of the tape be X metre as shown in the figure



- ∴ the width of the carpet = $(9 - 2X)$ metre.
- The length of the carpet = $(12 - 2X)$ metre.
- The area of the carpet = $(12 - 2X)(9 - 2X)$
= $\frac{1}{2}$ the area of the room
- ∴ $(12 - 2X)(9 - 2X) = \frac{1}{2} \times 9 \times 12$
- ∴ $108 - 42X + 4X^2 = 54$ ∴ $4X^2 - 42X + 54 = 0$
- ∴ $2X^2 - 21X + 27 = 0$ ∴ $(2X - 3)(X - 9) = 0$
- ∴ $2X - 3 = 0$, then $X = \frac{3}{2}$ or $X - 9 = 0$, then $X = 9$
(refused) because it equals the width of the room.
- ∴ The width of the tape = 1.5 metre.

Answers of the general exercises on unit one

Completion questions

- | | |
|-------------------------------------|---------------------|
| 1 $2a^2, 6$ | 2 $5, 2x^2, 7x$ |
| 3 $x, 7xy, 6y^2$ | 4 $b, a, 7ab$ |
| 5 $7x, 5y, 70xy$ | 6 $9, 7x, 7x$ |
| 7 $8, 2, x^2, 2x$ | 8 $1, 2$ |
| 9 1 | 10 $2a, 2ab, b^2$ |
| 11 $7y^2, 11x, 7y$ | 12 $12xy, 9y^2, 2x$ |
| 13 $3, 25a^2, 9$ | 14 x, y |
| 15 $2, x + 4$ | 16 $14, -14, 2, -2$ |
| 17 $-14, -2$ | 18 1 |
| 19 ± 8 | 20 19 |
| 21 -42 | 22 $x + 5$ |
| 23 $x^2 - 5x + 25$ | 24 3 |
| 25 $(y - z)(x + t)$ | 26 \emptyset |
| 27 $\{1, -1\}$ | 28 1 |
| 29 $\frac{1}{4}x^2$ cm ² | 30 $(x + 5)$ years |

Multiple choice questions

- | | | | | | |
|------|------|------|------|------|------|
| 1 c | 2 b | 3 d | 4 a | 5 a | 6 b |
| 7 a | 8 b | 9 c | 10 b | 11 d | 12 b |
| 13 a | 14 b | 15 b | 16 c | 17 c | 18 c |
| 19 b | 20 c | 21 c | 22 d | 23 d | 24 d |
| 25 c | 26 c | 27 a | 28 c | 29 c | 30 c |

Answers of Unit Two

Answers of Exercise 10

1

1 $\frac{1}{3^2} = \frac{1}{9}$

2 4

3 $\left(\frac{3}{2}\right)^2 = \frac{9}{4}$

4 $5^2 = 25$

5 $\left(\frac{1}{\sqrt{3}}\right)^2 = \frac{1}{3}$

6 $\left(-\frac{1}{\sqrt{3}}\right)^2 = \frac{1}{3}$

7 $\left(\frac{1}{\sqrt{5}}\right)^3 = \frac{1}{5}$

8 $(\sqrt{5})^2 = 5$

9 $\left(\frac{1}{100}\right)^{-2} = (100)^2 = 10000$

10 $\left(\frac{2}{10}\right)^{-2} = \left(\frac{1}{5}\right)^{-2} = 5^2 = 25$

11 $\left(\frac{1}{\sqrt{2}}\right)^3 = \frac{1}{2\sqrt{2}} \times \frac{\sqrt{2}}{\sqrt{2}} = \frac{\sqrt{2}}{4}$

12 $\left(\frac{3}{\sqrt{3}}\right)^5 = \left(\frac{\sqrt{3} \times \sqrt{3}}{\sqrt{3}}\right)^5 = (\sqrt{3})^5 = 9\sqrt{3}$

2

1 $x^{\text{zero}} = 1$

2 $x^{-4+3} = x^{-1} = \frac{1}{x}$

3 $x^{-6} \times x^6 = x^{\text{zero}} = 1$

4 $x^{2-3+4-1} = x^2$

5 $x^{-6-2+3+4} = x^{-1} = \frac{1}{x}$

3

1 $(\sqrt{2})^6 = 2^3 = 8$

2 $(\sqrt{7})^{5-2-1} = (\sqrt{7})^2 = 7$

3 $(\sqrt{2})^4 \times (\sqrt{2})^2 \times (\sqrt{2})^{-2} = (\sqrt{2})^{4+2-2}$
 $= (\sqrt{2})^4 = 4$

4 $-(\sqrt{3}) \times (\sqrt{3})^3 \times (\sqrt{3})^4 = -(\sqrt{3})^8 = -3^4 = -81$

5 $(\sqrt{5})^{-4+6} = (\sqrt{5})^2 = 5$

6 $(-\sqrt{5})^4 = 5^2 = 25$

7 $\left(\frac{1}{\sqrt{2}}\right)^6 = \frac{1}{(\sqrt{2})^6} = \frac{1}{2^3} = \frac{1}{8}$

8 $(\sqrt{2})^6 \times (-\sqrt{2})^4 = 2^3 \times 2^2 = 2^5 = 32$

9 $\left(\frac{1}{\sqrt{3}}\right)^4 \times (\sqrt{2})^4 = \frac{1}{9} \times 4 = \frac{4}{9}$

10 $(-5)^6 \times \left(-\frac{1}{\sqrt{5}}\right)^4 = 5^6 \times \left(\frac{1}{\sqrt{5}}\right)^4 = 5^6 \times \frac{1}{5^2}$
 $= 5^{6-2} = 5^4 = 625$

4

1 $(\sqrt{7})^{-4-3+9} = (\sqrt{7})^2 = 7$

2 $(\sqrt{3})^{7+8-6} = (\sqrt{3})^9 = 81\sqrt{3}$

3 $(\sqrt{3})^{8+6-12} = (\sqrt{3})^2 = 3$

4 $-(\sqrt{5})^{10+5-11} = -(\sqrt{5})^4 = -5^2 = -25$

5 $\frac{2^{-2} \times (\sqrt{7})^2 \times 2^{-2}}{(\sqrt{7})^2} = 2^{-4} = \frac{1}{16}$

6 $\frac{3^4 \times (\sqrt{2})^4 \times (\sqrt{2})^2}{2^2 \times (\sqrt{3})^2} = \frac{3^4 \times (\sqrt{2})^6}{2^2 \times 3} = \frac{3^4 \times 2^3}{2^2 \times 3}$
 $= 3^{4-1} \times 2^{3-2} = 3^3 \times 2 = 54$

7 $\frac{(\sqrt{3})^{-4} \times (\sqrt{2})^3 \times 3^5 \times (\sqrt{3})^5}{3^5 \times (\sqrt{2})^5 \times \sqrt{3}}$
 $= (\sqrt{3})^{-4+5-1} \times (\sqrt{2})^{3-5}$
 $= (\sqrt{3})^{\text{zero}} \times (\sqrt{2})^{-2} = \frac{1}{2}$

8 $\frac{(\sqrt{3})^5 \times (\sqrt{3})^4}{(\sqrt{3})^3 \times (\sqrt{3})^6} = (\sqrt{3})^{5+4-3-6} = (\sqrt{3})^{\text{zero}} = 1$

9 $\frac{(\sqrt{2})^5 \times 2^6 \times 5^6}{(\sqrt{2})^3 \times 2^3 \times 5^5} = (\sqrt{2})^{5-3} \times 2^{6-3} \times (5)^{6-5}$
 $= (\sqrt{2})^2 \times 2^3 \times 5 = 2 \times 2^3 \times 5 = 2^4 \times 5$
 $= 16 \times 5 = 80$

10 $\frac{3^{-2} \times 5^{-2} \times (\sqrt{5})^3 \times 3^3}{3^2 \times (\sqrt{5})^{-3}} = 3^{-2+3-2} \times 5^{-2} \times (\sqrt{5})^{3+3}$
 $= 3^{-1} \times 5^{-2} \times (\sqrt{5})^6 = \frac{1}{3} \times \frac{1}{5^2} \times 5^3 = \frac{1}{3} \times 5^{3-2} = \frac{5}{3}$

11 $\frac{(\sqrt{5})^6 \times (\sqrt{2})^8}{(\sqrt{5} \times 2)^4 \times (\sqrt{5})^4 \times (\sqrt{2})^4}$
 $= (\sqrt{5})^{6-4} \times (\sqrt{2})^{8-4} = (\sqrt{5})^2 \times (\sqrt{2})^4 = 5 \times 4 = 20$

12 $\frac{(10)^2 \times (10)^{-7}}{(10)^{-2} \times (10)^{-3}} = (10)^{2-7+2+3} = (10)^{\text{zero}} = 1$

5

1 $\frac{2^4 \times (\sqrt{3})^4}{(\sqrt{2})^4} = \frac{2^4 \times 3^2}{2^2} = 2^2 \times 3^2 = 36$

Algebra



$$2 \quad \frac{3^4 \times (\sqrt{2})^4}{2^4 \times (\sqrt{3})^4} = \frac{3^4 \times 2^2}{2^4 \times 3^2} = \frac{3^2}{2^2} = \frac{9}{4}$$

$$3 \quad \frac{(-5)^4 \times (\sqrt{2})^4}{2^4 \times (\sqrt{5})^4} = \frac{5^4 \times 2^2}{2^4 \times 5^2} = \frac{5^2}{2^2} = \frac{25}{4}$$

$$4 \quad \frac{(\sqrt{3})^2}{(\sqrt{2})^2} \times \frac{(\sqrt{2})^4}{(\sqrt{3})^4} = \frac{(\sqrt{2})^2}{(\sqrt{3})^2} = \frac{2}{3}$$

6

$$1 \quad \frac{3^{2x} \times 3^{x+2}}{3^{3x}} = 3^{2x+x+2-3x} = 3^2 = 9$$

$$2 \quad \frac{2^{2x} \times 3^{x-1}}{2^{2x} \times 3^x} = 3^{x-1-x} = 3^{-1} = \frac{1}{3}$$

$$3 \quad \frac{2^x \times 2^{2x+2}}{2^{3x}} = 2^{x+2x+2-3x} = 2^2 = 4$$

$$4 \quad \frac{(2^2 \times 3^2)^n \times 5^{2n}}{(3 \times 2 \times 5)^{2n}} = \frac{2^{2n} \times 3^{2n} \times 5^{2n}}{3^{2n} \times 2^{2n} \times 5^{2n}} = 1$$

$$5 \quad \frac{2^x \times (7^2)^{x-1}}{(2 \times 7^2)^x} = \frac{2^x \times 7^{2x-2}}{2^x \times 7^{2x}} = 7^{2x-2-2x} = 7^{-2} = \frac{1}{49}$$

$$6 \quad \frac{2^{2x+4} \times 3^{6+2x}}{2^{2x+3} \times 3^{2x+3}} = 2^{2x+4-2x-3} \times 3^{6+2x-2x-3} = 2^1 \times 3^3 = 54$$

$$7 \quad \frac{2^{2n} \times 2^{2n} \times 3^{2n}}{2^{4n} \times 3^{2n}} = 2^{2n+2n-4n} = 2^0 = 1$$

$$8 \quad \frac{3^4 \times 2^{2x} \times 3^{2x}}{3^6 \times 2^x \times 3^{2x}} = 3^{4+2x-6x+3} = 3^3 = 27$$

$$9 \quad \frac{2^p \times 3^{2n+2} \times 2^l}{2^p \times 3 \times 2^p \times 3^{2n}} = 3^{2n+2-1-2n} = 3$$

$$10 \quad \frac{3 \times (2 \times 3^2)^{x+1} \times 2^x}{2 \times (2^2 \times 3^2)^x} = \frac{3 \times 2^{x+1} \times 3^{2x+2} \times 2^x}{2 \times 2^{2x} \times 3^{2x}} = 3^{1+2x+2-2x} \times 2^{x+1+x-1-2x} = 3^3 \times 2^0 = 27$$

$$11 \quad \frac{2^n \times 3^n \times (2^2)^{n+1/2}}{(2^3 \times 3)^n} = \frac{2^n \times 2^{2n+1} \times 2^{n+1}}{2^{3n} \times 3^n} = 2^{n+2n+1-3n} = 2$$

$$12 \quad \frac{2^{3n-3} \times 2^{-5n}}{2^5 \times 2^{-2n}} = 2^{3n-3-5n-5+2n} = 2^{-8} = \frac{1}{2^8} = \frac{1}{256}$$

$$13 \quad \frac{(\sqrt{3})^{n+2} \times 3^{n+1} \times 5^{n+1}}{(\sqrt{3})^n \times 3^n \times 5^{n+2}} = (\sqrt{3})^{n+2-n} \times 3^{n+1-n} \times 5^{n+1-n-2} = (\sqrt{3})^2 \times 3 \times 5^{-1} = \frac{9}{5}$$

$$14 \quad \frac{2^{2x+2} \times 3^{4-2x}}{2^{2x} \times 3^{2x}} = 2^{2x+2-2x} \times 3^{4-2x-2x} = 2^2 \times 3^{4-4x} \text{ at } x=1 \therefore 2^2 \times 3^{4-4} = 2^2 \times 3^0 = 4$$

$$15 \quad \frac{3^{2x-2} \times 2^{3x}}{2^{3x} \times 3^{2x}} = 3^{2x-2-x} \times 2^{3x-3x} = 3^{x-2} \times 2^0 = 3^{x-2} \text{ when } x=2$$

$$\therefore 3^{2-2} = 3^0 = 1$$

$$16 \quad 3^{2x-2} \times 2^{3x+2} \times 2^{-3x} = 2^{2x}$$

$$\therefore 2^x = 5 \quad \therefore 2^{2x} = (2^x)^2 = (5)^2 = 25$$

7

$$1 \quad \text{The left side} = \frac{2 \times 2^{1-x} \times 3^{2x-1} \times 2^{4x-2}}{2^{3x} \times 3^{2x}} = 2^{1+1-x+4x-2-3x} \times 3^{2x-1-2x} = 2^0 \times 3^{-1} = \frac{1}{3} = \text{The right side.}$$

$$2 \quad \text{The left side} = \frac{3^{3x-3} \times 2^{3x}}{2^{2x} \times (\sqrt{2})^{2x} \times 3^{2x} \times (\sqrt{3})^{2x}} = \frac{3^{3x-3} \times 2^{3x}}{2^{2x} \times 2^x \times 3^{2x} \times 3^x} = 3^{3x-3-2x-x} \times 2^{3x-2x-x-x} = 3^{-3} = \frac{1}{3^3} = \frac{1}{27} = \text{The right side.}$$

8

$$\frac{2^{3x} \times 3^{2x}}{2^x \times 3^{2x}} = 64 \quad \therefore 2^{3x-x} = 64 \quad \therefore 2^{2x} = 64$$

$$\therefore 4^x = 64 \quad \therefore 4^{-x} = \frac{1}{4^x} \quad \therefore 4^{-x} = \frac{1}{64}$$

9

$$1 \quad a^4 - b^4 = (\sqrt{3})^4 - (\sqrt{2})^4 = 3^2 - 2^2 = 9 - 4 = 5$$

$$2 \quad \frac{a^4}{b^4} = \frac{(\sqrt{3})^4}{(\sqrt{2})^4} = \frac{3^2}{2^2} = \frac{9}{4}$$

10

$$(x^2 - y^2)^3 = ((2\sqrt{2})^2 - 3^2)^3 = (2^2 \times (\sqrt{2})^2 - 3^2)^3 = (4 \times 2 - 9)^3 = (8 - 9)^3 = -1$$

11

$$2 \quad (ab)^2 \left(\frac{a}{b}\right)^2 = 2 \left(\frac{3}{\sqrt{2}} \times \frac{\sqrt{2}}{\sqrt{3}}\right)^2 \times \left(\frac{3}{\sqrt{2}} \times \frac{\sqrt{3}}{\sqrt{2}}\right)^2 = 2 \left(\frac{3}{\sqrt{3}}\right)^2 \times \left(\frac{3\sqrt{3}}{2}\right)^2 = 2 \times \frac{3}{3} \times \frac{27}{4} = \frac{81}{2}$$

12

$$\begin{aligned}x^2 + (Xzy)^2 &= \left(\frac{\sqrt{3}}{2}\right)^2 + \left(\frac{\sqrt{3}}{2} \times \frac{\sqrt{2}}{2} \times \frac{1}{\sqrt{3}}\right)^2 \\ &= \frac{3}{4} + \left(\frac{\sqrt{2}}{4}\right)^2 = \frac{3}{4} + \frac{1}{8} = \frac{7}{8}\end{aligned}$$

13

$$\begin{aligned}\therefore \frac{a}{b} &= \frac{3\sqrt{2}}{2} \times \frac{\sqrt{2}}{\sqrt{3}} = \frac{6}{2\sqrt{3}} = \frac{3}{\sqrt{3}} = \sqrt{3} \\ \therefore \left(\frac{a}{b}\right)^2 - 3\left(\frac{b}{a}\right)^2 &= (\sqrt{3})^2 - 3 \times \left(\frac{1}{\sqrt{3}}\right)^2 = 3 - 1 = 2\end{aligned}$$

14

$$\begin{aligned}1 \quad 3(x+y)^4(x-y)^4 &= 3\left((2+\sqrt{3})^4(2-\sqrt{3})^4\right) \\ &= 3\left((2+\sqrt{3})(2-\sqrt{3})\right)^4 \\ &= 3(4-3)^4 = 3\end{aligned}$$

$$\begin{aligned}2 \quad \left(\frac{x-y}{x+y}\right)^2 &= \left(\frac{2-\sqrt{3}}{2+\sqrt{3}}\right)^2 = \left(\frac{2-\sqrt{3}}{2+\sqrt{3}} \times \frac{2-\sqrt{3}}{2-\sqrt{3}}\right)^2 \\ &= \left(\frac{4-4\sqrt{3}+3}{4-3}\right)^2 = (7-4\sqrt{3})^2 \\ &= 49 - 56\sqrt{3} + 48 = 97 - 56\sqrt{3}\end{aligned}$$

15

$$\begin{aligned}7a^6 + (1-b)^{-3} &= 7 \times \left(\frac{1}{\sqrt{2}}\right)^6 + (1+1)^{-3} \\ &= 7 \times \frac{1}{2^3} + 2^{-3} = 7 \times \frac{1}{2^3} + \frac{1}{2^3} = \frac{7}{8} + \frac{1}{8} = \frac{8}{8} = 1\end{aligned}$$

16

$$1 \quad x^{-2}y^{-4} = \frac{1}{x^2y^4} = \frac{1}{3^2 \times (\sqrt{2})^4} = \frac{1}{9 \times 4} = \frac{1}{36}$$

$$2 \quad (x^{-2} \times y^4)^{-2} = x^4y^{-8} = \frac{x^4}{y^8} = \frac{3^4}{(\sqrt{2})^8} = \frac{81}{16}$$

$$3 \quad \left(\frac{x}{y}\right)^{-3} = \left(\frac{y}{x}\right)^3 = \frac{y^3}{x^3} = \frac{(\sqrt{2})^3}{3^3} = \frac{2\sqrt{2}}{27}$$

17

1 d 2 c 3 d 4 c 5 c

6 a 7 b 8 c 9 b 10 c

11 c 12 a 13 c 14 a 15 c

16 d 17 c 18 b 19 b 20 a

21 d 22 a 23 c

18

1 3 2 1 3 zero 4 zero 5 3

6 $\frac{1}{4}$ 7 $(-\sqrt{2})^{24}$ 8 3 9 $\mathbb{R} - \{5\}$ 10 1

11 1 12 $\frac{36}{25}$ 13 125 14 35 15 $\frac{3}{7}$

19

$$\begin{aligned}\text{The expression} &= \frac{1}{2}(2X^4y^2)^2 \times (Xy)^2 \\ &= \frac{1}{2} \times 4X^8y^4 \times X^2y^2 \\ &= 2 \times X^{8+2} \times y^{4+2} \\ &= (2X^{10}y^6)\text{cm}^2\end{aligned}$$

20

$$\begin{aligned}\text{The number of seconds} &= \frac{2.7 \times 10^{11}}{5.4 \times 10^9} \\ &= 0.5 \times 10^2 = 50 \text{ seconds.}\end{aligned}$$

21

1 $\frac{1}{4}$ 2 $\sqrt{2}$ 3 16 4 2025

22

1 c 2 c 3 c 4 b 5 c

Answers of Exercise 11

1

1 $\because 5^n = 5^2 \quad \therefore n = 2$

2 $\because 2^{-n} = 2^5 \quad \therefore -n = 5 \quad \therefore n = -5$

3 $\because 2^{n-1} = 2^5 \quad \therefore n-1 = 5 \quad \therefore n = 6$

4 $\because 3^{n-2} = 3^4 \quad \therefore n-2 = 4 \quad \therefore n = 6$

5 $\because 3^{n-2} = 3^{\text{zero}} \quad \therefore n-2 = \text{zero} \quad \therefore n = 2$

6 $\because 2^{n-3} = 2^{-2} \quad \therefore n-3 = -2 \quad \therefore n = 1$

7 $\because 3^{n-2} = 3^{-2} \quad \therefore n-2 = -2 \quad \therefore n = \text{zero}$

8 $\because (\sqrt{3})^{n-1} = (\sqrt{3})^4 \quad \therefore n-1 = 4 \quad \therefore n = 5$

9 $\because \left(\frac{2}{5}\right)^{2n-1} = \left(\frac{2}{5}\right)^3 \quad \therefore 2n-1 = 3$

$\therefore 2n = 4 \quad \therefore n = 2$

10 $\because \left(\frac{3}{5}\right)^{n+2} = \left(\frac{5}{3}\right)^3 \quad \therefore \left(\frac{3}{5}\right)^{n+2} = \left(\frac{3}{5}\right)^{-3}$

$\therefore n+2 = -3 \quad \therefore n = -5$

11 $\because \left(\frac{2}{3}\right)^{n-4} = \frac{9}{4} \quad \therefore \left(\frac{2}{3}\right)^{n-4} = \left(\frac{3}{2}\right)^2$

$\therefore \left(\frac{2}{3}\right)^{n-4} = \left(\frac{2}{3}\right)^{-2} \quad \therefore n-4 = -2 \quad \therefore n = 2$

Algebra



$$12 \therefore \left(\frac{2}{3}\right)^{n+5} = \left(\frac{27}{8}\right)^{-2}$$

$$\therefore \left(\frac{2}{3}\right)^{n+5} = \left(\left(\frac{3}{2}\right)^3\right)^{-2} = \left(\frac{3}{2}\right)^{-6}$$

$$\therefore \left(\frac{2}{3}\right)^{n+5} = \left(\frac{2}{3}\right)^6 \quad \therefore n+5=6 \quad \therefore n=1$$

$$13 \therefore 5^{2n-4} = 7^{2n-4} \quad \therefore 2n-4=0$$

$$\therefore 2n=4 \quad \therefore n=2$$

$$14 \text{ either } n=3 \text{ or } n-4=0 \quad \therefore n=4$$

$$15 \therefore 3^2 \times 3^{n-4} = 1 \quad \therefore 3^{n-2} = 1$$

$$\therefore n-2=0 \quad \therefore n=2$$

$$16 \therefore 2 \times 2^{2n+6} = \frac{1}{32} \quad \therefore 2^{2n+7} = 2^{-5}$$

$$\therefore 2n+7=-5 \quad \therefore 2n=-12 \quad \therefore n=-6$$

$$17 \therefore (\sqrt{2})^6 \times (\sqrt{2})^{n-3} = 1 \quad \therefore (\sqrt{2})^{n+3} = 1$$

$$\therefore n+3=0 \quad \therefore n=-3$$

$$18 \therefore \frac{1}{(\sqrt{3})^6} \times (\sqrt{3})^{n+2} = 1$$

$$\therefore (\sqrt{3})^{-6} \times (\sqrt{3})^{n+2} = 1 \quad \therefore (\sqrt{3})^{n-4} = 1$$

$$\therefore n-4=0 \quad \therefore n=4$$

2

$$1 \therefore x^2 - 4 = 0 \quad \therefore x^2 = 4$$

$$\therefore x = \pm 2 \quad \therefore \text{The S.S.} = \{2, -2\}$$

$$2 \therefore 2x^2 - 9 = 1 \quad \therefore x^2 - 9 = 0$$

$$\therefore x^2 = 9 \quad \therefore x = \pm 3$$

$$\therefore \text{The S.S.} = \{-3, 3\}$$

$$3 \therefore 2x^2 - x = 4 \quad \therefore 2x^2 - x = 2^2$$

$$\therefore x^2 - x = 2 \quad \therefore x^2 - x - 2 = 0$$

$$\therefore (x-2)(x+1) = 0 \quad \therefore x-2=0$$

$$\therefore x=2 \quad \text{or } x+1=0$$

$$\therefore x=-1 \quad \therefore \text{The S.S.} = \{-1, 2\}$$

$$4 \therefore 5^{|x|} = 5^3 \quad \therefore |x|=3 \quad \therefore x = \pm 3$$

$$\therefore \text{The S.S.} = \{3, -3\}$$

$$5 \therefore 2^5 x - 15 = 2^6 x + 3 \quad \therefore 5x - 15 = 6x + 3$$

$$\therefore 5x - 6x = 15 + 3 \quad \therefore -x = 18$$

$$\therefore x = -18 \quad \therefore \text{The S.S.} = \{-18\}$$

$$6 \therefore (\sqrt{3})^{2x-6} = (\sqrt{3})^{x+5} \quad \therefore 2x-6 = x+5$$

$$\therefore x = 11 \quad \therefore \text{The S.S.} = \{11\}$$

$$7 \therefore 3^{n-1} \times 2^{-(n-1)} = \left(\frac{3}{2}\right)^3$$

$$\therefore \frac{3^{n-1}}{2^{n-1}} = \left(\frac{3}{2}\right)^3 \quad \therefore \left(\frac{3}{2}\right)^{n-1} = \left(\frac{3}{2}\right)^3$$

$$\therefore n-1=3 \quad \therefore n=4 \quad \therefore \text{The S.S.} = \{4\}$$

$$8 \therefore \frac{3^{x-1}}{5^{x-1}} = \frac{9}{25} \quad \therefore \left(\frac{3}{5}\right)^{x-1} = \left(\frac{3}{5}\right)^2$$

$$\therefore x-1=2 \quad \therefore x=3 \quad \therefore \text{The S.S.} = \{3\}$$

3

$$1 \therefore \frac{2^x \times 3^{2n+2}}{2^x \times 3^{2n}} = 3^n \quad \therefore 3^{2n+2-2n} = 3^n$$

$$\therefore 3^2 = 3^n \quad \therefore n=2$$

$$2 \therefore \frac{6^{2n-3}}{(2 \times 3)^{n-1}} = 6 \quad \therefore \frac{6^{2n-3}}{6^{n-1}} = 6$$

$$\therefore 6^{2n-3-n+1} = 6 \quad \therefore 6^{n-2} = 6^1 \quad \therefore n=3$$

$$3 \therefore \frac{3^{n-1} \times 2^{2n-2}}{2^{n-1} \times 3^{n-1}} = 1 \quad \therefore 2^{2n-2-n+1} = 2^0$$

$$\therefore n-1=0 \quad \therefore n=1$$

$$4 \therefore \frac{3^n \times 2^{3n}}{3^{n+1} \times 2^{2n+2}} = \frac{1}{3}$$

$$\therefore 3^{n-n-1} \times 2^{3n-2n-2} = 3^{-1}$$

$$\therefore 3^{-1} \times 2^{n-2} = 3^{-1} \quad \therefore 2^{n-2} = 1 \quad \therefore 2^{n-2} = 2^0$$

$$\therefore n-2=0 \quad \therefore n=2$$

$$5 \therefore \frac{2^{4n} \times 3^{2n}}{3^{2n} \times 2^{2n}} = \frac{1}{4} \quad \therefore 2^{2n} = 2^{-4} \quad \therefore 2n = -4$$

$$\therefore n = -2$$

$$6 \therefore \frac{2^{2n-2} \times 2^{n+3}}{2^{3n}} = 2n^2 \quad \therefore 2^{2n-2+n+3-3n} = 2n^2$$

$$\therefore 2 = 2n^2 \quad \therefore n^2 = 1 \quad \therefore n = \pm 1$$

$$7 \therefore \frac{2^{2n} \times 7^{2n} \times 2^{2n+2}}{2^2 \times 7^n \times 2^{4n}} = 7^2$$

$$\therefore 2^{2n+2n+2-2-4n} \times 7^{2n-n} = 7^2$$

$$\therefore 2^0 \times 7^n = 7^2 \quad \therefore 7^n = 7^2 \quad \therefore n=2$$

4

$$1 \therefore (x-4)^5 = 2^5 \quad \therefore x-4=2 \quad \therefore x=6$$

$$\therefore \text{The S.S.} = \{6\}$$

$$2 \therefore \frac{1}{(x+9)^4} = \left(\frac{1}{10}\right)^4 \quad \therefore (x+9)^{-4} = (10)^{-4}$$

$$\therefore x+9 = \pm 10 \quad \therefore x = 1 \text{ or } x = -19$$

$$\therefore \text{The S.S.} = \{1, -19\}$$

$$3 \therefore (x^2 - x)^5 = 2^5 \quad \therefore x^2 - x = 2$$

$$\therefore x^2 - x - 2 = 0 \quad \therefore (x+1)(x-2) = 0$$

$$\therefore \text{either } x+1=0 \quad \therefore x = -1 \text{ or } x-2=0$$

$$\therefore x = 2 \quad \therefore \text{The S.S.} = \{-1, 2\}$$

4 $\therefore x^2 - x = 0$ $\therefore x(x-1) = 0$

$\therefore x = 0$ or $x - 1 = 0$ $\therefore x = 1$

\therefore The S.S. = $\{0, 1\}$

5 $\therefore 5^{x^2-5x} = \frac{16}{10000} = \left(\frac{2}{10}\right)^4$

$\therefore 5^{x^2-5x} = \left(\frac{10}{2}\right)^{-4} = 5^{-4}$

$\therefore x^2 - 5x = -4$ $\therefore x^2 - 5x + 4 = 0$

$\therefore (x-4)(x-1) = 0$ $\therefore x - 4 = 0$

$\therefore x = 4$ or $x - 1 = 0$

$\therefore x = 1$ \therefore The S.S. = $\{1, 4\}$

6 $\therefore 5^{x^2} = 5^{2x+8}$ $\therefore x^2 = 2x + 8$

$\therefore x^2 - 2x - 8 = 0$

$\therefore (x-4)(x+2) = 0$ either $x - 4 = 0$ then $x = 4$
or $x + 2 = 0$ then $x = -2$ \therefore The S.S. = $\{4, -2\}$

7 $\therefore 3^{2x^2-2} = \frac{1}{3^{3x}}$ $\therefore 3^{2x^2-2} = 3^{-3x}$

$\therefore 2x^2 - 2 = -3x$ $\therefore 2x^2 + 3x - 2 = 0$

$\therefore (2x-1)(x+2) = 0$ either $2x - 1 = 0$

$\therefore x = \frac{1}{2}$ or $x + 2 = 0$ $\therefore x = -2$

\therefore The S.S. = $\{-2, \frac{1}{2}\}$

5

$\therefore \frac{2^{2n} \times 3^{2n} \times 2^{2n}}{2^{4n} \times 3^{2n+4}} = 3^{-2x}$

$\therefore 2^{2n+2n-4n} \times 3^{2n+2n-4} = 3^{-2x}$

$\therefore 2^0 \times 3^{-4} = 3^{-2x}$ $\therefore 3^{-4} = 3^{-2x}$

$\therefore -2x = -4$ $\therefore x = 2$

6

$\therefore \frac{3^{4x} \times 2^{2x}}{2^{2x} \times 3^{2x} \times 3^{2x}} = 3^{4x-2x-2x} = 1$

$\therefore 3^{y-1} = 1$ $\therefore y - 1 = 0$ $\therefore y = 1$

7

$\therefore \frac{3^{3x-3} \times 2^{3x}}{2^{2x} \times (\sqrt{2})^{2x} \times 3^{2x} \times (\sqrt{3})^{2x}} = 3^x$

$\therefore \frac{3^{3x-3} \times 2^{3x}}{2^{2x} \times 2^x \times 3^{2x} \times 3^x} = 3^x$

$\therefore \frac{3^{3x-3} \times 2^{3x}}{2^{3x} \times 3^{3x}} = 3^x$ $\therefore 3^{3x-3-3x} = 3^x$

$\therefore 3^{-3} = 3^x$ $\therefore x = -3$

8

$\frac{7^x \times 2^{2x} \times 3^x}{2^x \times 7^x} = 3^{2-y}$ $\therefore 3^x = 3^{2-y}$

$\therefore x = 2 - y$ $\therefore x + y = 2$

9

$\therefore \left(\sqrt{\frac{2}{3}}\right)^{-x} = \left(\sqrt{\frac{2}{3}}\right)^4$ $\therefore -x = 4$ $\therefore x = -4$

$\therefore \left(\frac{3}{2}\right)^{x+1} = \left(\frac{3}{2}\right)^{-4+1} = \left(\frac{3}{2}\right)^{-3} = \left(\frac{2}{3}\right)^3 = \frac{8}{27}$

10

$\therefore \frac{7^{2n} \times 5^{4n} \times 3^{4n}}{7^{-n} \times 3^{4n} \times 5^{4n}} = 7^3$

$\therefore 7^{2n+n} \times 5^{4n-4n} \times 3^{4n-4n} = 7^3$ $\therefore 7^{3n} = 7^3$

$\therefore 3n = 3$ $\therefore n = 1$ $\therefore 6^{2n} = 6^2 = 36$

11

$\therefore 3^x = 3^3$ $\therefore x = 3$ $\therefore 4^{3+y} = 1$

$\therefore 3 + y = 0$ $\therefore y = -3$

12

1 c 2 d 3 a 4 b 5 d

6 b 7 b 8 c 9 b 10 b

11 a 12 a 13 b 14 a 15 b

13

1 zero or 1 2 -5 3 2 4 7

5 1 6 -1 7 3 8 2

9 -1 10 1 11 -1 12 2

13 4, 5

14

\therefore The number of the small squares in the chess board of side length 4 cm. = 64 squares.

\therefore The area of one small square = $4 \times 4 = 16$ cm².

\therefore The area of the chess board = $16 \times 64 = 2^n$

$\therefore 2^4 \times 2^6 = 2^n$ $\therefore 2^{10} = 2^n$ $\therefore n = 10$

15

1 $\therefore x^{x+2} = 4^{x+2}$ $\therefore x = \pm 4$

(because $x + 2 = 4 + 2 = 6$ "even number"

or $x + 2 = -4 + 2 = -2$ "even number")

or $x + 2 = 0$ $\therefore x = -2$ $\therefore x = \pm 4$ or -2

2 $\therefore a^{x+3} - 1 = (a^2 - 1)(a^2 + 1)(a^4 + 1)$

$a^{x+3} - 1 = (a^4 - 1)(a^4 + 1)$

$\therefore a^{x+3} - 1 = a^8 - 1$ $\therefore a^{x+3} = a^8$

$\therefore x + 3 = 8$ $\therefore x = 5$



Answers of Exercise 12

1

1 2 2 18 3 $-\frac{1}{2}$ 4 $-\frac{2}{9}$

2

$$\begin{aligned} 1 \quad (\sqrt{5})^5 \div (\sqrt{5})^3 + 2\sqrt{3} \times \sqrt{3} &= \\ &= (\sqrt{5})^{5-3} + 2 \times (\sqrt{3})^{1+1} = (\sqrt{5})^2 + 2(\sqrt{3})^2 \\ &= 5 + 6 = 11 \end{aligned}$$

$$\begin{aligned} 2 \quad 2^3 \times (\sqrt{3})^3 \times \sqrt{3} - (\sqrt{2})^7 \div (\sqrt{2})^5 &= \\ &= 2^3 \times (\sqrt{3})^{3+1} - (\sqrt{2})^{7-5} \\ &= 2^3 \times (\sqrt{3})^4 - (\sqrt{2})^2 = 8 \times 9 - 2 = 70 \end{aligned}$$

$$\begin{aligned} 3 \quad (\sqrt{3})^{-3} \times (\sqrt{3})^3 + (\sqrt{3})^{-4} \times (\sqrt{3})^{10} &= \\ &= (\sqrt{3})^{-3+3} + (\sqrt{3})^{-4+10} \\ &= 1 + (\sqrt{3})^6 = 1 + 27 = 28 \end{aligned}$$

$$\begin{aligned} 4 \quad 2^4 \times (\sqrt{5})^4 - (\sqrt{5})^{-3} \times (\sqrt{5})^6 \div (\sqrt{5})^3 &= \\ &= 2^4 \times (\sqrt{5})^4 - (\sqrt{5})^{-3+6-3} = 16 \times 25 - 1 = 399 \end{aligned}$$

3

$$\begin{aligned} 1 \quad \frac{(\sqrt{3})^7 \times (\sqrt{3})^{-7} - (\sqrt{3})^2}{(\sqrt{3})^7 \times (\sqrt{3})^{-5} + (\sqrt{3})^2} &= \frac{(\sqrt{3})^2 - (\sqrt{3})^2}{(\sqrt{3})^2 + (\sqrt{3})^2} \\ &= \frac{0}{3+3} = \text{zero} \end{aligned}$$

$$2 \quad \frac{2(\sqrt{3})^5 \div (\sqrt{3})^3}{2\sqrt{3} + 3 - 2\sqrt{3} + 1} = \frac{2(\sqrt{3})^2}{4} = \frac{3}{2}$$

$$3 \quad \frac{2^3 \times (\sqrt{2})^3 \times 3 \times \sqrt{2}}{6 + 2\sqrt{12} + 2 - 2\sqrt{12}} = \frac{8 \times 3 \times (\sqrt{2})^4}{8} = 3 \times 4 = 12$$

4

$$\begin{aligned} 1 \quad \frac{b^4 - a^4}{b^2 + a^2} &= \frac{(b^2 - a^2)(b^2 + a^2)}{(b^2 + a^2)} = b^2 - a^2 \\ &= (\sqrt{3})^2 - (\sqrt{2})^2 = 3 - 2 = 1 \end{aligned}$$

$$\begin{aligned} 2 \quad \frac{a^3 + b^3}{a + b} &= \frac{(a+b)(a^2 - ab + b^2)}{(a+b)} \\ &= a^2 - ab + b^2 \\ &= (\sqrt{2})^2 - \sqrt{2} \times \sqrt{3} + (\sqrt{3})^2 \\ &= 2 - \sqrt{6} + 3 = 5 - \sqrt{6} \end{aligned}$$

5

1 a 2 d 3 a 4 a 5 d

6

$$\begin{aligned} 1 \quad \therefore \text{The total area of the cube} &= 6l^2 \\ \therefore 6l^2 &= 3.375 \times 10^2 \quad \therefore l^2 = \frac{3.375 \times 10^2}{6} \\ \therefore l &= \sqrt{\frac{3.375 \times 10^2}{6}} \end{aligned}$$

Using the calculator $l = 7.5$ cm.

$$\begin{aligned} 2 \quad \therefore \text{The volume of the cube} &= l^3 \\ \therefore \text{The volume of the cube} &= (7.5)^3 \\ \text{Using the calculator,} & \\ \text{the volume of the cube} &= 421.875 \text{ cm}^3 \end{aligned}$$

7

$$\begin{aligned} \therefore \text{The volume of the sphere} &= \frac{4}{3} \pi r^3 \\ \therefore 3.8808 \times 10^4 &= \frac{4}{3} \pi r^3 \\ \therefore r^3 &= \frac{3.8808 \times 10^4 \times 3}{4\pi} \quad \therefore r = 3 \sqrt{\frac{3.8808 \times 10^4 \times 3}{4 \times \frac{22}{7}}} \end{aligned}$$

Using the calculator $r = 21$ cm.**8**

$$\begin{aligned} \therefore \text{The volume of the cone} &= \frac{1}{3} \pi r^2 h \\ \therefore 7.7 \times 10^2 &= \frac{1}{3} \pi \times 7^2 \times h \\ \therefore 7.7 \times 10^2 &= \frac{49}{3} \times \pi \times h \\ \therefore h &= \frac{7.7 \times 10^2 \times 3}{49 \times \frac{22}{7}} \quad \text{Using the calculator } h = 15 \text{ cm.} \end{aligned}$$

9

$$c = 2.5 \times 10^4 (1 + 9.8 \times 10^{-2})^{12}$$

Using the calculator we get:

$$c = 76765.85477 \approx 76766 \text{ to the nearest pound.}$$

10

$$1 \quad y = 11.7 (1.02)^6 \text{ Using the calculator}$$

$$y = 13.17610031 \approx 13 \text{ million persons}$$

$$2 \quad y = 11.7 (1.02)^{-5} \text{ Using the calculator}$$

$$y = 10.59705048 \approx 11 \text{ million persons}$$

11

$$\frac{x^7 y^8 - y}{(x+y)^9} = \frac{y(x^7 y^7 - 1)}{(x+y)^9}$$

$$\therefore X \times y = (2 + \sqrt{3})(2 - \sqrt{3}) = 4 - 3 = 1$$

$$\therefore X + y = 2 + \sqrt{3} + 2 - \sqrt{3} = 4$$

$$\therefore \frac{x^7 y^8 - y}{(x+y)^9} = \frac{(2 - \sqrt{3})(1^7 - 1)}{4^9} = \text{zero}$$

12

$$\begin{aligned} \therefore l+m &= \frac{1}{2}(3^x+3^{-x}) + \frac{1}{2}(3^x-3^{-x}) \\ &= \frac{1}{2}(3^x+3^{-x}+3^x-3^{-x}) \\ &= \frac{1}{2} \times (2 \times 3^x) = 3^x \end{aligned}$$

$$\begin{aligned} \therefore l-m &= \frac{1}{2}(3^x+3^{-x}) - \frac{1}{2}(3^x-3^{-x}) \\ &= \frac{1}{2}(3^x+3^{-x}-3^x+3^{-x}) \\ &= \frac{1}{2} \times (2 \times 3^{-x}) = 3^{-x} \end{aligned}$$

$$\therefore l^2 - m^2 = (l-m)(l+m) = 3^x \times 3^{-x} = 3^{\text{zero}} = 1$$

Answers of the general exercises on unit two

First: Completion questions

- | | | | |
|------------------------|--------|-----------------------|--------|
| 1 $\frac{\sqrt{2}}{4}$ | 2 5 | 3 $\frac{9}{4}$ | 4 2 |
| 5 4 | 6 8 | 7 $(-\sqrt{11})^{24}$ | 8 zero |
| 9 1 | 10 20 | 11 1 | 12 -1 |
| 13 $1, x^2$ | 14 1 | 15 2 | 16 2 |
| 17 $-\frac{1}{2}$ | 18 128 | 19 -1 | 20 1 |

Second: Multiple choice questions

- | | | | | | |
|------|------|------|------|------|------|
| 1 c | 2 b | 3 c | 4 c | 5 c | 6 a |
| 7 b | 8 d | 9 a | 10 d | 11 c | 12 b |
| 13 c | 14 a | 15 a | 16 a | 17 b | 18 c |
| 19 d | 20 a | | | | |

Third: Essay questions

- | | | | | | |
|---|-----------------|-----------------|------------------|------|-----------------|
| 1 | 1 $\frac{1}{3}$ | 2 4 | 3 $\frac{8}{27}$ | 4 25 | 5 $\frac{1}{3}$ |
| | 6 $\frac{1}{7}$ | 7 $\frac{1}{8}$ | 8 10000 | 9 4 | |

- | | | | | | |
|---|-----------------|------------------|---------------|---------------|-----------------|
| 2 | 1 $\frac{1}{3}$ | 2 $-\frac{1}{4}$ | 3 $2\sqrt{2}$ | 4 $9\sqrt{3}$ | 5 $\frac{4}{9}$ |
| | 6 3 | | | | |

- | | | | | |
|---|--------------------|----------------|------|------|
| 3 | 1 8 | 2 25 | 3 36 | 4 72 |
| | 5 $\frac{64}{729}$ | 6 $81\sqrt{3}$ | | |

- | | | | | |
|---|--------------|-----|-------------------|---------------|
| 4 | 1 $\sqrt{3}$ | 2 1 | 3 $\frac{1}{108}$ | 4 $3\sqrt{2}$ |
|---|--------------|-----|-------------------|---------------|

- | | | | |
|---|------------------|-------------------|--------------------------|
| 5 | 1 $\frac{1}{36}$ | 2 $\frac{81}{16}$ | 3 $\frac{2\sqrt{2}}{27}$ |
|---|------------------|-------------------|--------------------------|

- | | |
|---|---------------|
| 6 | $\frac{7}{8}$ |
|---|---------------|

- | | | |
|---|-----|---------------------|
| 7 | 1 1 | 2 $97 - 56\sqrt{3}$ |
|---|-----|---------------------|

- | | |
|---|---|
| 8 | 1 |
|---|---|

- | | | |
|---|-----|-----------------|
| 9 | 1 5 | 2 $\frac{9}{4}$ |
|---|-----|-----------------|

- | | |
|----|----|
| 10 | -1 |
|----|----|

- | | |
|----|----------------|
| 11 | $\frac{27}{8}$ |
|----|----------------|

- | | |
|----|-------------------------|
| 12 | , 13 Prove by yourself. |
|----|-------------------------|

- | | | | | |
|----|--------|-----|-----|-----|
| 14 | 1 5 | 2 3 | 3 6 | 4 5 |
| | 5 zero | 6 2 | | |

- | | |
|----|--------------------|
| 15 | Prove by yourself. |
|----|--------------------|

- | | |
|----|----------------|
| 16 | $\frac{1}{64}$ |
|----|----------------|

- | | |
|----|--------------------------|
| 17 | $2^2 \times 3^{4-4x}, 4$ |
|----|--------------------------|

- | | | |
|----|--------------------|-----------------------|
| 18 | 1 7.5 length units | 2 421.875 cube units. |
|----|--------------------|-----------------------|

- | | |
|----|--------|
| 19 | 21 cm. |
|----|--------|

**Answers of worksheets
in algebra and statistics**



Worksheet

1

- 1**
 (1) (c) (2) (d) (3) (c)
 (4) (c) (5) (a) (6) (c)

- 2**
 (1) $(a + 1)(a - 4)$ (2) ± 2 (3) -3
 (4) $(X - 1)$ (5) $(X - 1)$ (6) $6X, X, 4$

- 3**
 (1) $(a^2 + 5)(X - y)$ (2) $3(X - 2)(X - 3)$

- 4**
 (1) 1 (2) 12 (3) 2

Try by yourself to get other values of k



Worksheet

2

- 1**
 (1) $(2X - 3)$ (2) 5 (3) 1, 2
 (4) $2X^2, 7X, 5$ (5) 21 (6) $-5a$

- 2**
 (1) (c) (2) (a) (3) (b)
 (4) (b) (5) (b) (6) (b)

- 3**
 The dimensions are $(2X + 5), (X + 7)$ cm.
 The perimeter = 30 cm.

- 4**
 [a] (1) $(2X + 3)(X - 2)$ (2) $(2X + 1)(X - 4)$
 [b] $c = 2, (2X - 5)(X + 3)$

Try to get other values for c by yourself.



Worksheet

3

- 1**
 (1) (c) (2) (d) (3) (a)
 (4) (b) (5) (a) (6) (d)

- 2**
 (1) 5 (2) 9 (3) $3X + 2$
 (4) $6Xy, 9y^2, X$ (5) $3, 25a^2, 9$ (6) 30

- 3**
 [a] 100
 [b] The side length of the square = $(10X + 4)$ cm.
 The perimeter of the square = 56 cm.

- 4**
 (1) $(X - 5)(X - 2)$ (2) $(2X - 3)(X + 2)$
 (3) $(5X + 3)^2$ (4) $2X(X - 5)^2$



Worksheet

4

- 1**
 (1) (a) (2) (d) (3) (d)
 (4) (b) (5) (b) (6) (c)

- 2**
 (1) 5 (2) 38 (3) -5
 (4) $(X - 2)(X + 2)$ (5) 50 (6) $1, X$

- 3**
 (1) $(2X - 3)(X + 2)$ (2) $3(X - 3)(X + 3)$
 (3) $(0.8X + 0.3y)(0.8X - 0.3y)$

- 4**
 [a] 9800 [b] $(3b - 4)(3b + 4)(a - 5b)$



Worksheet

5

- 1**
 (1) (b) (2) (d) (3) (b)
 (4) (a) (5) (d) (6) (c)

- 2**
 (1) $X - 5$ (2) 4 (3) 16
 (4) 8 (5) $(X - 3)$ (6) ± 6

- 3**
 (1) $(X - 2)(X + 8)$ (2) $(X - 3)(X^2 + 3X + 9)$
 (3) $(2a - 3b)(a - 2b)$

- 4**
 [a] 10000
 [b] $(X - 2)(X^2 + 2X + 4)(X + 2)(X^2 - 2X + 4)$



Worksheet

6

1

- (1) (c) (2) (b) (3) (d)
 (4) (b) (5) (b) (6) (a)

2

- (1) $(X - y - 1)$ (2) -16
 (3) $(3X + 2y)(9X^2 - 6Xy + 4y^2)$ (4) 16
 (5) $(3X - 7)(X - 1)$ (6) $(X + a)(X - b)$

3

- (1) $\frac{1}{2}(X - 2)(X^2 + 2X + 4)$
 (2) $(2X + y + 3)(2X + y - 3)$
 (3) $(X + y)(X^2 - Xy + y^2 - 1)$

4

- [a] 63.5
 [b] $(X - y)(X^2 + Xy + y^2)(X + y)(X^2 - Xy + y^2)$



Worksheet

7

1

- (1) (b) (2) (d) (3) (a)
 (4) (c) (5) (a) (6) (b)

2

- (1) 125 (2) $(a + 2)$ (3) 1
 (4) $(5X - 7)$ (5) 40 (6) $4X^2$

3

- (1) $3X(X + 5)(X - 5)$ (2) $X(X - 1)(X^2 + X + 1)$
 (3) $(2X - 9)(3X + 2)$ (4) $(X - 6)(y - 5)$

4

- (1) $(2X - 5y)(X + y)(2X + 5y)(X - y)$
 (2) $(X - y)(X + 2y)(X + y)(X - 2y)$



Worksheet

8

1

- (1) (b) (2) (a) (3) (d)
 (4) (c) (5) (c) (6) (b)

2

- (1) $4X + 14Xy$ (2) 15 (3) -81
 (4) \emptyset (5) 9 (6) $\{0, 4\}$

3

- (1) $(5X + 6)(X - 2)$ (2) $(a + 1)(a + 3)(a - 3)$
 (3) $(X^2 + 2y^2 - 2Xy)(X^2 + 2y^2 + 2Xy)$

4

- (1) S.S. = $\{-3, 10\}$ (2) S.S. = $\{-1, 3\}$



Worksheet

9

1

- (1) (c) (2) (c) (3) (a)
 (4) (a) (5) (b) (6) (c)

2

- (1) $(2X - 1)$ (2) 6 (3) $2X^2$
 (4) ± 1 (5) 28 (6) 6, 1

3

- [a] (1) $(2X + 3)(2X - 5)$
 (2) $(X^2 - 5y^2 - 3Xy)(X^2 - 5y^2 + 3Xy)$
 [b] S.S. = $\{-\frac{2}{3}, 3\}$

4

- [a] $1, -\frac{1}{2}$ [b] 25 cm.



Worksheet

10

1

- (1) (a) (2) (a) (3) (c)
 (4) (c) (5) (d) (6) (c)

2

- (1) $\{0, 2\}$ (2) 1 (3) 4
 (4) $(X + 1)$ (5) $\mathbb{R} - \{5\}$ (6) 10

3

- [a] Prove by yourself.
 [b] (1) $(a + b)(3X + 2y)$
 (2) $(2X - 5)(4X^2 + 10X + 25)$

4

- [a] The dimensions of the rectangle are 7 m. and 12 m.
 The perimeter of the rectangle = 38 m.
 [b] $\frac{1}{36}$



Worksheet

11

1

- (1) (d) (2) (d) (3) (d)
 (4) (d) (5) (b) (6) (c)

2

- (1) $\frac{9}{4}$ (2) 2 (3) 35
 (4) 20 (5) $\{0, 1\}$ (6) 2

3

- [a] (1) $(2x - 3)(x + 2)$
 (2) $(2x - 3)(4x^2 + 6x + 9)$
 (3) $(x - 1)(x + y)$

[b] $n = 2$

4

[a] $(x^2 + y^2 - 3xy)(x^2 + y^2 + 3xy)$

[b] $\frac{27}{8}$



Worksheet

12

1

- (1) (b) (2) (a) (3) (d)
 (4) (a) (5) (a) (6) (d)

2

- (1) 2 (2) $x + y$ (3) $\{-1, 1\}$
 (4) $(x + 3)$ (5) $a - b + 1$ (6) $(x + 5)$

3

- (1) $2(x + 5y)(x - 5y)$ (2) $(5x + 7y)(x - 3y)$
 (3) $x^3(2 - 7x)(4 + 14x + 49x^2)$
 (4) $(x^2 + 2l^2 - 2xl)(x^2 + 2l^2 + 2xl)$

4

[a] $\frac{7}{8}$

[b] $\frac{1}{64}$



Worksheet

13

1

- (1) (d) (2) (c) (3) (c)
 (4) (b) (5) (c) (6) (d)

2

- (1) zero, 1 (2) $1 + x^2$ (3) $\frac{3}{20}$
 (4) 15 (5) $2a, -22ab$ (6) 1

3

- [a] (1) $\frac{1}{2}(x - 2y)(x + 2y)$
 (2) $(3x + 2y)(9x^2 - 6xy + 4y^2)$
 (3) $(3a + b)(2a - 7b)$
 (4) $(x^2 + 8 - 4x)(x^2 + 8 + 4x) =$

[b] Prove by yourself.

4

[a] Hatem's age = 5 years.


Hanan's age = one year.

- [b] (1) $\frac{2}{5}$ (2) $\frac{8}{25}$






From the school book

Exercise 5**On areas of some geometric figures****1 Complete the following :**

- 1 The area of the rhombus = the side length \times = $\frac{1}{2}$ of the product of
- 2 The area of the square = the square of the length of = $\frac{1}{2}$
- 3 The length of the middle base of the trapezium equals
- 4 The area of the trapezium = half of the sum of lengths of the two parallel bases \times
= the length of \times its height
- 5 The base angles of the isosceles trapezium are
- 6  The diagonals of an isosceles trapezium are



2 Find the area of the following figures :

- 1 A rhombus of side length 6 cm. and its height = 5 cm. « 30 cm² »
- 2  A rhombus whose side length 12 cm. and its height = 8 cm. « 96 cm² »
- 3  A rhombus whose diagonals lengths are 8 cm. and 10 cm. « 40 cm² »
- 4 A rhombus whose diagonal lengths are 24 cm. and 10 cm. « 120 cm² »
- 5 A square whose diagonal length = 10 cm. « 50 cm² »
- 6  A square whose diagonal length = 8 cm. « 32 cm² »
- 7 A trapezium whose bases lengths are 6 cm. and 8 cm. and its height = 12 cm. « 84 cm² »
- 8 A trapezium whose bases lengths are 8 cm. and 10 cm. and its height = 5 cm. « 45 cm² »
- 9 A trapezium whose middle base length is 7 cm. and its height = 6 cm. « 42 cm² »
- 10 A trapezium whose middle base length is 12 cm. and its height = 8 cm. « 96 cm² »

3 Choose the correct answer from those given :

- 1 The area of rhombus is 20 cm², the length of one of its diagonals is 5 cm., then the length of the other diagonal =
(a) 8 cm. (b) 4 cm. (c) 10 cm. (d) 15 cm.
- 2 If the area of a square is 50 cm², then the length of its diagonal =
(a) 25 cm. (b) 5 cm. (c) 10 cm. (d) 20 cm.
- 3 The area of the square whose side length is 6 cm. the area of the square whose diagonal length is 8 cm.
(a) > (b) < (c) = (d) \equiv
- 4 If the perimeter of a rhombus is 24 cm. and its area = 30 cm² then its height =
(a) 4 cm. (b) 5 cm. (c) 6 cm. (d) 12 cm.

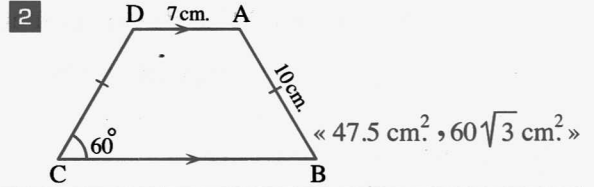
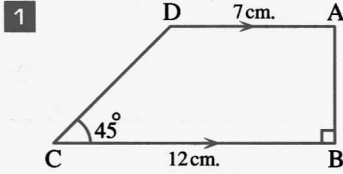
- 5 If the product of the lengths of the diagonals of a rhombus = 96 cm^2 and its height is 6 cm., then its side length =
- (a) 12 cm. (b) 8 cm. (c) 6 cm. (d) 4 cm.
- 6 The trapezium in which the lengths of its two parallel bases are 15 cm. and 11 cm. Its middle base is with length
- (a) 26 cm. (b) 15 cm. (c) 13 cm. (d) 11 cm.
- 7 If the area of a trapezium is 32 cm^2 and its height is 4 cm., then the length of its middle base =
- (a) 4 cm. (b) 8 cm. (c) 14 cm. (d) 16 cm.
- 8 If the area of the trapezium is 450 cm^2 , and the lengths of its two parallel bases are 24 cm. and 12 cm. , then its height =
- (a) 12.5 cm. (b) 25 cm. (c) 36 cm. (d) 52 cm.
- 9 The trapezium in which the length of one of its parallel bases is 15 cm., and its area is 108 cm^2 and its height is 8 cm., then the length of the other base is
- (a) 15 cm. (b) 4 cm. (c) 12 cm. (d) 27 cm.
- 10 The trapezium whose middle base length is x cm. and its height = $\frac{1}{2}$ the length of the middle base, its area = cm^2
- (a) x^2 (b) $\frac{x^2}{2}$ (c) $\frac{x^2}{4}$ (d) $\frac{x^2}{8}$

- 4 A square whose area equals the area of the rectangle whose dimensions are 2 cm. and 9 cm. Find the length of its diagonal. « 6 cm. »
- 5 Two land pieces are equal in area , the first is in the shape of a square and the second is in the shape of a rhombus whose diagonals lengths are 8 metres and 16 metres. Find the perimeter of the square-shaped piece. « 32 cm. »
- 6  Two pieces of land have equal areas , one of them has the shape of a rhombus whose diagonals are 18 m. and 24 m. , and the other one has the shape of a trapezium whose height is 12 m. Find the length of its middle base. « 18 m. »
- 7 A rhombus whose diagonals are of lengths 12 cm. and 16 cm. Find its height. « 9.6 cm. »
- 8  Find the area of the rhombus whose perimeter is 52 cm. and the length of one of its diagonals is 10 cm. « 120 cm^2 »



- 9 The perimeter of a rhombus is 64 cm. and the measure of one of its angles is 60° . Find its area. « $128\sqrt{3} \text{ cm}^2$ »

- 10 Find the area of each of the following figures by using the given data :



- 11 If the ratio between the two lengths of the diagonals of a rhombus is 3 : 4 and the length of the smallest diagonal is 9 cm. Find the area of the rhombus. « 54 cm^2 »

- 12 A rhombus : The ratio between the lengths of the two diagonals is 5 : 8 if its area = 2000 cm^2 . Find the length of each of its diagonals. « 50 cm. , 80 cm. »

- 13 The length of the middle base of a trapezium is 30 cm. and the ratio between the lengths of its two parallel bases is 2 : 3 Find the length of each of them. and if its height = 24 cm. , find its area. « 24 cm. , 36 cm. , 720 cm^2 »

- 14 The area of a trapezium is 180 cm^2 and its height is 12 cm. Find the lengths of its parallel bases if the ratio between their lengths is 3 : 2 « 18 cm. , 12 cm. »

- 15 A piece of land has the shape of a trapezium whose area is 4000 m^2 . The lengths of the two parallel bases and its height are of ratio 3 : 2 : 4, respectively. Find the length of its middle base. « 50 cm. »

- 16 Two pieces of land , the first is in the shape of a trapezium in which the lengths of its two parallel bases are 76 metres and 64 metres and the perpendicular distance between them is 45 metres and the second is in the shape of a rhombus whose diagonals lengths are 74 metres and 90 metres. The two pieces are exchanged by a rectangular piece of land whose area equals to the sum of areas of the trapezium and rhombus pieces. The ratio between its length and its width is 5 : 4 Find its dimensions. « 90 m. , 72 m. »

- 17 ABCD is a trapezium in which $\overline{AD} \parallel \overline{BC}$, X is the midpoint of \overline{AB} , Y is the midpoint of \overline{DC} If $XY = 7 \text{ cm}$. , $BC = 10 \text{ cm}$. and the area of the trapezium = 35 cm^2 , find the length of \overline{AD} and the perpendicular distance between \overline{AD} and \overline{BC} « 4 cm. , 5 cm. »

18 ABCD is a trapezium in which $\overline{AD} \parallel \overline{BC}$, $AD = 27$ cm. and $BC = 45$ cm.
If the area of $\Delta ABC = 225$ cm², find the area of the trapezium. « 360 cm² »

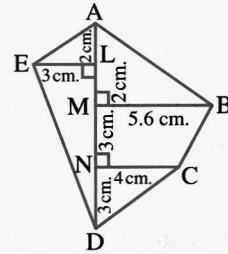
19 ABCD is a trapezium in which $\overline{AD} \parallel \overline{BC}$, $m(\angle A) = 90^\circ$, $BC = 4$ cm., $AD = 24$ cm.,
 $BD = 30$ cm. and $\overline{AF} \perp \overline{BD}$ to cut it at F where $AF = 14.4$ cm.
Find the area of the trapezium ABCD « 252 cm² »

20 In the opposite figure :

Each of \overline{BM} , \overline{CN} and \overline{EL} is perpendicular to \overline{AD}

Using the shown lengths on the figure ,

find the area of the figure ABCDE



« 46.6 cm² »

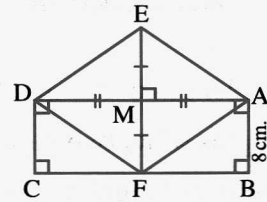
21 In the opposite figure :

ABCD is a rectangle of area 144 cm²

If $AB = 8$ cm., $\overline{AD} \perp \overline{EF}$

and M is the midpoint of each of \overline{AD} and \overline{EF} ,

find the area of the figure AFDE



« 144 cm² »

22 ABCD is a rectangle with $AB = 6$ cm., $BC = 8$ cm., X, Y, L and M are the midpoints of the sides \overline{AB} , \overline{BC} , \overline{CD} and \overline{DA} respectively.

1 Prove that : The figure XYLM is a rhombus and find its area.

2 Find the height of the rhombus XYLM

« 24 cm², 4.8 cm. »



For excellent pupils

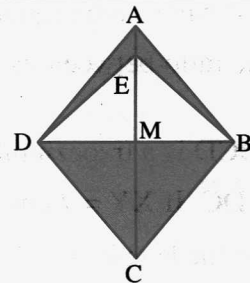
23 The area of an isosceles trapezium is 120 cm², its perimeter is 60 cm. and the length of its middle base is 20 cm. Find the lengths of its bases. « 12 cm., 28 cm. »

24 In the opposite figure :

ABCD is a rhombus, its diagonals intersect at M,

$AC + BD = 33$ cm., $BD : AC = 5 : 6$ and $E \in \overline{AM}$ such that

$ME = \frac{2}{3} MA$. Find the area of the shaded part.



« 90 cm² »

Exercise

6

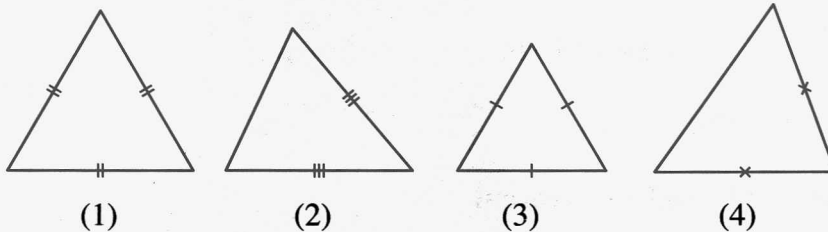
On similarity

1 Complete each of the following statements :

- 1 If two polygons are similar , then the corresponding are equal in measure.
- 2 If two polygons are similar , then the corresponding are proportional.
- 3 If each of two polygons is similar to a third , then they are
- 4 The two triangles are similar if the corresponding are proportional.
- 5 If the measures of the corresponding angles in the two triangles are equal , then the two triangles are
- 6 If we have two polygons , their corresponding angles are and their corresponding sides lengths are , then the two polygons are similar.
- 7 If the ratio between the lengths of two corresponding sides in two similar triangles is equal to 1 , then the two triangles are
- 8 If two polygons are similar and the ratio between the lengths of two corresponding sides is 3 : 4 , then the ratio between their perimeters is

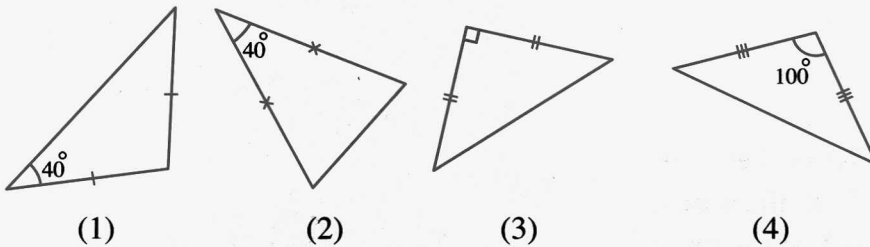
2 Choose the correct answer from those given ones :

- 1 In the following figures , there are two similar triangles , they are



- (a) 1 , 2 (b) 1 , 3 (c) 1 , 4 (d) 2 , 4

- 2 In the following figures , there are two similar triangles , they are

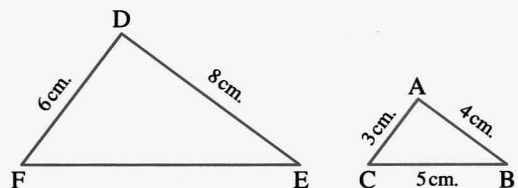


- (a) 1 , 2 (b) 1 , 3 (c) 2 , 4 (d) 1 , 4

3 In the opposite figure :

If $\triangle ABC \sim \triangle DEF$, then $EF = \dots\dots\dots$

- (a) 5 cm. (b) 6 cm.
(c) 8 cm. (d) 10 cm.

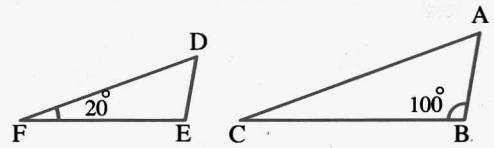




4 In the opposite figure :

If $\Delta ABC \sim \Delta DEF$, then $m(\angle A) = \dots\dots\dots$

- (a) 20° (b) 60°
- (c) 80° (d) 100°



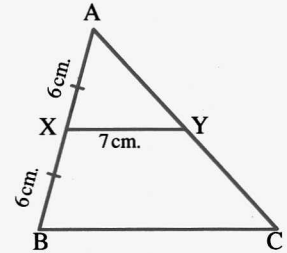
5 In the opposite figure :

If $\Delta ABC \sim \Delta AXY$,

$AX = XB = 6$ cm.

$XY = 7$ cm. , then $BC = \dots\dots\dots$

- (a) 6 cm. (b) 7 cm.
- (c) 12 cm. (d) 14 cm.



6 If the ratio between the lengths of two corresponding sides of two squares is 1 and the perimeter of one of them is 20 cm. , then the area of the other square =

- (a) 20 cm^2 (b) 25 cm^2 (c) 16 cm^2 (d) 25 cm.

7 If $\Delta ABC \sim \Delta DEF$ and $AB = \frac{1}{5} DE$, then perimeter of $\Delta ABC = \dots\dots\dots$ perimeter of ΔDEF

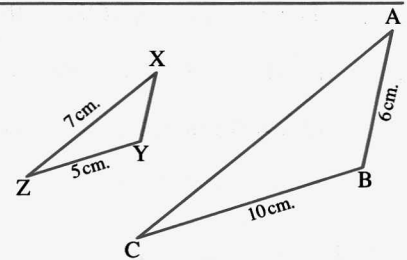
- (a) 5 (b) 1 (c) $\frac{1}{5}$ (d) $\frac{2}{5}$

3 In the opposite figure :

$\Delta ABC \sim \Delta XYZ$

Find : AC and XY

« 14 cm. , 3 cm. »



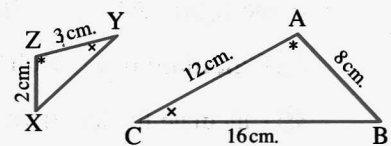
4 Using the shown data in the figure , then prove that :

ΔXYZ and ΔBCA

are similar , then find

the perimeter of ΔXYZ

« 9 cm. »



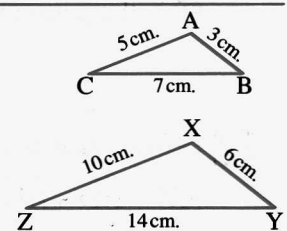
5 In the opposite figure :

1 Prove that : ΔABC and ΔXYZ are similar.

2 If : $m(\angle B) + m(\angle C) = 60^\circ$,

find : $m(\angle X)$

« 120° »



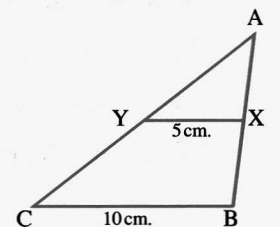
6 In the opposite figure :

If $\Delta AXY \sim \Delta ABC$

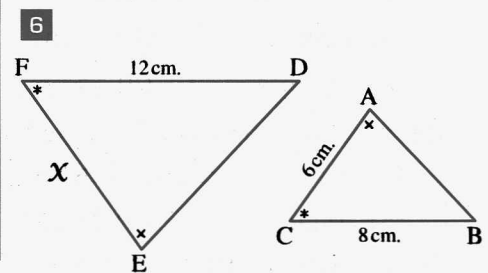
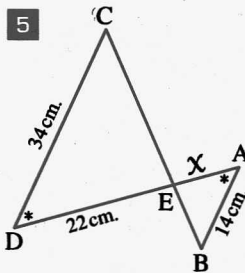
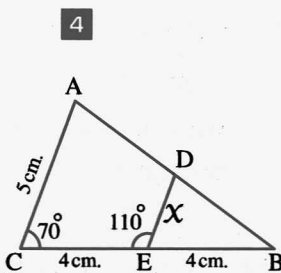
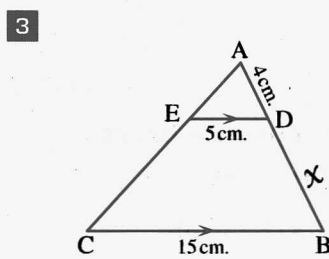
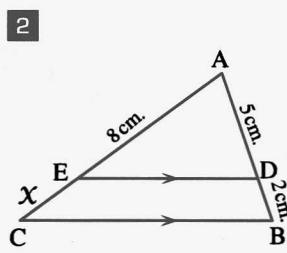
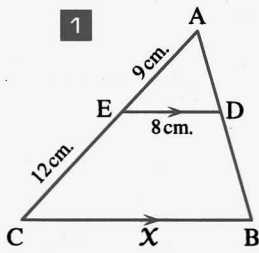
$XY = 5$ cm. and $BC = 10$ cm. ,

Prove that : **1** $\overline{XY} \parallel \overline{BC}$

2 Y is the midpoint of \overline{AC}



7 In each of the following, find the numerical value of X (Given that lengths are in cm.):

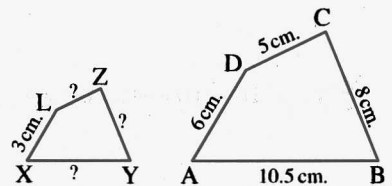


8 In the opposite figure :

The polygon $ABCD \sim$ the polygon $XYZL$

If $AB = 10.5$ cm. , $BC = 8$ cm. , $CD = 5$ cm. ,
 $DA = 6$ cm. and $LX = 3$ cm.

Find the length of each of : \overline{XY} , \overline{YZ} and \overline{ZL}



« 5.25 cm. , 4 cm. , 2.5 cm. »

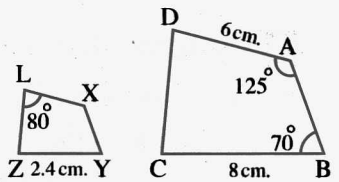
9 In the opposite figure :

If the figure $ABCD \sim$ the figure $XYZL$

1 Calculate $m(\angle BCD)$.

2 Calculate the length of \overline{XL} and determine the enlargement ratio.

3 If the perimeter of the figure $ABCD = 26$ cm. , what is the perimeter of the figure $XYZL$



« 85° , 1.8 cm. , $\frac{10}{3}$, 7.8 cm. »

10 In the opposite figure :

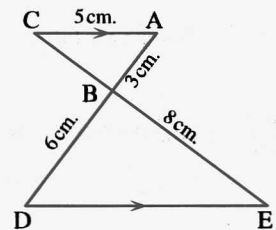
$\overline{AC} \parallel \overline{ED}$, $\overline{AD} \cap \overline{CE} = \{B\}$

, $AC = 5$ cm. , $BE = 8$ cm. , $AB = 3$ cm. and $BD = 6$ cm.

1 Prove that : $\triangle ABC \sim \triangle DBE$

2 Find the length of each of : \overline{BC} and \overline{ED}

3 Find : the ratio of enlargement.



« 4 cm. , 10 cm. , 2 »



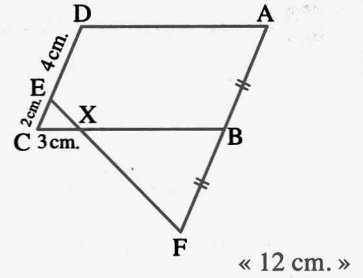
11 In the opposite figure :

ABCD is a parallelogram. B is the midpoint of \overline{AF}

$CE = 2$ cm. , $DE = 4$ cm. and $XC = 3$ cm.

Prove that : $\triangle ECX \sim \triangle FBX$

then find the length of : \overline{AD}



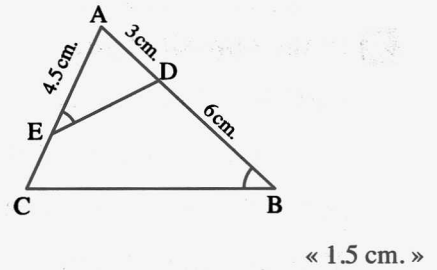
12 In the opposite figure :

$m(\angle AED) = m(\angle B)$, $AD = 3$ cm.

$AE = 4.5$ cm. and $BD = 6$ cm.

1 Prove that : $\triangle ADE \sim \triangle ACB$

2 Find the length of : \overline{EC}



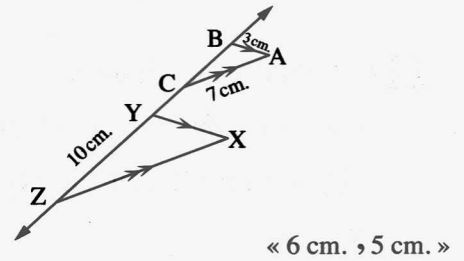
13 In the opposite figure :

$\overline{AB} \parallel \overline{XY}$, $\overline{AC} \parallel \overline{XZ}$

, $AB = 3$ cm. , $AC = 7$ cm. , $YZ = 10$ cm.

and $XZ = 2 AC$

Find : XY , BC



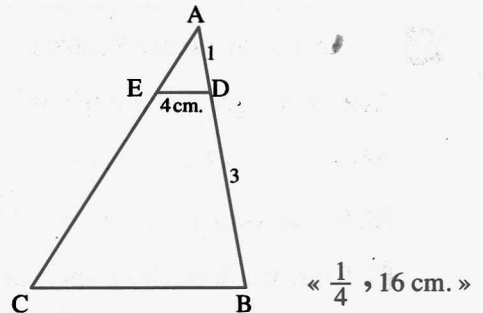
14 In the opposite figure :

$\triangle ADE \sim \triangle ABC$

, $AD : DB = 1 : 3$

1 Find the ratio $\frac{AE}{AC}$

2 If $DE = 4$ cm. , find the length of : \overline{BC}



15 In the opposite figure :

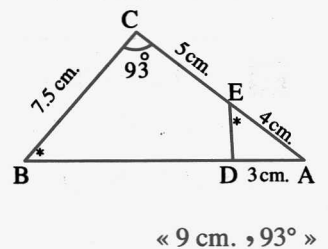
$\triangle ABC$, $D \in \overline{AB}$, $E \in \overline{AC}$

, $AE = 4$ cm. , $EC = 5$ cm. , $BC = 7.5$ cm.

, $AD = 3$ cm. , $m(\angle AED) = m(\angle B)$ and $m(\angle C) = 93^\circ$

1 Prove that : $\triangle AED \sim \triangle ABC$

2 Find the length of each of : \overline{BD} and $m(\angle ADE)$



16 In the opposite figure :

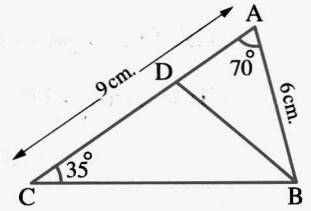
ABC is a triangle in which : $m(\angle A) = 70^\circ$

, $m(\angle C) = 35^\circ$, $D \in \overline{AC}$

If $\triangle ABD \sim \triangle ACB$

Find : $m(\angle DBC)$ and if : $AB = 6 \text{ cm.}$, $AC = 9 \text{ cm.}$

Find the length of : \overline{CD}



« 40° , 5 cm. »

17 In the opposite figure :

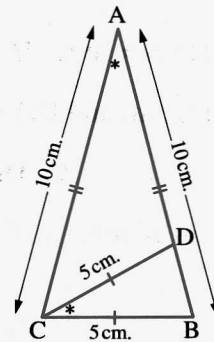
ABC is a triangle in which , $D \in \overline{AB}$

, $AB = AC = 10 \text{ cm.}$, $CD = CB = 5 \text{ cm.}$

and $m(\angle DCB) = m(\angle BAC)$

1 Prove that : $\triangle ABC \sim \triangle CDB$

2 Find the length of : \overline{AD}



« 7.5 cm. »

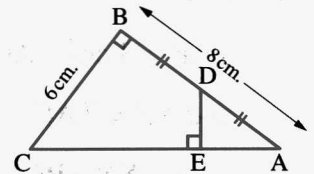
18 In the opposite figure :

ABC is a right-angled triangle at B , D is the

midpoint of \overline{AB} , $\overline{DE} \perp \overline{AC}$, $AB = 8 \text{ cm.}$,

$BC = 6 \text{ cm.}$

Find the length of : \overline{DE}



« 2.4 cm. »

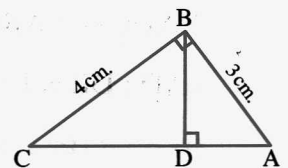
19 In the opposite figure :

ABC is a right-angled triangle at B in which :

$AB = 3 \text{ cm.}$, $BC = 4 \text{ cm.}$ and $\overline{BD} \perp \overline{AC}$

1 Prove that : $\triangle BAC \sim \triangle DAB$

2 Find the length of each of : \overline{AD} and \overline{DC}



« 1.8 cm. , 3.2 cm. »

20 ABC is a triangle. \overline{AB} , \overline{BC} and \overline{CA} are bisected at D , E and F respectively

Prove that : $\triangle ABC \sim \triangle EFD$

21 Two similar triangles, one of them has a perimeter of 74 cm. and the sides lengths of the other are 4.5 cm. , 6 cm. and 8 cm.

Find the length of the longest side in the first triangle.

« 32 cm. »

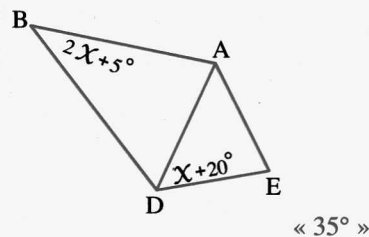


22 In the opposite figure :

$\triangle AED \sim \triangle ADB$

, $m(\angle ADE) = x + 20$ and $m(\angle ABD) = 2x + 5^\circ$

Find : $m(\angle ADE)$



23 In the opposite figure :

$\overline{BZ} \subset \overline{BC}$, $\overline{XZ} \parallel \overline{AC}$, $\overline{XY} \parallel \overline{AB}$

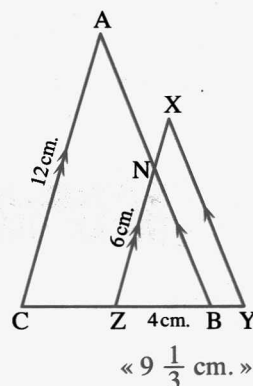
, $\overline{XZ} \cap \overline{AB} = \{N\}$, $AC = 12$ cm.

$NZ = 3 NX = 6$ cm. and $BZ = 4$ cm.

1 Prove that : $\triangle XYZ \sim \triangle NBZ \sim \triangle ABC$

2 Prove that : Z is the midpoint of \overline{BC}

3 Find the length of : \overline{YC}



24 In the opposite figure :

ABCD is a rectangle in which $AD = 12$ cm. and $X \in \overline{AD}$

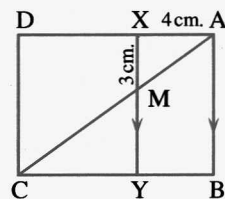
where $AX = 4$ cm. , $\overline{XY} \parallel \overline{AB}$ and intersects \overline{AC} at M and \overline{BC} at Y

, where $MX = 3$ cm.

1 Prove that : $\triangle AMX \sim \triangle CMY$

2 Find the perimeter of : $\triangle YMC$

3 Is the figure $ABYM \sim$ the figure $CDXM$? Why ?



« 24 cm. »

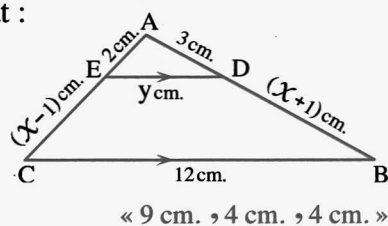
25 In the opposite figure :

ABC is a triangle in which $D \in \overline{AB}$ and $E \in \overline{AC}$ such that :

$\overline{DE} \parallel \overline{BC}$, $AD = 3$ cm. , $AE = 2$ cm. , $BC = 12$ cm.

, $BD = (x + 1)$ cm. , $EC = (x - 1)$ cm. and $DE = y$ cm.

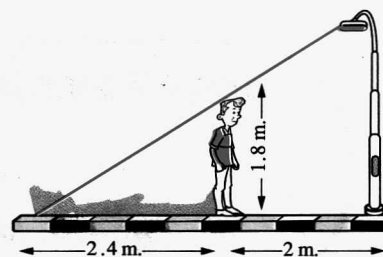
Find the length of each of : \overline{AB} , \overline{EC} and \overline{DE}



« 9 cm. , 4 cm. , 4 cm. »

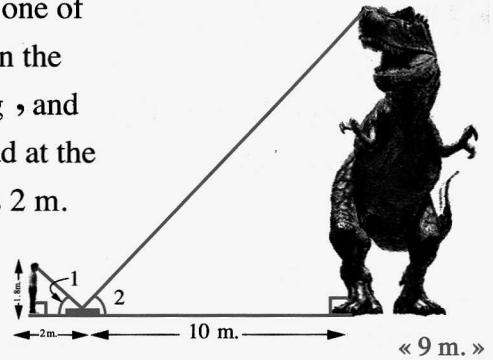
Life Applications

26 A man of height 1.8 m. stands in front of a lamppost at a distance of 2 m. from its base. If the length of the man's shade (when the lamppost is turned on) is 2.4 m. , find the height of the lamppost.



« 3.3 m. »

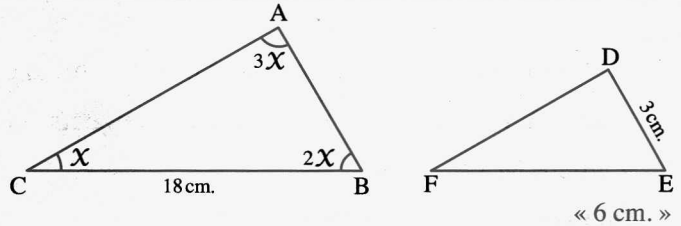
- 27** A man wanted to know the height of a dinosaur at one of the museums , then he put a mirror horizontally on the land at a distance of 10 m. from the dinosaur's leg , and he moved back till he could see the dinosaur's head at the mirror , then the distance that he moved back was 2 m. If the height of the man is 1.8 m. , what is the height of the dinosaur , given that :
 $m(\angle 1) = m(\angle 2)$?



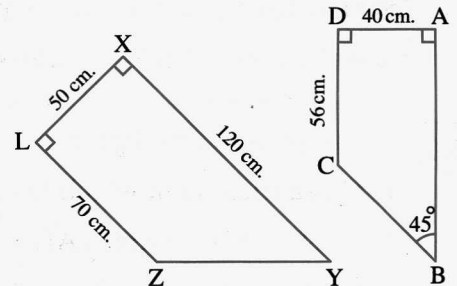
For excellent pupils

- 28** ABC and DEF are two triangles in which , $AB = AC$ and $DE = DF$
 If : $\frac{AB}{BC} = \frac{DE}{EF}$, prove that they are similar.

- 29** In the opposite figure :
 If $\triangle ABC \sim \triangle DEF$
 , $BC = 18$ cm. and $DE = 3$ cm.
 Find the length of : \overline{EF}



- 30** In the opposite figure :
 $AD = 40$ cm. , $DC = 56$ cm. , $XL = 50$ cm. ,
 $XY = 120^\circ$ cm. , $LZ = 70$ cm. , $m(\angle B) = 45^\circ$
 and $m(\angle A) = m(\angle D) = m(\angle X) = m(\angle L) = 90^\circ$
 Prove that : The polygon ABCD \sim the polygon XYZL



Answer the models of the mid-term examination

in Geometry

in El-Moasser notebook





Worksheet 5 till lesson (5) unit (4)

Answer the following questions :

1 Choose the correct answer from the given ones :

- (1) A rhombus whose diagonals lengths are 6 cm. and 8 cm. , then its area = cm²
 (a) 48 (b) 24 (c) 14 (d) 12
- (2) The area of the square whose diagonal length is 4 cm. = cm²
 (a) 16 (b) 8 (c) 24 (d) 18
- (3) The area of the rectangle whose dimensions are 3 cm. , 8 cm. the area of the triangle whose base length is 8 cm. and its corresponding height is 6 cm.
 (a) < (b) > (c) = (d) ≠
- (4) If the area of a parallelogram is 45 cm² and its height is 5 cm. , then the length of the corresponding base to this height = cm.
 (a) 50 (b) 40 (c) 5 (d) 9

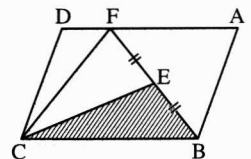
2 Complete the following :

- (1) The trapezium in which the lengths of the two parallel bases are 5 cm. and 7 cm. and its height is 4 cm. , then its area = cm²
- (2) The median of a triangle divides its surface into
- (3) Triangles of bases equal in length and lying between two parallel straight lines are

(4) **In the opposite figure :**

ABCD is a parallelogram ,
 E is the midpoint of \overline{BF} ,

then the area of ΔBEC = the area of the parallelogram ABCD

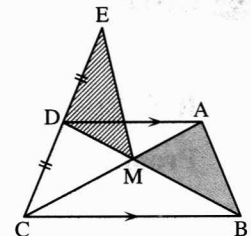


3 In the opposite figure :

$\overline{AD} \parallel \overline{BC}$, $\overline{AC} \cap \overline{BD} = \{M\}$,
 $E \in \overline{CD}$

such that : $CD = DE$

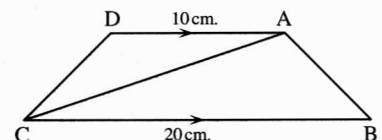
Prove that : the area of ΔMDE = the area of ΔAMB



4 In the opposite figure :

ABCD is a trapezium in which
 $\overline{AD} \parallel \overline{BC}$, $AD = 10$ cm. , $BC = 20$ cm. ,
 the area of $\Delta ABC = 40$ cm²

Find by proof : the area of the trapezium ABCD





Worksheet 6 till lesson (1) unit (5)

Answer the following questions :

1 Choose the correct answer from the given ones :

- (1) If the ratio between the side lengths of two squares is one and if the perimeter of one of them is 8 cm. , then the area of the other square equals cm^2
 (a) 64 (b) 2 (c) 8 (d) 4
- (2) The lengths of the two parallel bases of a trapezium are 14 cm. and 10 cm. and its area is 120 cm^2 , then its height = cm.
 (a) 5 (b) 10 (c) 20 (d) 30
- (3) If the ratio of magnification between two similar triangles is 3 : 2 and the length of a side from the greatest triangle = 15 cm. , then the length of the corresponding side in the smallest triangle = cm.
 (a) 5 (b) 10 (c) 6 (d) 9
- (4) If the area of a square is 18 cm^2 , then its diagonal length = cm.
 (a) 36 (b) 12 (c) 9 (d) 8

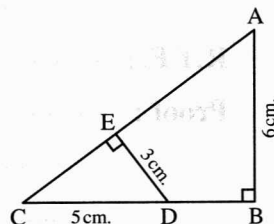
2 Complete the following :

- (1) If the lengths of two adjacent sides in a parallelogram are 8 cm. and 16 cm. and its greatest height = 5 cm. , then its area = cm^2
- (2) A rhombus , the lengths of its two diagonals are $X \text{ cm.}$ and $y \text{ cm.}$, then its area = cm^2
- (3) Two triangles are similar if the lengths of their corresponding sides are or the measures of their corresponding angles are
- (4) ABCD is a parallelogram , $E \in \overline{CD}$, if the area of $\triangle AEB = 20 \text{ cm}^2$, then the area of $\square ABCD = \dots\dots\dots \text{cm}^2$

3 In the opposite figure :

$\triangle ABC$ is right-angled at B ,
 $\overline{DE} \perp \overline{AC}$, $AB = 6 \text{ cm.}$, $ED = 3 \text{ cm.}$, $CD = 5 \text{ cm.}$

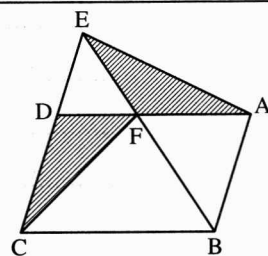
Prove that : $\triangle CED \sim \triangle CBA$
 and find the length of \overline{AC} and the length of \overline{BD}



4 In the opposite figure :

ABCD is a parallelogram ,
 $E \in \overline{CD}$, $\overline{AD} \cap \overline{BE} = \{F\}$

Prove that :
 the area of $\triangle AFE =$ the area of $\triangle CDF$





- ∴ the area of $\Delta XBC = \frac{1}{3}$ the area of ΔABC
 Similarly we can prove that :
 the area of $\Delta YBC = \frac{1}{3}$ the area of ΔABC
 ∴ the area of $\Delta XBC = \frac{1}{3}$ the area of ΔYBC but they
 have the common base \overline{BC} and on one side of it.
 ∴ $\overline{XY} \parallel \overline{BC}$ (Q.E.D.)

Answers of Exercise 5

- 1**
- its height, the lengths of its diagonals
 - its side, the square of the length of its diagonal
 - $\frac{1}{2}$ of the sum of lengths of its two parallel bases
 - its height, the middle base.
 - Congruent (equal in measure)
 - Congruent (equal in length)

- 2**
- The area = $6 \times 5 = 30 \text{ cm}^2$
 - The area = $12 \times 8 = 96 \text{ cm}^2$
 - The area = $\frac{1}{2} \times 8 \times 10 = 40 \text{ cm}^2$
 - The area = $\frac{1}{2} \times 24 \times 10 = 120 \text{ cm}^2$
 - The area = $\frac{1}{2} \times 10 \times 10 = 50 \text{ cm}^2$
 - The area = $\frac{1}{2} \times 8 \times 8 = 32 \text{ cm}^2$
 - The area = $\frac{(6+8)}{2} \times 12 = 84 \text{ cm}^2$
 - The area = $\frac{(8+10)}{2} \times 5 = 45 \text{ cm}^2$
 - The area = $7 \times 6 = 42 \text{ cm}^2$
 - The area = $12 \times 8 = 96 \text{ cm}^2$

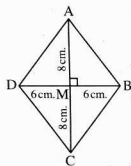
- 3**
- | | | | | |
|-----|-----|-----|-----|------|
| 1 a | 2 c | 3 a | 4 b | 5 b |
| 6 c | 7 b | 8 b | 9 c | 10 b |

- 4**
- The area of the rectangle = $2 \times 9 = 18 \text{ cm}^2$
 The area of the square = 18 cm^2
 ∴ $\frac{1}{2}$ (the length of the diagonal)² = 18
 ∴ (the length of the diagonal)² = 36
 ∴ the length of the diagonal = 6 cm.

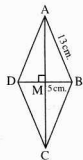
- 5**
- ∴ The area of the rhombus = $\frac{1}{2} \times 8 \times 16 = 64 \text{ m}^2$

- ∴ The area of the square = 64 m^2
 ∴ The side length of the square = 8 m.
 ∴ The perimeter of the square = $8 \times 4 = 32 \text{ m}$.
- 6**
- ∴ The area of the rhombus = $\frac{1}{2} \times 18 \times 24 = 216 \text{ m}^2$
 ∴ The area of the trapezium = 216 m^2
 ∴ The length of the middle base = $\frac{216}{12} = 18 \text{ m}$.

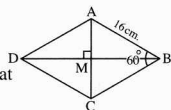
- 7**
- From the figure :
- $(AB)^2 = (6)^2 + (8)^2 = 100$
 ∴ $AB = 10 \text{ cm}$.
 ∴ The side length = 10 cm.
 ∴ The area of the rhombus
 = $\frac{1}{2} \times 12 \times 16 = 96 \text{ cm}^2$
 ∴ The height = $\frac{96}{10} = 9.6 \text{ cm}$.



- 8**
- ∴ The perimeter of the rhombus = 52 cm.
 ∴ The side length of the rhombus = $\frac{52}{4} = 13 \text{ cm}$.
 Drawing the rhombus as shown in the figure such that $BD = 10 \text{ cm}$.
 ∴ $BM = 5 \text{ cm}$.
 ∴ $\overline{AC} \perp \overline{BD}$
 ∴ $(AM)^2 = (AB)^2 - (BM)^2$
 = $169 - 25 = 144$
 ∴ $AM = 12 \text{ cm}$.
 ∴ $AC = 24 \text{ cm}$.
 The area of the rhombus = $\frac{1}{2} \times 10 \times 24 = 120 \text{ cm}^2$.



- 9**
- ∴ The perimeter of the rhombus = 64 cm.
 ∴ The side length of the rhombus = $\frac{64}{4} = 16 \text{ cm}$.
 Drawing the rhombus as shown in the figure such that $AB = 16 \text{ cm}$.
 ∴ $m(\angle B) = 60^\circ$
 ∴ The diagonal of the rhombus bisects the two angles joining their vertices.
 ∴ $m(\angle ABM) = 30^\circ$



- ∴ The diagonals of the rhombus are perpendicular
- ∴ $m(\angle AMB) = 90^\circ$
- ∴ In the right-angled triangle, the length of the side opposite to the angle of measure $30^\circ = \frac{1}{2}$ the length of the hypotenuse.
- ∴ $AM = \frac{1}{2} \times 16 = 8$ cm.
- ∴ $AC = 2 \times 8 = 16$ cm.
- ∴ $m(\angle AMB) = 90^\circ$
- ∴ $(BM)^2 = (AB)^2 - (AM)^2$
- ∴ $(BM)^2 = 256 - 64 = 192$
- ∴ $BM = \sqrt{192} = 8\sqrt{3}$
- ∴ $BD = 2 \times 8\sqrt{3} = 16\sqrt{3}$ cm.
- ∴ The area of the rhombus = $\frac{1}{2} \times 16 \times 16\sqrt{3}$
= $128\sqrt{3}$ cm²

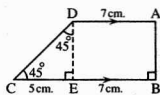
10

1 Construction :

Draw $\overline{DE} \perp \overline{BC}$

Proof :

- ∴ $m(\angle C) = 45^\circ$
- ∴ $m(\angle CDE) = 180^\circ - (90^\circ + 45^\circ) = 45^\circ$
- ∴ $DE = EC = 5$ cm.
- ∴ The area of the trapezium = $\frac{1}{2} (7 + 12) \times 5$
= 47.5 cm²

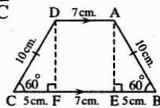


2 Construction :

Draw $\overline{AE} \perp \overline{BC}$, $\overline{DF} \perp \overline{BC}$

Proof :

- ∴ $m(\angle CDF) = 180^\circ - (90^\circ + 60^\circ) = 30^\circ$
- ∴ In the right-angled triangle, the length of the side opposite to the angle of measure $30^\circ = \frac{1}{2}$ the length of the hypotenuse.
- ∴ $FC = 5$ cm.
- ∴ $(DF)^2 = (DC)^2 - (FC)^2 = 100 - 25 = 75$
- ∴ $DF = 5\sqrt{3}$ cm. similarly $BE = 5$ cm.
- ∴ $BC = 5 + 7 + 5 = 17$ cm.
- ∴ The area of the trapezium = $\frac{1}{2} (7 + 17) \times 5\sqrt{3} = \frac{1}{2} \times 24 \times 5\sqrt{3} = 60\sqrt{3}$ cm²



11

Let the length of the smallest diagonal be $3X$ cm.

- ∴ The length of the greatest diagonal = $4X$ cm.
- ∴ $3X = 9$ ∴ $X = 3$
- ∴ The length of the greatest diagonal = $4 \times 3 = 12$ cm.
- ∴ The area of the rhombus = $\frac{1}{2} \times 9 \times 12 = 54$ cm²

12

Let the length of the smallest diagonal be $5X$ cm.

- ∴ The length of the greatest diagonal = $8X$ cm.
- ∴ The area = $\frac{1}{2} \times 5X \times 8X = 20X^2$
- ∴ $20X^2 = 2000$ ∴ $X^2 = 100$ ∴ $X = 10$ cm.
- ∴ The lengths of the two diagonals are 50 cm. and 80 cm.

13

Let the lengths of the two bases be $2X$ cm. and $3X$ cm.

- ∴ $\frac{1}{2} (2X + 3X) = 30$ ∴ $5X = 60$ ∴ $X = 12$
- ∴ The lengths of the two bases are 24 cm. and 36 cm.
- The area of the trapezium = $30 \times 24 = 720$ cm²

14

Let the lengths of the two parallel bases be $3X$ cm. and $2X$ cm.

- ∴ The area = $\frac{1}{2} (3X + 2X) \times 12$
- ∴ $\frac{1}{2} (3X + 2X) \times 12 = 180$
- ∴ $30X = 180$ ∴ $X = 6$ cm.
- ∴ The lengths of the two bases are 18 cm. and 12 cm.

15

Let the lengths of the two parallel bases and the height be $3X$ cm., $2X$ cm. and $4X$ cm.

- ∴ The area = $\frac{1}{2} (3X + 2X) \times 4X$
- ∴ $10X^2 = 4000$ ∴ $X^2 = 400$ ∴ $X = 20$ cm.
- ∴ The lengths of the two parallel bases are 60 cm., 40 cm.
- ∴ The length of the middle base = $\frac{60 + 40}{2} = 50$ cm.

16

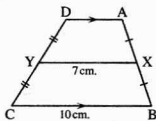
the area of the piece of land which is in the shape of a trapezium = $\frac{1}{2} (76 + 64) \times 45 = 3150$ m²
and the area of the other piece of land which is in the shape of a rhombus = $\frac{1}{2} \times 74 \times 90 = 3330$ m²

- ∴ The area of the rectangular piece of land = $3150 + 3330 = 6480$ m²
- Let the length of the rectangular piece be $5X$
- ∴ Its width = $4X$ m. ∴ $5X \times 4X = 6480$

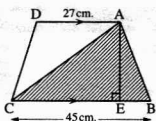


∴ $x^2 = 324$ ∴ $x = \sqrt{324} = 18$ m.
 ∴ The length = $5 \times 18 = 90$ m.
 The width = $4 \times 18 = 72$ m.

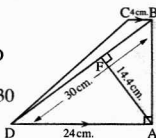
17
 ∴ $\frac{AD + BC}{2} = XY$
 ∴ $\frac{AD + 10}{2} = 7$
 ∴ $AD = 4$ cm.
 ∴ The area = the length of the middle base \times the perpendicular distance between the two parallel bases \overline{AD} and \overline{BC}
 ∴ The perpendicular distance between the two parallel bases \overline{AD} and $\overline{BC} = \frac{35}{7} = 5$ cm.



18
 ∴ the area of $\triangle ABC$
 $= \frac{1}{2} BC \times AE$
 ∴ $225 = \frac{1}{2} \times 45 \times AE$
 ∴ $AE = 10$ cm.
 The area of the trapezium
 $= \frac{1}{2} (27 + 45) \times 10 = 360$ cm²

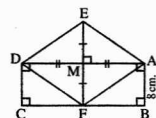


19
 ∴ the area of $\triangle ABD$
 $= \frac{1}{2} AB \times AD = \frac{1}{2} AF \times BD$
 $= \frac{1}{2} AB \times 24 = \frac{1}{2} \times 14.4 \times 30$
 ∴ $AB = 18$ cm.
 The area of the trapezium ABCD
 $= \frac{4 + 24}{2} \times 18 = 252$ cm²



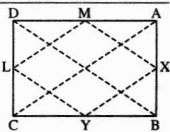
20
 The area of the figure ABCDE = the area of $\triangle ALE$ + the area of $\triangle ELD$ + the area of $\triangle AMB$ + the area of $\triangle CDN$ + the area of the trapezium BCNM
 $= \frac{1}{2} \times 2 \times 3$
 $+ \frac{1}{2} \times 8 \times 3 + \frac{1}{2} \times 5.6 \times 4 + \frac{1}{2} \times 3 \times 4 + \frac{5.6 + 4}{2} \times 3$
 $= 3 + 12 + 11.2 + 6 + 14.4 = 46.6$ cm²

21
 ∴ ABCD is a rectangle ,
 $\overline{MF} \perp \overline{AD}$
 ∴ $AB = MF = 8$ cm.

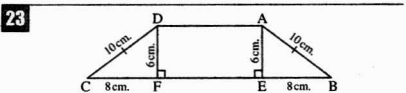


∴ M is the midpoint of \overline{EF}
 ∴ $EF = 2 \times 8 = 16$ cm. (1)
 ∴ the area of the rectangle ABCD = $AB \times BC$
 ∴ $144 = 8 \times BC$
 ∴ $BC = \frac{144}{8} = 18$ cm.
 ∴ $AD = 18$ cm. (2)
 ∴ In the figure AFDE : the two diagonals \overline{AD} and \overline{EF} bisect each other, $\overline{FE} \perp \overline{AD}$
 ∴ The figure AFDE is a rhombus.
 From (1) and (2) we find that :
 The area of the figure AFDE = $\frac{1}{2} EF \times AD$
 $= \frac{1}{2} \times 16 \times 18 = 144$ cm²

22
 1 ∴ X and Y are the midpoints of \overline{AB} and \overline{BC}
 ∴ $\overline{XY} \parallel \overline{AC}$
 ∴ $XY = \frac{1}{2} AC$
 ∴ L and M are the midpoints of \overline{DC} and \overline{DA}
 ∴ $\overline{LM} \parallel \overline{AC}$, $LM = \frac{1}{2} AC$ (2)
 From (1) and (2) :
 ∴ $\overline{LM} \parallel \overline{XY}$, $LM = XY$
 ∴ XYLM is a parallelogram. (3)
 ∴ $XY = \frac{1}{2} AC$, $XM = \frac{1}{2} BD$
 , but $AC = DB$ (two diagonals in the rectangle ABCD)
 ∴ $XY = XM$ (4)



From (3) and (4) :
 ∴ The figure XYLM is a rhombus.
 ∴ The area of the rhombus
 $= \frac{1}{2}$ the product of the lengths of its two diagonals
 $= \frac{1}{2} XL \times YM = \frac{1}{2} \times 8 \times 6 = 24$ cm²
 2 ∴ $(AC)^2 = (AB)^2 + (BC)^2$
 ∴ $(AC)^2 = 36 + 64 = 100$
 ∴ $AC = 10$ cm. ∴ $XY = \frac{1}{2} AC$
 ∴ $XY = \frac{1}{2} \times 10 = 5$ cm.
 ∴ the height of the rhombus XYLM = $\frac{24}{5} = 4.8$ cm.



- ∴ The area of the trapezium = 120 cm^2 and the length of the middle base = 20 cm .
- ∴ Its height = $\frac{120}{20} = 6 \text{ cm}$.
- ∴ The perimeter of the trapezium = 60 cm , and the length of the middle base = 20 cm .
- ∴ $AD + BC = 2 \times 20 = 40 \text{ cm}$.
- ∴ $AB + DC = 60 - 40 = 20 \text{ cm}$.
- ∴ $AB = DC = \frac{20}{2} = 10 \text{ cm}$.
- From the figure :
- ∴ $(BE)^2 = (AB)^2 - (AE)^2 = 100 - 36 = 64$
- ∴ $BE = 8 \text{ cm}$, similarly $FC = 8 \text{ cm}$.
- ∴ $AD = FE$, ∴ $AD + BC = 40 \text{ cm}$.
- ∴ $AD + FE + 8 + 8 = 40$ ∴ $2 AD = 40 - 16$
- ∴ $2 AD = 24$ ∴ $AD = 12 \text{ cm}$.
- ∴ $BC = 12 + 8 + 8 = 28 \text{ cm}$.

24

- Let $BD = 5 X \text{ cm}$, $AC = 6 X \text{ cm}$.
- ∴ $5 X + 6 X = 33$ ∴ $11 X = 33$ ∴ $X = 3$
- ∴ $BD = 15 \text{ cm}$, $AC = 18 \text{ cm}$.
- ∴ $ME = \frac{2}{3} MA$ ∴ $ME = \frac{2}{3} \times 9 = 6 \text{ cm}$.
- the area of $\triangle EBD = \frac{1}{2} BD \times EM$
- $= \frac{1}{2} \times 15 \times 6 = 45 \text{ cm}^2$ (1)
- the area of the rhombus $ABCD = \frac{1}{2} BD \times AC$
- $= \frac{1}{2} \times 15 \times 18 = 135 \text{ cm}^2$ (2)
- From (1) and (2) :
- ∴ The area of the shaded part = $135 - 45 = 90 \text{ cm}^2$

Answers of the general exercises on unit four

First : Completion questions

- 1 30 2 equal 3 40 cm^2
- 4 their vertices lie on a straight line parallel to this base.
- 5 one is carrying this base are equal in area.
- 6 two triangular surfaces equal in area.
- 7 base length \times its corresponding height.
- 8 area 9 $\frac{1}{2} X y \text{ cm}$ 10 24 cm^2
- 11 equal 12 6 cm 13 7 cm .
- 14 20 cm^2 15 10 16 12 cm .
- 17 6

Second : Multiple choice questions

- 1 b 2 c 3 a
- 4 d 5 a 6 c
- 7 c 8 d 9 c
- 10 a 11 b 12 d
- 13 b

Third : Essay questions

- 1 15 cm^2 2 prove by yourself
-
- 3 12 cm .
-
- 4 , 5 Prove by yourself
-
- 6 24 cm .
-
- 7 : 9 Prove by yourself
-
- 10 $4 \frac{1}{2} \text{ cm}$.



Answers of Unit Five

Answers of Exercise 6

1

- | | |
|----------------------------------|-----------------|
| 1 angles | 2 side lengths |
| 3 similar | 4 side lengths. |
| 5 similar | |
| 6 equal in measure, proportional | |
| 7 congruent | 8 3 : 4 |

2

- | | | | |
|-----|-----|-----|-----|
| 1 b | 2 d | 3 d | 4 b |
| 5 d | 6 b | 7 c | |

3

$$\begin{aligned} \therefore \triangle ABC \sim \triangle XYZ & \quad \therefore \frac{AC}{XY} = \frac{BC}{YZ} = \frac{AB}{XZ} \\ \therefore \frac{6}{XY} = \frac{10}{5} = \frac{AC}{7} & \quad \therefore AC = \frac{7 \times 10}{5} = 14 \text{ cm.} \\ \therefore XY = \frac{5 \times 6}{10} = 3 \text{ cm.} & \quad \text{(the req.)} \end{aligned}$$

4

In $\triangle ABC$ and ZXY :

$$\begin{aligned} \therefore m(\angle A) = m(\angle Z), m(\angle C) = m(\angle Y) \\ \therefore m(\angle B) = m(\angle X) & \quad \therefore \triangle XYZ \sim \triangle BCA \\ \therefore \frac{XY}{BC} = \frac{YZ}{CA} & \quad \therefore \frac{XY}{16} = \frac{3}{12} \\ \therefore XY = \frac{3 \times 16}{12} = 4 \text{ cm.} \\ \therefore \text{The perimeter of } \triangle XYZ = 2 + 3 + 4 = 9 \text{ cm} & \quad \text{(the req.)} \end{aligned}$$

5

$$\begin{aligned} \therefore \frac{AB}{XY} = \frac{3}{6} = \frac{1}{2}, \frac{AC}{XZ} = \frac{5}{10} = \frac{1}{2}, \frac{BC}{YZ} = \frac{7}{14} = \frac{1}{2} \\ \therefore \frac{AB}{XY} = \frac{AC}{XZ} = \frac{BC}{YZ} \\ \therefore \triangle ABC \sim \triangle XYZ & \quad \text{(the first req.)} \\ \therefore m(\angle B) + m(\angle C) = 60^\circ \\ \therefore m(\angle A) = 120^\circ \\ \therefore m(\angle A) = m(\angle X) \\ \therefore m(\angle X) = 120^\circ & \quad \text{(the second req.)} \end{aligned}$$

6

$$\begin{aligned} \therefore \triangle AXY \sim \triangle ABC \\ \therefore m(\angle AXY) = m(\angle ABC) \\ \text{but they are corresponding.} \end{aligned}$$

$$\begin{aligned} \therefore \overline{XY} \parallel \overline{BC} & \quad \text{(Q.E.D. 1)} \\ \therefore \triangle AXY \sim \triangle ABC \\ \therefore \frac{AY}{AC} = \frac{XY}{BC} & \quad \therefore \frac{AY}{AC} = \frac{1}{2} \\ \therefore Y \text{ is the midpoint of } \overline{AC} & \quad \text{(Q.E.D. 2)} \end{aligned}$$

7

1 $\therefore \overline{DE} \parallel \overline{BC}$, \overline{DB} is a transversal to them

$$\begin{aligned} \therefore m(\angle B) = m(\angle ADE) \text{ (corresponding angles)} \\ \text{Similarly } m(\angle C) = m(\angle AED) \\ \text{(corresponding angles)} \\ \angle A \text{ is a common angle.} \\ \therefore \triangle ABC \sim \triangle ADE & \quad \therefore \frac{DE}{BC} = \frac{AE}{AC} \\ \therefore \frac{8}{X} = \frac{9}{21} & \quad \therefore X = \frac{8 \times 21}{9} = 18 \frac{2}{3} \text{ cm.} \end{aligned}$$

2 $\therefore \overline{DE} \parallel \overline{BC}$, \overline{DB} is a transversal to them.

$$\begin{aligned} \therefore m(\angle B) = m(\angle ADE) \text{ (corresponding angles)} \\ \text{Similarly } m(\angle C) = m(\angle AED) \\ \text{(corresponding angles)} \\ \angle A \text{ is a common angle.} \\ \therefore \triangle ABC \sim \triangle ADE \\ \therefore \frac{AB}{AD} = \frac{AC}{AE} & \quad \therefore \frac{7}{5} = \frac{AC}{8} \\ \therefore AC = \frac{7 \times 8}{5} = 11.2 \text{ cm.} \\ \therefore X = 11.2 - 8 = 3.2 \text{ cm.} \end{aligned}$$

3 $m(\angle B) = m(\angle ADE)$ (corresponding angles)

$$\begin{aligned} \therefore m(\angle C) = m(\angle AED) \text{ (corresponding angles)} \\ \therefore \angle A \text{ is common in } \triangle ADE \text{ and } \triangle ABC \\ \therefore \triangle ADE \sim \triangle ABC \\ \therefore \frac{AD}{AB} = \frac{DE}{BC} & \quad \therefore \frac{4}{x+4} = \frac{5}{15} \quad \therefore \frac{4}{x+4} = \frac{1}{3} \\ \therefore X + 4 = 12 & \quad \therefore X = 8 \text{ cm.} \end{aligned}$$

4 $m(\angle DEB) = 180^\circ - 110^\circ = 70^\circ$

$$\begin{aligned} \therefore \text{In } \triangle DEB, \angle C B : \\ m(\angle DEB) = m(\angle C), \angle B \text{ is common} \\ \therefore m(\angle BDE) = m(\angle A) & \quad \therefore \triangle DEB \sim \triangle ABC \\ \therefore \frac{DE}{AC} = \frac{EB}{CB} & \quad \therefore \frac{X}{5} = \frac{4}{8} \\ \therefore X = \frac{5 \times 4}{8} = 2 \frac{1}{2} \text{ cm.} \end{aligned}$$

5 In $\triangle ABE$ and DCE

$$\begin{aligned} m(\angle A) = m(\angle D), m(\angle AEB) = m(\angle DEC) \text{ (V.O.A)} \\ \therefore m(\angle B) = m(\angle C) & \quad \therefore \triangle ABE \sim \triangle DCE \\ \therefore \frac{AB}{DC} = \frac{AE}{DE} & \quad \therefore \frac{14}{34} = \frac{X}{22} \\ \therefore X = \frac{14 \times 22}{34} = 9 \frac{1}{17} \text{ cm.} \end{aligned}$$

6 In ΔABC and EDF :

$$\therefore m(\angle A) = m(\angle E), m(\angle C) = m(\angle F)$$

$$\therefore m(\angle B) = m(\angle D)$$

$$\therefore \Delta ABC \sim \Delta EDF \quad \therefore \frac{AC}{EF} = \frac{BC}{DF}$$

$$\therefore \frac{6}{x} = \frac{8}{12} \quad \therefore x = \frac{6 \times 12}{8} = 9 \text{ cm.}$$

8

\therefore The polygon $ABCD \sim$ the polygon $XYZL$

$$\therefore \frac{AB}{XY} = \frac{BC}{YZ} = \frac{CD}{ZL} = \frac{DA}{LX} \quad \therefore \frac{10.5}{XY} = \frac{8}{YZ} = \frac{5}{ZL} = \frac{6}{3}$$

$$\therefore XY = \frac{3 \times 10.5}{6} = 5.25 \text{ cm.} \quad (\text{the first req.})$$

$$\therefore YZ = \frac{8 \times 3}{6} = 4 \text{ cm.} \quad (\text{the second req.})$$

$$\therefore ZL = \frac{5 \times 3}{6} = 2.5 \text{ cm.} \quad (\text{the third req.})$$

9

\therefore The figure $ABCD \sim$ the figure $XYZL$

$$\therefore m(\angle D) = m(\angle L) \quad \therefore m(\angle D) = 80^\circ$$

$$m(\angle BCD) = 360^\circ - (125^\circ + 70^\circ + 80^\circ) = 85^\circ \quad (\text{the first req.})$$

$$\therefore \frac{AD}{XL} = \frac{BC}{YZ} \quad \therefore \frac{6}{XL} = \frac{8}{2.4}$$

$$\therefore XL = \frac{2 \times 2.4}{4} = 1.8 \text{ cm.} \quad (\text{the second req.})$$

$$\therefore \text{The ratio of enlargement} = \frac{8}{2.4} = \frac{10}{3} \quad (\text{the third req.})$$

\therefore The perimeter of the figure $ABCD$

The perimeter of the figure $XYZL$

= the ratio of enlargement

$$\therefore \frac{26}{\text{The perimeter of the figure } XYZL} = \frac{10}{3}$$

$$\therefore \text{The perimeter of the figure } XYZL = \frac{26 \times 3}{10} = 7.8 \text{ cm.} \quad (\text{the fourth req.})$$

10

$\therefore \overline{AC} \parallel \overline{ED}$, \overline{AD} is a transversal to them.

$$\therefore m(\angle A) = m(\angle D) \quad (\text{alternate angles}) \quad (1)$$

$\therefore \overline{AC} \parallel \overline{ED}$, \overline{CE} is a transversal to them.

$$\therefore m(\angle C) = m(\angle E) \quad (\text{alternate angles}) \quad (2)$$

$$\therefore m(\angle ABC) = m(\angle EBD) \quad (\text{V.O.A}) \quad (3)$$

From (1), (2), (3):

$$\therefore \Delta ABC \sim \Delta DBE \quad (\text{the first req.})$$

$$\therefore \frac{AB}{DB} = \frac{BC}{BE} = \frac{CA}{ED} \quad \therefore \frac{3}{6} = \frac{BC}{8} = \frac{5}{ED}$$

$$\therefore BC = 4 \text{ cm.}, DE = 10 \text{ cm.} \quad (\text{the second req.})$$

$$\text{the ratio of enlargement} = \frac{DB}{AB} = \frac{6}{3} = 2 \quad (\text{the third req.})$$

11

$\therefore \overline{AF} \parallel \overline{DC}$, \overline{BC} is a transversal to them.

$$\therefore m(\angle FBC) = m(\angle C) \quad (\text{alternate angles})$$

$\therefore \overline{AF} \parallel \overline{DC}$, \overline{FE} is a transversal to them.

$$\therefore m(\angle F) = m(\angle XEC) \quad (\text{alternate angles})$$

$$\therefore m(\angle BXF) = m(\angle CXE) \quad (\text{V.O.A})$$

$$\therefore \Delta ECX \sim \Delta FBX \quad (\text{the first req.})$$

$$\therefore AB = DC \quad (\text{properties of } \square) \quad \therefore AB = 6 \text{ cm.}$$

$\therefore B$ is the midpoint of \overline{AF}

$$\therefore AB = BF = 6 \text{ cm.}$$

$$\therefore \frac{EC}{FB} = \frac{CX}{BX} \quad \therefore \frac{2}{6} = \frac{3}{BX} \quad \therefore BX = 9 \text{ cm.}$$

$$\therefore BC = 12 \text{ cm.} \quad \therefore BC = AD \quad (\text{properties of } \square)$$

$$\therefore AD = 12 \text{ cm.} \quad (\text{the second req.})$$

12

In ΔABC , ΔAED :

$\therefore m(\angle B) = m(\angle AED)$, $\angle A$ is a common angle

$$\therefore m(\angle C) = m(\angle ADE)$$

$$\therefore \Delta ABC \sim \Delta AED \quad (\text{the first req.})$$

$$\therefore \frac{AD}{AC} = \frac{AE}{AB} \quad \therefore \frac{3}{AC} = \frac{4.5}{9}$$

$$\therefore AC = \frac{3 \times 9}{4.5} = 6 \text{ cm.} \quad \therefore EC = 6 - 4.5 = 1.5 \text{ cm.} \quad (\text{the second req.})$$

13

$\therefore \overline{AB} \parallel \overline{XY}$, \overline{BC} is a transversal to them.

$$\therefore m(\angle ABC) = m(\angle XYZ) \quad (\text{corresponding angles}) \quad (1)$$

$\therefore \overline{AC} \parallel \overline{XZ}$, \overline{BC} is a transversal to them.

$$\therefore m(\angle ACB) = m(\angle XZY) \quad (\text{corresponding angles}) \quad (2)$$

\therefore In ΔABC , ΔXYZ :

$$m(\angle A) = m(\angle X) \quad (3)$$

From (1), (2) and (3): $\therefore \Delta ABC \sim \Delta XYZ$

$$\therefore \frac{AB}{XY} = \frac{BC}{YZ} = \frac{CA}{ZX} \quad \therefore \frac{3}{XY} = \frac{BC}{10} = \frac{7}{14} \quad (XZ = 2AC)$$

$$\therefore XY = 6 \text{ cm.}, BC = 5 \text{ cm.} \quad (\text{the req.})$$

14

$$\therefore \Delta ADE \sim \Delta ABC \quad \therefore \frac{AD}{AB} = \frac{AE}{AC} = \frac{DE}{BC}$$

$$\therefore \frac{AD}{DB} = \frac{1}{3} \quad \therefore \frac{AD}{AB} = \frac{1}{4}$$

Geometry



$$\therefore \frac{AE}{AC} = \frac{1}{4} \quad (\text{the first req.})$$

$$\therefore \frac{DE}{BC} = \frac{AE}{AC} \quad \therefore \frac{4}{BC} = \frac{1}{4}$$

$$\therefore BC = 16 \text{ cm.} \quad (\text{the second req.})$$

15

In $\Delta \triangle AED \sim \triangle ABC$:

$\therefore m(\angle AED) = m(\angle B)$, $\angle A$ is a common angle.

$\therefore m(\angle ADE) = m(\angle C)$

$\therefore \Delta AED \sim \Delta ABC$ (the first req.)

$$\therefore \frac{AE}{AB} = \frac{AD}{AC} \quad \therefore \frac{4}{AB} = \frac{3}{9} \quad \therefore AB = 12 \text{ cm.}$$

$\therefore BD = 12 - 3 = 9 \text{ cm.}$

$m(\angle ADE) = m(\angle C) = 93^\circ$ (the second req.)

16

$\therefore \Delta ABD \sim \Delta ACB$

$\therefore m(\angle DBA) = m(\angle BCA)$

$\therefore m(\angle DBA) = 35^\circ$ (1)

In ΔABC :

$\therefore m(\angle ABC) = 180^\circ - (70^\circ + 35^\circ) = 75^\circ$ (2)

From (1), (2):

$\therefore m(\angle DBC) = 75^\circ - 35^\circ = 40^\circ$ (the first req.)

$$\frac{AB}{AC} = \frac{BD}{CB} = \frac{AD}{AB} \quad \therefore \frac{6}{9} = \frac{AD}{6} \quad \therefore AD = 4 \text{ cm.}$$

$\therefore CD = 9 - 4 = 5 \text{ cm.}$ (the second req.)

17

In $\Delta \triangle ABC, \triangle CDB$:

$m(\angle A) = m(\angle BCD)$ (1)

In ΔABC : $\therefore AB = AC$

$\therefore m(\angle DBC) = m(\angle ACB)$ (2)

In ΔBCD : $\therefore CB = CD$

$\therefore m(\angle BDC) = m(\angle CBA)$ (3)

From (1), (2) and (3):

$\therefore \Delta ABC \sim \Delta CDB$ (the first req.)

$$\therefore \frac{AB}{CD} = \frac{BC}{DB} \quad \therefore \frac{10}{5} = \frac{5}{DB} \quad \therefore DB = 2.5 \text{ cm.}$$

$\therefore AD = 10 - 2.5 = 7.5 \text{ cm.}$ (the second req.)

18

In ΔABC : $\therefore m(\angle B) = 90^\circ$

$\therefore (AC)^2 = (AB)^2 + (BC)^2 = 64 + 36 = 100$

$\therefore AC = 10 \text{ cm.}$

$\therefore \therefore D$ is the midpoint of \overline{AB}

$\therefore AD = DB = 4 \text{ cm.}$

In $\Delta \triangle AED \sim \triangle ABC$:

$m(\angle AED) = m(\angle B) = 90^\circ$ (given)

$\angle A$ is common

$\therefore m(\angle ADE) = m(\angle ACB)$

$\therefore \Delta AED \sim \Delta ABC$

$$\therefore \frac{DE}{CB} = \frac{AD}{AC} \quad \therefore \frac{DE}{6} = \frac{4}{10}$$

$\therefore DE = \frac{6 \times 4}{10} = 2.4 \text{ cm.}$ (The req.)

19

In $\Delta \triangle BAC \sim \triangle DAB$:

$m(\angle ABC) = m(\angle ADB) = 90^\circ$

$\angle A$ is a common angle. $\therefore m(\angle C) = m(\angle ABD)$

$\therefore \Delta BAC \sim \Delta DAB$ (the first req.)

$\therefore \Delta ABC$ is right-angled at B

$\therefore (AC)^2 = (AB)^2 + (BC)^2 = 9 + 16 = 25$

$\therefore AC = 5 \text{ cm.}$

$$\therefore \frac{AD}{AB} = \frac{AB}{AC} = \frac{BD}{CB} \quad \therefore \frac{AD}{3} = \frac{3}{5} = \frac{BD}{4}$$

$\therefore AD = \frac{3 \times 3}{5} = 1.8 \text{ cm.}$ (the second req.)

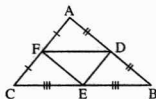
$\therefore DC = AC - AD$

$\therefore DC = 5 - 1.8 = 3.2 \text{ cm.}$ (the third req.)

20

$\therefore D$ is the midpoint of \overline{AB}

F is the midpoint of \overline{AC}



$\therefore DF = \frac{1}{2} BC$

$\therefore \frac{DF}{BC} = \frac{1}{2}$

similarly: $\frac{EF}{AB} = \frac{1}{2}$, $\frac{DE}{AC} = \frac{1}{2}$

$$\therefore \frac{DF}{BC} = \frac{EF}{AB} = \frac{DE}{AC}$$

$\therefore \Delta ABC \sim \Delta EFD$ (Q.E.D.)

21

Assuming that the triangle whose side lengths are given be ABC and the other is XYZ

\therefore The two triangles are similar.

$$\therefore \frac{AB}{XY} = \frac{BC}{YZ} = \frac{AC}{XZ} = \frac{\text{The perimeter of } \Delta ABC}{\text{The perimeter of } \Delta XYZ}$$

$$\therefore \frac{4.5}{XY} = \frac{6}{YZ} = \frac{8}{XZ} = \frac{18.5}{74}$$

\therefore The longest side is \overline{XZ}

$\therefore XZ = 32 \text{ cm.}$

(The req.)

22

- $\therefore \triangle AED \sim \triangle ADB$
 $\therefore m(\angle ADE) = m(\angle ADB)$
 $\therefore X + 20^\circ = 2X + 5^\circ \quad \therefore X = 15^\circ$
 $\therefore m(\angle ADE) = 15^\circ + 20^\circ = 35^\circ$ (the req.)

23

- $\therefore \overline{XY} \parallel \overline{BN}$, \overline{YZ} is a transversal to them.
 $\therefore m(\angle Y) = m(\angle NBZ)$ (corresponding angles) (1)
 $\therefore \overline{XY} \parallel \overline{BN}$, \overline{XZ} is a transversal to them.
 $\therefore m(\angle X) = m(\angle BNZ)$ (corresponding angles) (2)
 In $\triangle AXYZ$, $\angle BZ$:
 $\therefore \angle Z$ is a common angle.
 From (1) and (2):
 $\therefore \triangle XYZ \sim \triangle NBZ$ (4)
 Similarly we can prove that:
 $\triangle ABC \sim \triangle NBZ$ (5)
 From (4) and (5)
 $\therefore \triangle XYZ \sim \triangle NBZ \sim \triangle ABC$ (the first req.)
 From (5) we find that: $\frac{BZ}{BC} = \frac{NZ}{AC}$
 $\therefore \frac{4}{BC} = \frac{6}{12} \quad \therefore BC = 8$ cm.
 $\therefore Z$ is the midpoint of \overline{BC} (the second req.)
 Then $ZC = 4$ cm.
 From (4) we find that: $\frac{XZ}{NZ} = \frac{YZ}{BZ}$
 $\therefore \frac{8}{6} = \frac{YZ}{4} \quad \therefore YZ = \frac{32}{6} = 5\frac{1}{3}$ cm.
 $\therefore YC = YZ + ZC = 5\frac{1}{3} + 4 = 9\frac{1}{3}$ cm. (the third req.)

24

- $\therefore \overline{XY} \parallel \overline{AB}$, $\overline{AX} \parallel \overline{BY}$
 \therefore $ABYX$ is a parallelogram.
 $\therefore m(\angle B) = 90^\circ \quad \therefore$ $ABYX$ is a rectangle
 $\therefore BY = AX = 4$ cm.
 $\therefore BC = AD = 12$ cm. $\therefore YC = 12 - 4 = 8$ cm.
 $\therefore \triangle AXM$ is right-angled at X
 $\therefore (AM)^2 = (AX)^2 + (XM)^2 = 16 + 9 = 25$
 $\therefore AM = 5$ cm.
 In $\triangle AMX$, CMY :
 $m(\angle AXM) = m(\angle MYC) = 90^\circ$
 $m(\angle AMX) = m(\angle CMY)$ (V.O.A)
 $\therefore m(\angle XAM) = m(\angle MCY)$
 $\therefore \triangle AMX \sim \triangle CMY$ (the first req.)

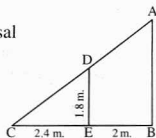
- $\therefore \frac{AX}{CY} = \frac{XM}{YM} = \frac{AM}{CM} \quad \therefore \frac{4}{8} = \frac{3}{YM} = \frac{5}{CM}$
 $\therefore YM = \frac{3 \times 8}{4} = 6$ cm $CM = \frac{5 \times 8}{4} = 10$ cm.
 \therefore The perimeter of $\triangle CYM = 6 + 10 + 8 = 24$ cm.
 (the second req.)
 $\therefore AB = CD \quad \therefore \frac{AB}{CD} = 1$
 $\therefore \frac{YM}{XM} = \frac{6}{3} = 2 \quad \therefore \frac{AB}{CD} \neq \frac{YM}{XM}$
 \therefore The figure $ABYM$ is not similar to the figure $CDXM$
 (the third req.)

25

- $\therefore \overline{DE} \parallel \overline{BC}$, \overline{EC} is a transversal to them.
 $\therefore m(\angle C) = m(\angle AED)$ (corresponding angles)
 Similarly we can prove that:
 $m(\angle B) = m(\angle ADE)$ (corresponding angles)
 In $\triangle ADE$, $\triangle ABC$:
 $\angle A$ is a common angle, $m(\angle C) = m(\angle AED)$,
 $m(\angle B) = m(\angle ADE)$
 $\therefore \triangle ABC \sim \triangle ADE$
 $\therefore \frac{AD}{AB} = \frac{AE}{AC} = \frac{DE}{BC}$
 $\therefore \frac{3}{(X+1)+3} = \frac{2}{(X-1)+2} = \frac{y}{12}$ (1)
 $\therefore \frac{3}{X+4} = \frac{2}{X+1} = \frac{y}{12} \quad \therefore 3(X+1) = 2(X+4)$
 $\therefore 3X + 3 = 2X + 8$
 $\therefore X = 5 \quad \therefore AB = 9$ cm. (the first req.)
 $EC = 4$ cm. (the second req.)
 Substituting in (1):
 $\therefore \frac{3}{9} = \frac{y}{12} \quad \therefore y = \frac{3 \times 12}{9} = 4$ cm.
 $\therefore DE = 4$ cm. (the third req.)

26

- $\therefore \overline{DE} \parallel \overline{AB}$, \overline{AC} is a transversal
 $\therefore m(\angle A) = m(\angle CDE)$
 (corresponding angles)
 $\therefore \overline{DE} \parallel \overline{AB}$, \overline{BC}
 is a transversal
 $\therefore m(\angle B) = m(\angle CED)$ (corresponding angles)
 $\therefore \angle C$ is common
 $\therefore \triangle ABC \sim \triangle DEC \quad \therefore \frac{AB}{DE} = \frac{BC}{EC} = \frac{AC}{DC}$
 $\therefore \frac{AB}{1.8} = \frac{4.4}{2.4}$
 $\therefore AB = \frac{1.8 \times 4.4}{2.4} = 3.3$ m. (The req.)



Geometry



27

In $\Delta ABC \sim \Delta DEC$:

$$\therefore m(\angle B) = m(\angle E) = 90^\circ$$

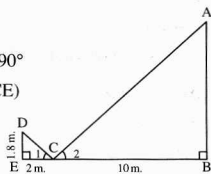
$$\therefore m(\angle ACB) = m(\angle DCE)$$

$$\therefore m(\angle A) = m(\angle D)$$

$$\therefore \Delta ABC \sim \Delta DEC$$

$$\therefore \frac{AB}{DE} = \frac{BC}{CE}$$

$$\therefore \frac{AB}{1.8} = \frac{10}{2} \quad \therefore AB = \frac{1.8 \times 10}{2} = 9 \text{ m. (The req.)}$$



28

$$\therefore \frac{AB}{BC} = \frac{DE}{EF}$$

$$\therefore AB = AC, DE = DF$$

$$\therefore \Delta ABC \sim \Delta DEF$$

$$\therefore \frac{AB}{DE} = \frac{BC}{EF}$$

$$\therefore \frac{AC}{DF} = \frac{AB}{DE} = \frac{BC}{EF} \quad (\text{Q.E.D.})$$

29

In ΔABC :

$$\therefore X + 2X + 3X = 180^\circ$$

$$\therefore 6X = 180^\circ$$

$$\therefore X = 30^\circ$$

$$\therefore m(\angle C) = 30^\circ, m(\angle B) = 60^\circ, m(\angle A) = 90^\circ$$

$$\therefore AB = \frac{1}{2} BC$$

$$\therefore AB = \frac{1}{2} \times 18 = 9 \text{ cm.}$$

$$\therefore \Delta ABC \sim \Delta DEF$$

$$\therefore \frac{AB}{DE} = \frac{BC}{EF}$$

$$\therefore \frac{9}{3} = \frac{18}{EF}$$

$$\therefore EF = 6 \text{ cm.}$$

(Q.E.D.)

30

Constr. :

Draw :

$$\overline{CE} \perp \overline{AB}, \overline{FZ} \perp \overline{XY}$$

Proof :

In the quadrilateral XLZF

$$\therefore m(\angle X) = m(\angle L) = m(\angle XFZ) = 90^\circ$$

$$\therefore m(\angle LZF) = 90^\circ$$

\therefore The figure XLZF is a rectangle.

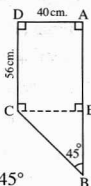
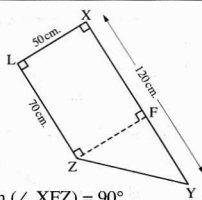
$$\therefore FZ = XL = 50, XF = LZ = 70 \text{ cm.}$$

$$\therefore FY = XY - XF = 120 - 70 = 50 \text{ cm.}$$

In ΔZFY which is right-angled at F :

$$\therefore FY = FZ$$

$$\therefore m(\angle Y) = m(\angle FZY) = \frac{180^\circ - 90^\circ}{2} = 45^\circ$$



$$\therefore (YZ)^2 = (FY)^2 + (FZ)^2$$

$$\therefore (YZ)^2 = 2500 + 2500 = 5000$$

$$\therefore YZ = 50\sqrt{2} \text{ cm.}$$

In the quadrilateral ADCE :

$$\therefore m(\angle A) = m(\angle D) = m(\angle AEC) = 90^\circ$$

$$\therefore m(\angle DCE) = 90^\circ$$

\therefore The figure ADCE is a rectangle.

$$\therefore EC = AD = 40 \text{ cm.}, AE = DC = 56 \text{ cm.}$$

In ΔBEC which is right-angled at E :

$$\therefore m(\angle B) = 45^\circ$$

$$\therefore m(\angle ECB) = 180^\circ - (90^\circ + 45^\circ) = 45^\circ$$

$$\therefore m(\angle B) = m(\angle ECB) \quad \therefore EB = EC = 40 \text{ cm.}$$

$$\therefore (BC)^2 = (BE)^2 + (EC)^2$$

$$\therefore (BC)^2 = 1600 + 1600 = 3200$$

$$\therefore BC = 40\sqrt{2} \text{ cm.}$$

$$\therefore AB = AE + EB \quad \therefore AB = 56 + 40 = 96 \text{ cm.}$$

In the two figures ABCD, XYZL :

$$\therefore m(\angle A) = m(\angle X) = 90^\circ, m(\angle B) = m(\angle Y) = 45^\circ$$

$$m(\angle C) = m(\angle Z) = 135^\circ$$

$$m(\angle D) = m(\angle L) = 90^\circ$$

$$\frac{AB}{XY} = \frac{96}{120} = \frac{4}{5}, \frac{BC}{YZ} = \frac{40\sqrt{2}}{50\sqrt{2}} = \frac{4}{5}$$

$$\frac{DC}{LZ} = \frac{56}{70} = \frac{4}{5}, \frac{AD}{LX} = \frac{40}{50} = \frac{4}{5}$$

$$\therefore \frac{AB}{XY} = \frac{BC}{YZ} = \frac{CD}{LZ} = \frac{DA}{LX} = \frac{4}{5}$$

\therefore The figure ABCD \sim the figure XYZL (The req.)

Answers of Exercise 7

1

Fig. (1) :

$$\therefore (AB)^2 = 25, (BC)^2 = 144, (AC)^2 = 169$$

$$\therefore (AC)^2 = (AB)^2 + (BC)^2$$

$$\therefore m(\angle B) = 90^\circ$$

Fig. (2) :

$$\therefore (AB)^2 = 225, (BC)^2 = 400, (AC)^2 = 625$$

$$\therefore (AC)^2 = (AB)^2 + (BC)^2$$

$$\therefore m(\angle B) = 90^\circ$$

Fig. (3) :

$$\therefore (AB)^2 = 324, (BC)^2 = 576, (AC)^2 = 900$$

$$\therefore (AC)^2 = (AB)^2 + (BC)^2$$

$$\therefore m(\angle B) = 90^\circ$$